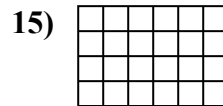

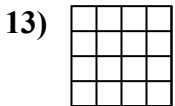
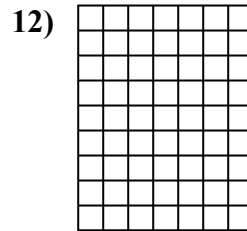
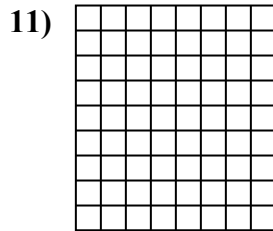
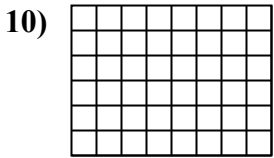
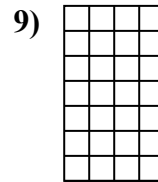
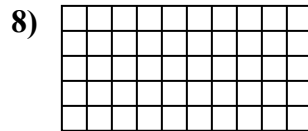
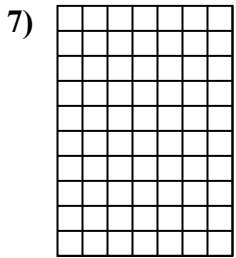
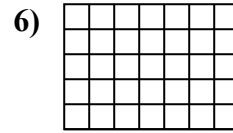
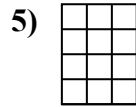
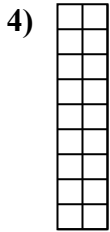
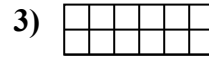

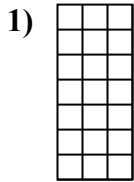




Determina el área. Cada □ = 1 unidad (u<sup>2</sup>)

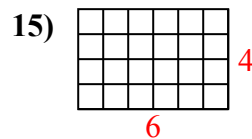
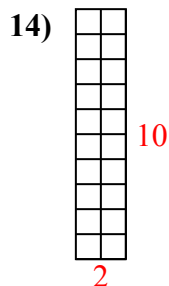
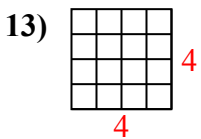
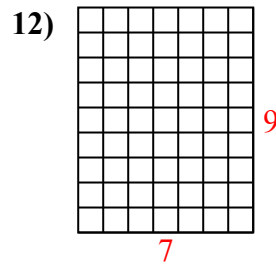
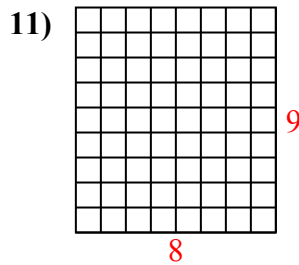
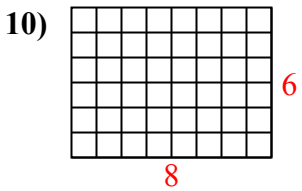
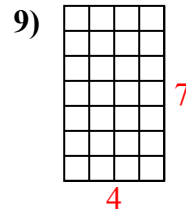
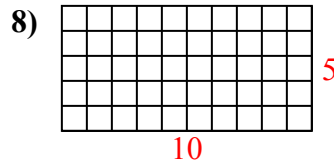
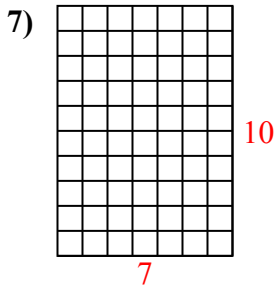
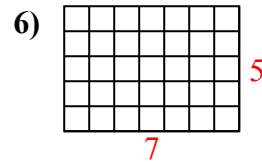
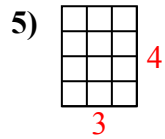
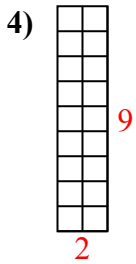
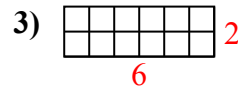
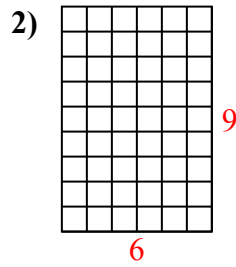
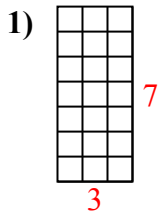


**Respuestas**

- 1. \_\_\_\_\_
- 2. \_\_\_\_\_
- 3. \_\_\_\_\_
- 4. \_\_\_\_\_
- 5. \_\_\_\_\_
- 6. \_\_\_\_\_
- 7. \_\_\_\_\_
- 8. \_\_\_\_\_
- 9. \_\_\_\_\_
- 10. \_\_\_\_\_
- 11. \_\_\_\_\_
- 12. \_\_\_\_\_
- 13. \_\_\_\_\_
- 14. \_\_\_\_\_
- 15. \_\_\_\_\_



Determina el área. Cada  $\square = 1$  unidad ( $u^2$ )



**Respuestas**

1. 21  $u^2$

2. 54  $u^2$

3. 12  $u^2$

4. 18  $u^2$

5. 12  $u^2$

6. 35  $u^2$

7. 70  $u^2$

8. 50  $u^2$

9. 28  $u^2$

10. 48  $u^2$

11. 72  $u^2$

12. 63  $u^2$

13. 16  $u^2$

14. 20  $u^2$

15. 24  $u^2$