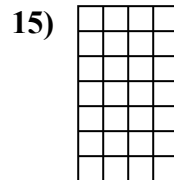
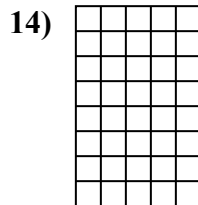
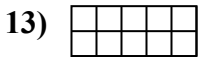
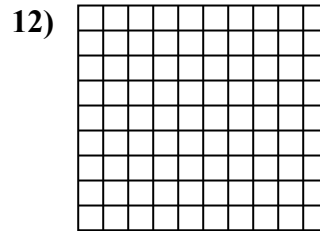
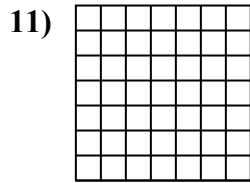
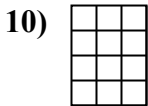
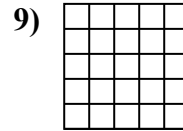
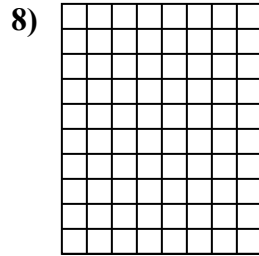
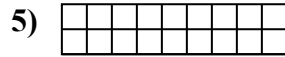
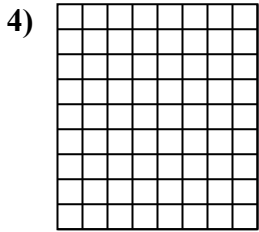
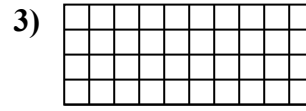
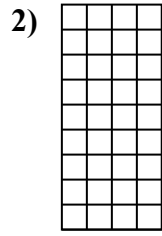
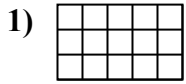




Determina el área. Cada $\square = 1$ unidad (u^2)

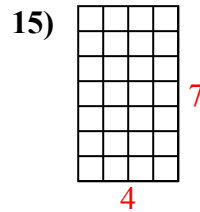
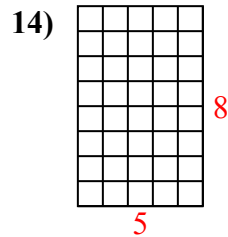
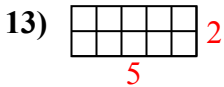
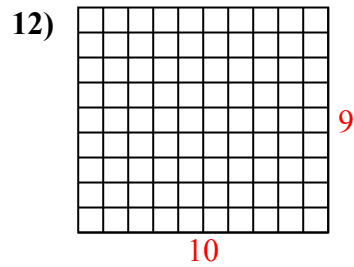
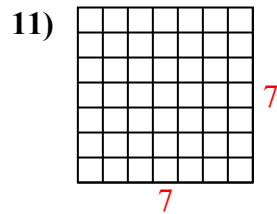
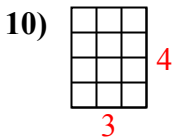
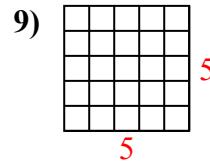
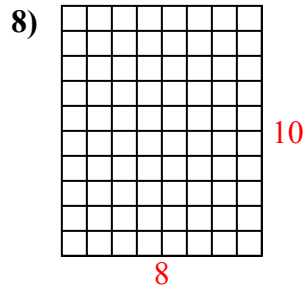
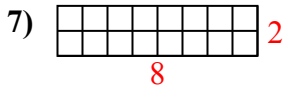
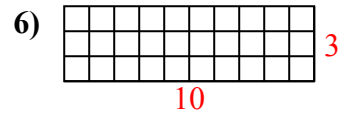
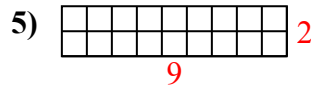
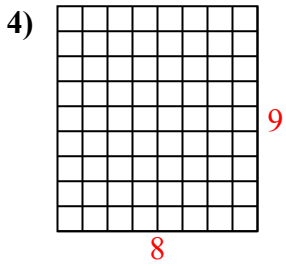
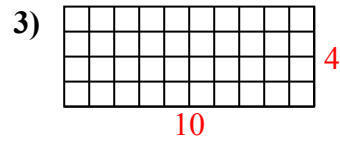
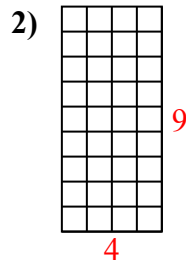
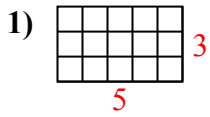


Respuestas

1. _____
2. _____
3. _____
4. _____
5. _____
6. _____
7. _____
8. _____
9. _____
10. _____
11. _____
12. _____
13. _____
14. _____
15. _____



Determina el área. Cada $\square = 1$ unidad (u^2)



Respuestas

1. 15 u^2

2. 36 u^2

3. 40 u^2

4. 72 u^2

5. 18 u^2

6. 30 u^2

7. 16 u^2

8. 80 u^2

9. 25 u^2

10. 12 u^2

11. 49 u^2

12. 90 u^2

13. 10 u^2

14. 40 u^2

15. 28 u^2