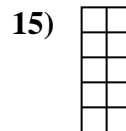

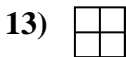
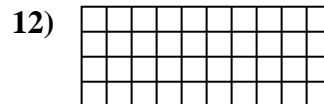
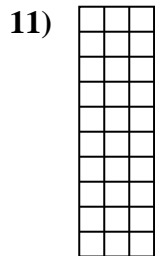
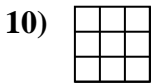
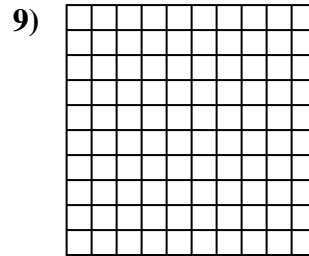
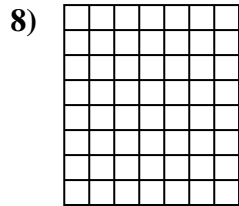
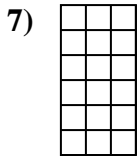
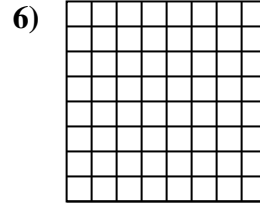
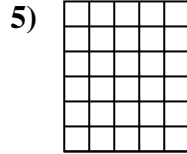
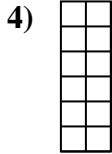
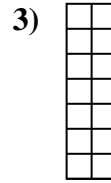
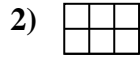
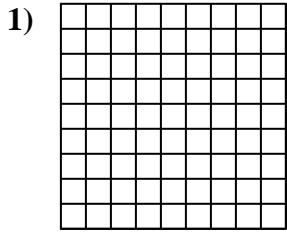




Determina el área. Cada  $\square = 1$  unidad ( $u^2$ )

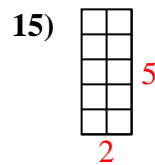
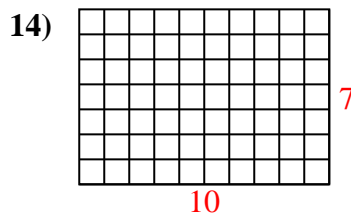
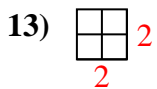
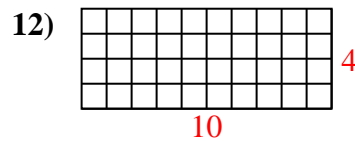
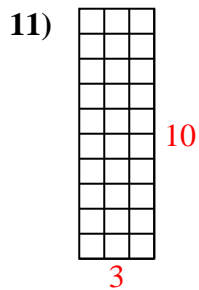
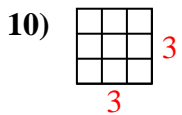
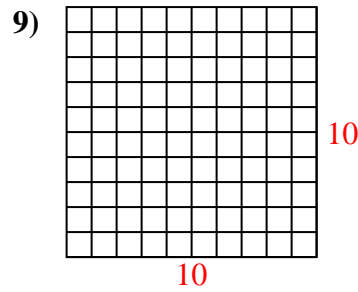
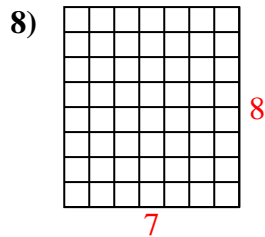
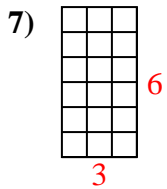
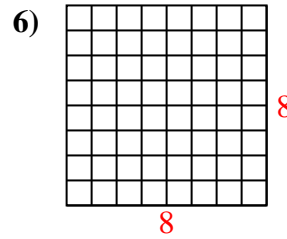
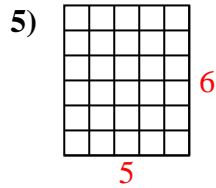
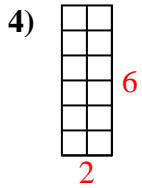
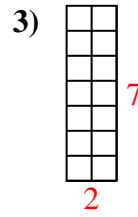
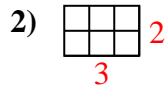
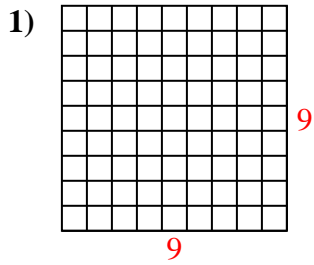


**Respuestas**

1. \_\_\_\_\_
2. \_\_\_\_\_
3. \_\_\_\_\_
4. \_\_\_\_\_
5. \_\_\_\_\_
6. \_\_\_\_\_
7. \_\_\_\_\_
8. \_\_\_\_\_
9. \_\_\_\_\_
10. \_\_\_\_\_
11. \_\_\_\_\_
12. \_\_\_\_\_
13. \_\_\_\_\_
14. \_\_\_\_\_
15. \_\_\_\_\_



Determina el área. Cada  $\square = 1$  unidad ( $u^2$ )



**Respuestas**

1. 81 u<sup>2</sup>

2. 6 u<sup>2</sup>

3. 14 u<sup>2</sup>

4. 12 u<sup>2</sup>

5. 30 u<sup>2</sup>

6. 64 u<sup>2</sup>

7. 18 u<sup>2</sup>

8. 56 u<sup>2</sup>

9. 100 u<sup>2</sup>

10. 9 u<sup>2</sup>

11. 30 u<sup>2</sup>

12. 40 u<sup>2</sup>

13. 4 u<sup>2</sup>

14. 70 u<sup>2</sup>

15. 10 u<sup>2</sup>