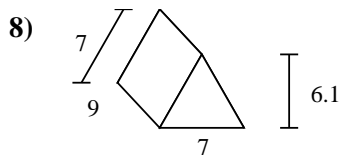
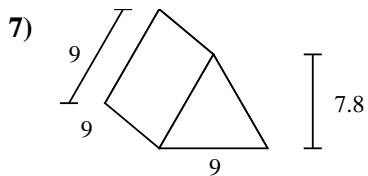
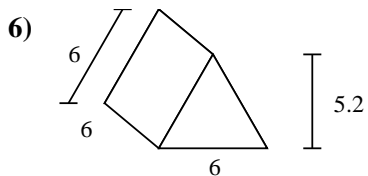
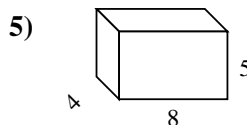
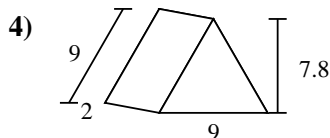
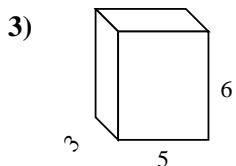
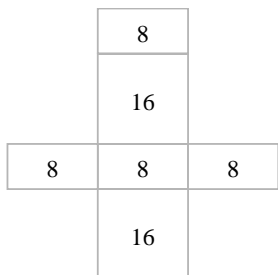
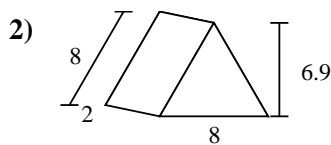
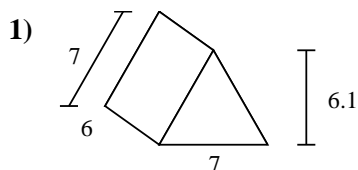
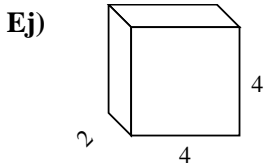




Encuentra el área de las superficies de cada figura.



**Respuestas**

Ej. 64 cm<sup>2</sup>

1. \_\_\_\_\_

2. \_\_\_\_\_

3. \_\_\_\_\_

4. \_\_\_\_\_

5. \_\_\_\_\_

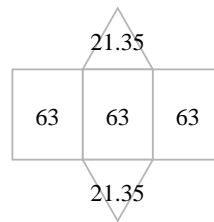
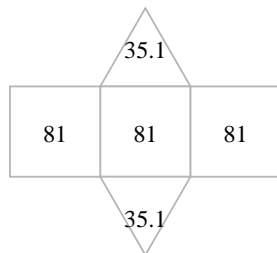
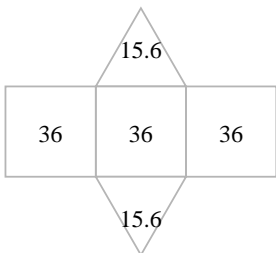
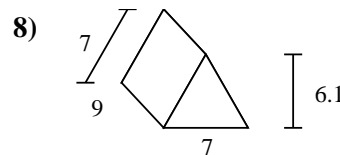
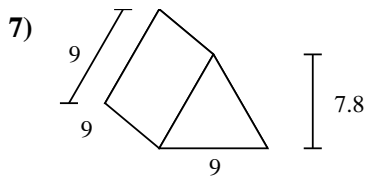
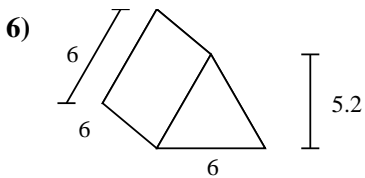
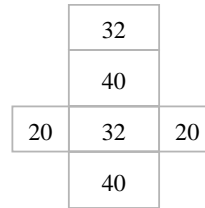
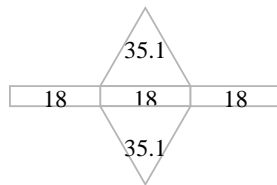
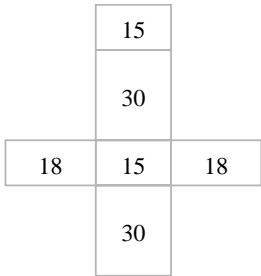
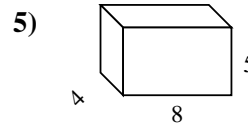
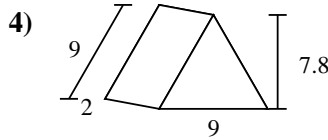
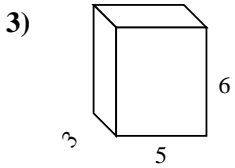
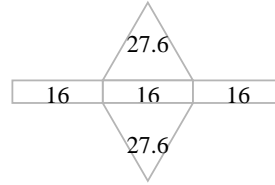
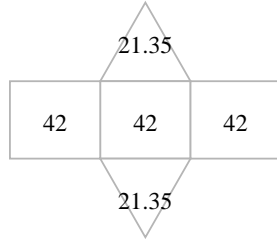
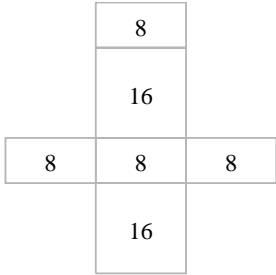
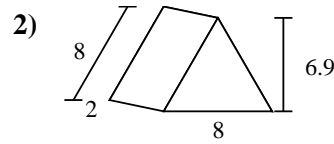
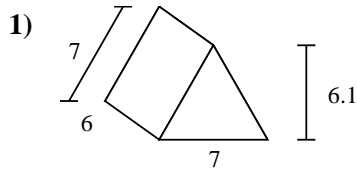
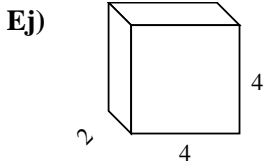
6. \_\_\_\_\_

7. \_\_\_\_\_

8. \_\_\_\_\_



Encuentra el área de las superficies de cada figura.



**Respuestas**

Ej. 64 cm<sup>2</sup>

1. 168.7 cm<sup>2</sup>

2. 103.2 cm<sup>2</sup>

3. 126 cm<sup>2</sup>

4. 124.2 cm<sup>2</sup>

5. 184 cm<sup>2</sup>

6. 139.2 cm<sup>2</sup>

7. 313.2 cm<sup>2</sup>

8. 231.7 cm<sup>2</sup>