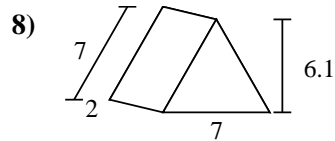
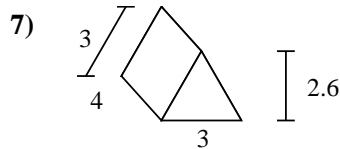
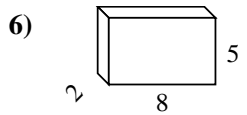
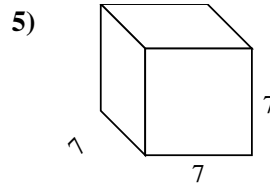
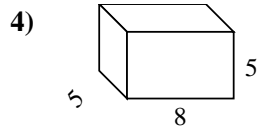
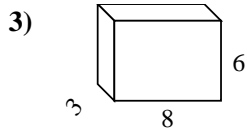
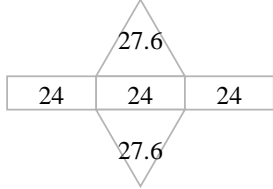
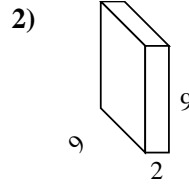
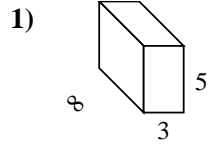
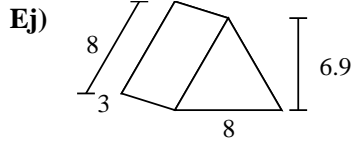




Encuentra el área de las superficies de cada figura.



**Respuestas**

Ej. **127.2 cm<sup>2</sup>**

1. \_\_\_\_\_

2. \_\_\_\_\_

3. \_\_\_\_\_

4. \_\_\_\_\_

5. \_\_\_\_\_

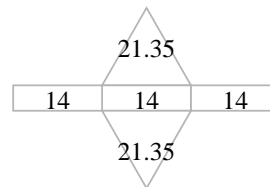
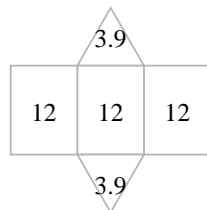
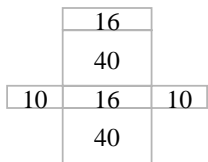
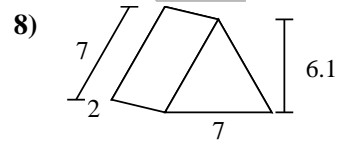
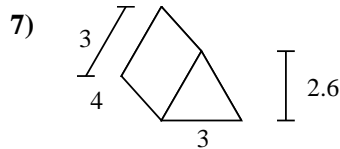
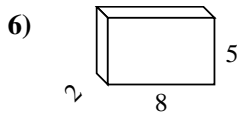
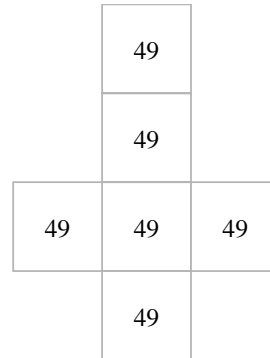
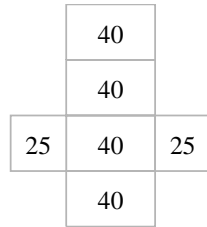
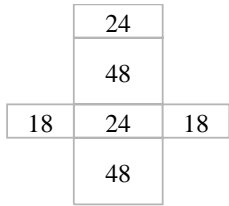
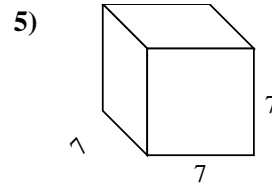
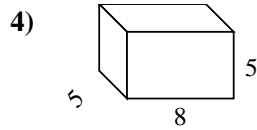
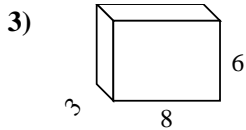
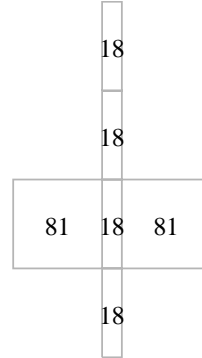
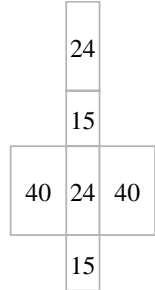
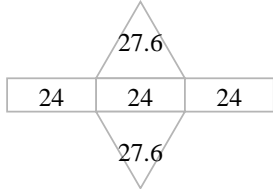
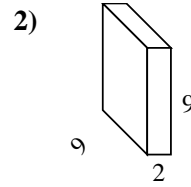
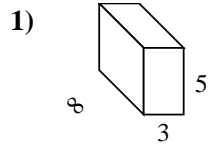
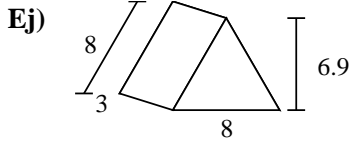
6. \_\_\_\_\_

7. \_\_\_\_\_

8. \_\_\_\_\_



Encuentra el área de las superficies de cada figura.



**Respuestas**

Ej. 127.2 cm<sup>2</sup>

1. 158 cm<sup>2</sup>

2. 234 cm<sup>2</sup>

3. 180 cm<sup>2</sup>

4. 210 cm<sup>2</sup>

5. 294 cm<sup>2</sup>

6. 132 cm<sup>2</sup>

7. 43.8 cm<sup>2</sup>

8. 84.7 cm<sup>2</sup>