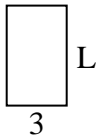


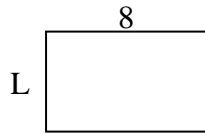


Determina el valor de "P"

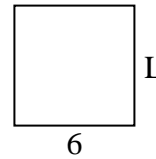
1) Área = 15 u^2



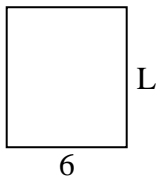
2) Área = 40 u^2



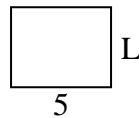
3) Área = 36 u^2



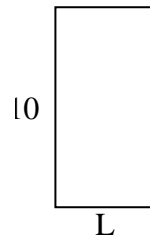
4) Área = 42 u^2



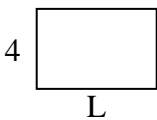
5) Área = 20 u^2



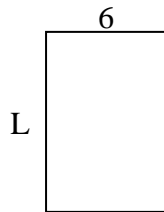
6) Área = 50 u^2



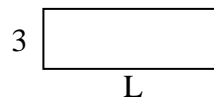
7) Área = 24 u^2



8) Área = 54 u^2



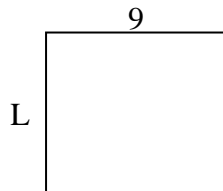
9) Área = 27 u^2



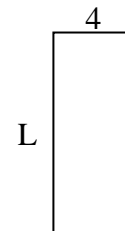
10) Área = 6 u^2



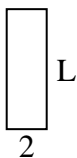
11) Área = 72 u^2



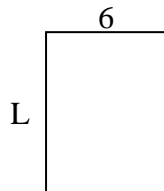
12) Área = 40 u^2



13) Área = 12 u^2



14) Área = 48 u^2



15) Área = 60 u^2



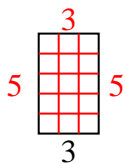
Respuestas

1. _____
2. _____
3. _____
4. _____
5. _____
6. _____
7. _____
8. _____
9. _____
10. _____
11. _____
12. _____
13. _____
14. _____
15. _____

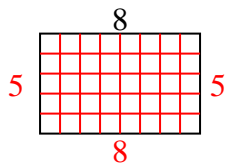


Determina el valor de "P"

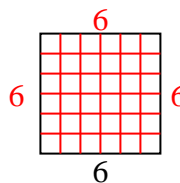
1) Área = 15 u^2



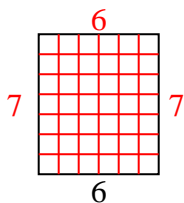
2) Área = 40 u^2



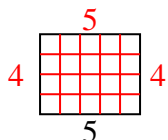
3) Área = 36 u^2



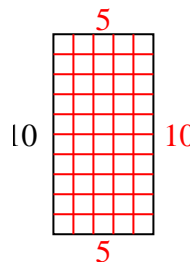
4) Área = 42 u^2



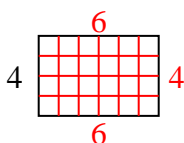
5) Área = 20 u^2



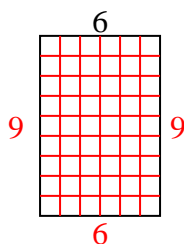
6) Área = 50 u^2



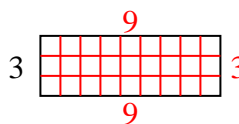
7) Área = 24 u^2



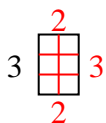
8) Área = 54 u^2



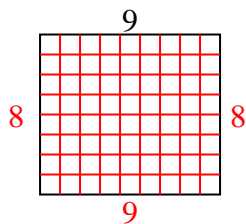
9) Área = 27 u^2



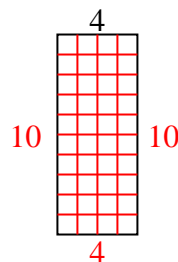
10) Área = 6 u^2



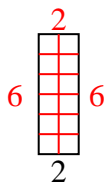
11) Área = 72 u^2



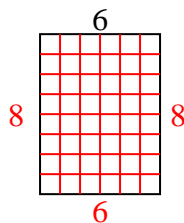
12) Área = 40 u^2



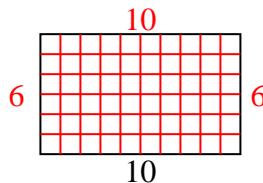
13) Área = 12 u^2



14) Área = 48 u^2



15) Área = 60 u^2



Respuestas

1. 5

2. 5

3. 6

4. 7

5. 4

6. 5

7. 6

8. 9

9. 9

10. 2

11. 8

12. 10

13. 6

14. 8

15. 6