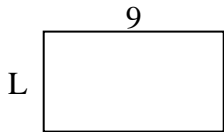


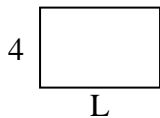


Determina el valor de "P"

1) Área = 45 u^2



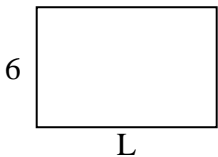
2) Área = 24 u^2



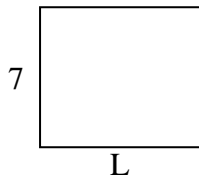
3) Área = 9 u^2



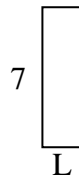
4) Área = 54 u^2




5) Área = 56 u^2



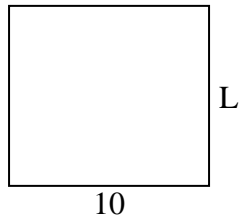
6) Área = 14 u^2



7) Área = 32 u^2



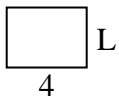
8) Área = 90 u^2




9) Área = 18 u^2



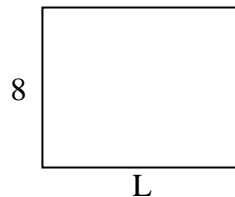
10) Área = 12 u^2



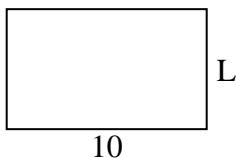
11) Área = 40 u^2



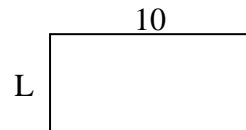
12) Área = 80 u^2




13) Área = 60 u^2



14) Área = 50 u^2



15) Área = 30 u^2



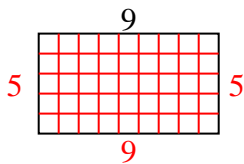
Respuestas

1. _____
2. _____
3. _____
4. _____
5. _____
6. _____
7. _____
8. _____
9. _____
10. _____
11. _____
12. _____
13. _____
14. _____
15. _____

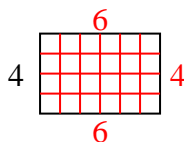


Determina el valor de "P"

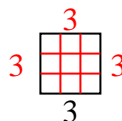
1) Área = 45 u^2



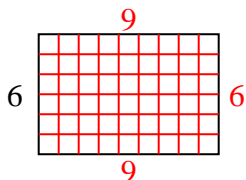
2) Área = 24 u^2



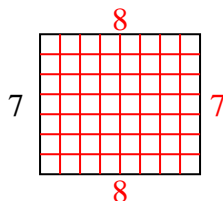
3) Área = 9 u^2



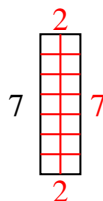
4) Área = 54 u^2



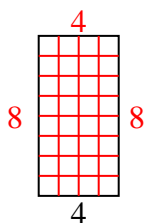
5) Área = 56 u^2



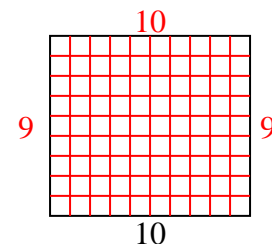
6) Área = 14 u^2



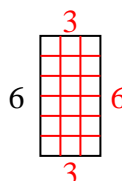
7) Área = 32 u^2



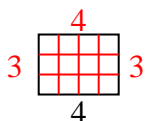
8) Área = 90 u^2



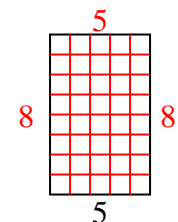
9) Área = 18 u^2



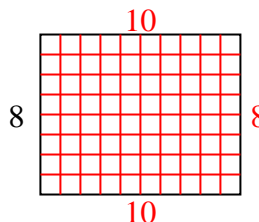
10) Área = 12 u^2



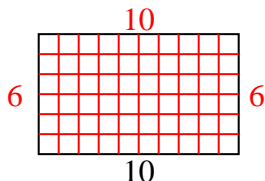
11) Área = 40 u^2



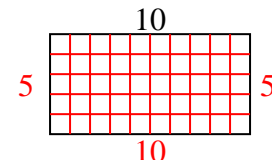
12) Área = 80 u^2



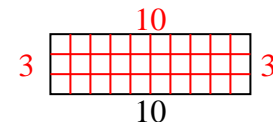
13) Área = 60 u^2



14) Área = 50 u^2



15) Área = 30 u^2

**Respuestas**1. 52. 63. 34. 95. 86. 27. 88. 99. 310. 311. 812. 1013. 614. 515. 3