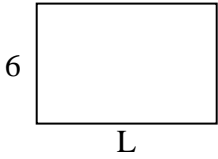


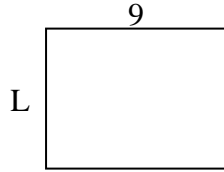


Determina el valor de "P"

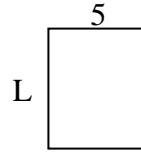
1) Área = 54 u^2



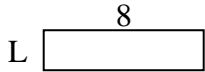
2) Área = 63 u^2



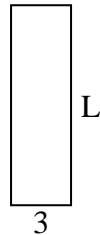
3) Área = 30 u^2




4) Área = 16 u^2



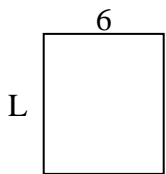
5) Área = 30 u^2



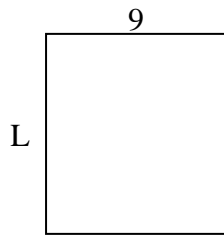
6) Área = 21 u^2



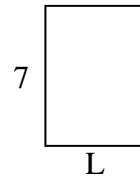
7) Área = 42 u^2



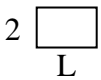
8) Área = 90 u^2



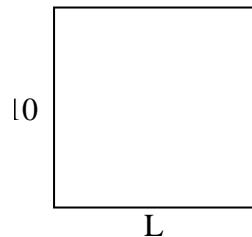
9) Área = 35 u^2



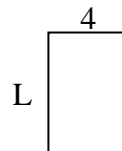
10) Área = 6 u^2



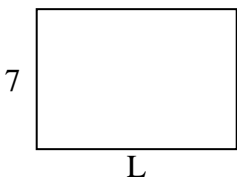
11) Área = 100 u^2



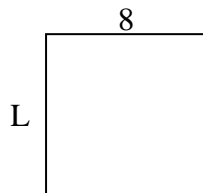
12) Área = 24 u^2



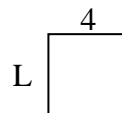
13) Área = 70 u^2



14) Área = 64 u^2



15) Área = 16 u^2



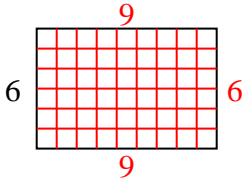
Respuestas

1. _____
2. _____
3. _____
4. _____
5. _____
6. _____
7. _____
8. _____
9. _____
10. _____
11. _____
12. _____
13. _____
14. _____
15. _____

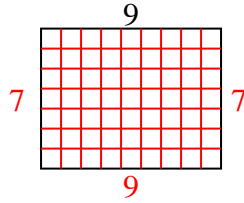


Determina el valor de "P"

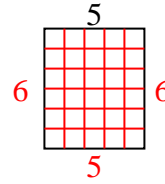
1) Área = $54 u^2$



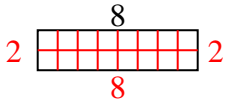
2) Área = $63 u^2$



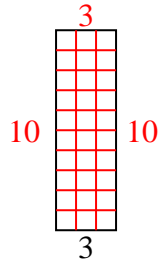
3) Área = $30 u^2$



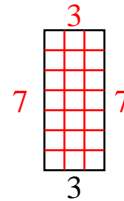
4) Área = $16 u^2$



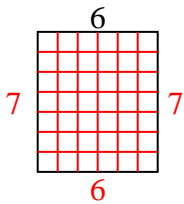
5) Área = $30 u^2$



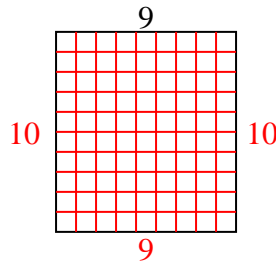
6) Área = $21 u^2$



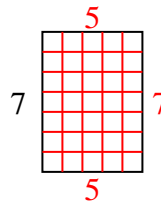
7) Área = $42 u^2$



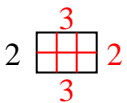
8) Área = $90 u^2$



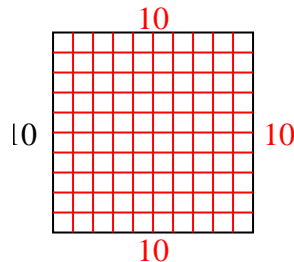
9) Área = $35 u^2$



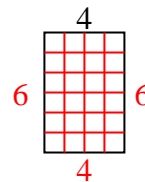
10) Área = $6 u^2$



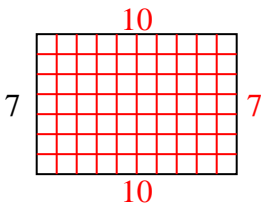
11) Área = $100 u^2$



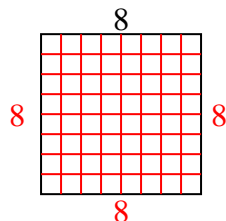
12) Área = $24 u^2$



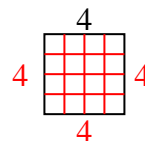
13) Área = $70 u^2$



14) Área = $64 u^2$



15) Área = $16 u^2$



Respuestas

1. 9

2. 7

3. 6

4. 2

5. 10

6. 7

7. 7

8. 10

9. 5

10. 3

11. 10

12. 6

13. 10

14. 8

15. 4