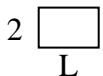


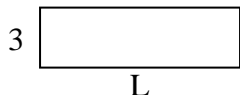


Determina el valor de "P"

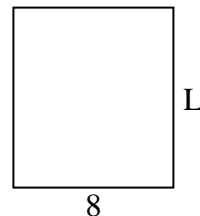
1) Área = $6 u^2$



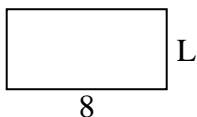
2) Área = $30 u^2$



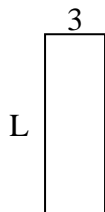
3) Área = $72 u^2$



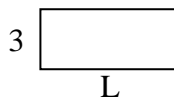
4) Área = $32 u^2$



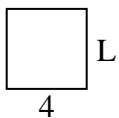
5) Área = $27 u^2$



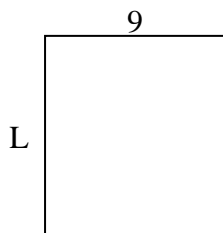
6) Área = $21 u^2$



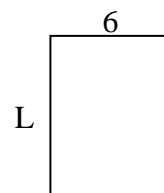
7) Área = $16 u^2$



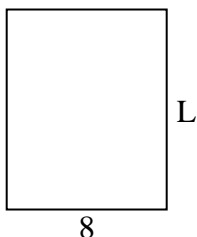
8) Área = $90 u^2$



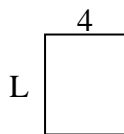
9) Área = $48 u^2$




10) Área = $80 u^2$



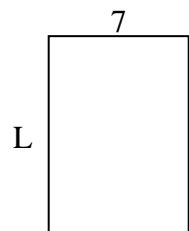
11) Área = $20 u^2$



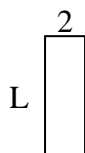
12) Área = $10 u^2$



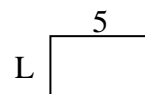
13) Área = $70 u^2$



14) Área = $12 u^2$



15) Área = $15 u^2$



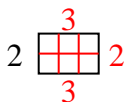
Respuestas

1. _____
2. _____
3. _____
4. _____
5. _____
6. _____
7. _____
8. _____
9. _____
10. _____
11. _____
12. _____
13. _____
14. _____
15. _____

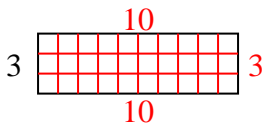


Determina el valor de "P"

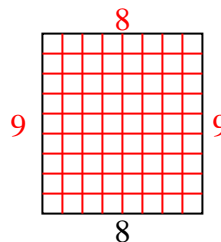
1) Área = $6 u^2$



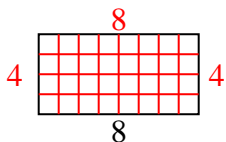
2) Área = $30 u^2$



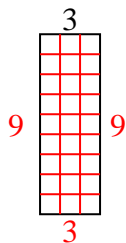
3) Área = $72 u^2$



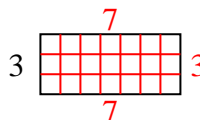
4) Área = $32 u^2$



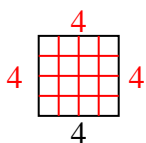
5) Área = $27 u^2$



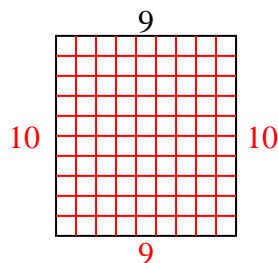
6) Área = $21 u^2$



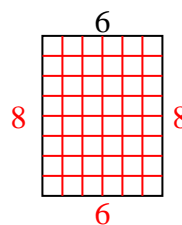
7) Área = $16 u^2$



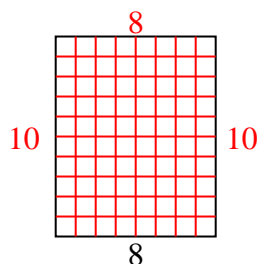
8) Área = $90 u^2$



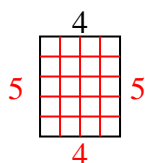
9) Área = $48 u^2$



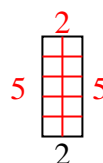
10) Área = $80 u^2$



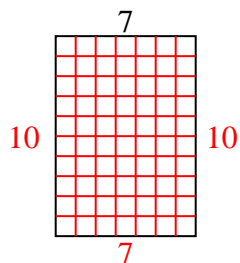
11) Área = $20 u^2$



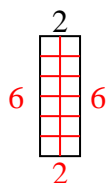
12) Área = $10 u^2$



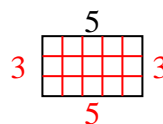
13) Área = $70 u^2$



14) Área = $12 u^2$



15) Área = $15 u^2$



Respuestas

1. 3

2. 10

3. 9

4. 4

5. 9

6. 7

7. 4

8. 10

9. 8

10. 10

11. 5

12. 5

13. 10

14. 6

15. 3