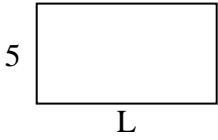


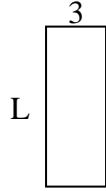


Determina el valor de "P"

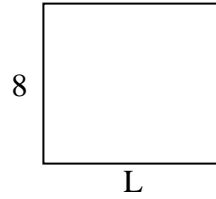
1) Área = 45 u^2



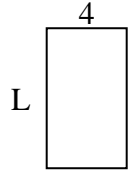
2) Área = 24 u^2



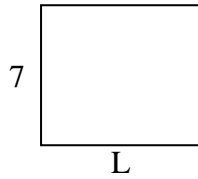
3) Área = 72 u^2



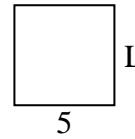
4) Área = 28 u^2



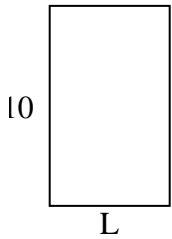
5) Área = 56 u^2



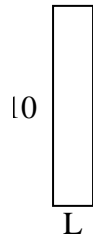
6) Área = 25 u^2



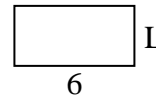
7) Área = 60 u^2



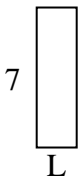
8) Área = 20 u^2



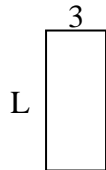
9) Área = 18 u^2



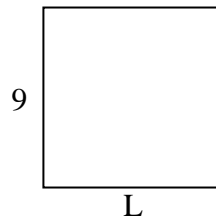
10) Área = 14 u^2



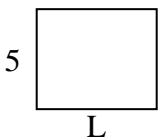
11) Área = 21 u^2



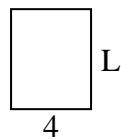
12) Área = 81 u^2



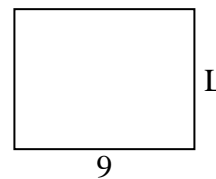
13) Área = 30 u^2



14) Área = 20 u^2



15) Área = 63 u^2



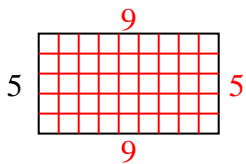
Respuestas

1. _____
2. _____
3. _____
4. _____
5. _____
6. _____
7. _____
8. _____
9. _____
10. _____
11. _____
12. _____
13. _____
14. _____
15. _____

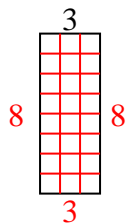


Determina el valor de "P"

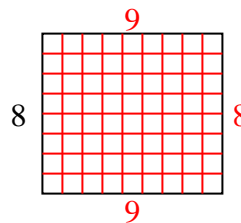
1) Área = 45 u^2



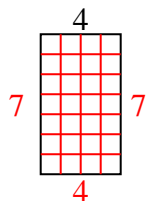
2) Área = 24 u^2



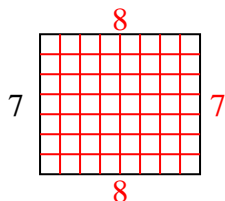
3) Área = 72 u^2



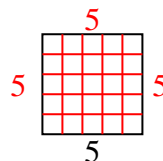
4) Área = 28 u^2



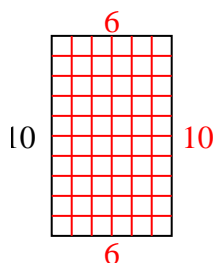
5) Área = 56 u^2



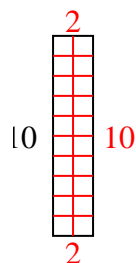
6) Área = 25 u^2



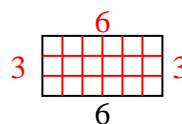
7) Área = 60 u^2



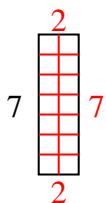
8) Área = 20 u^2



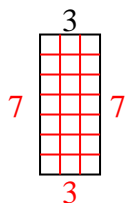
9) Área = 18 u^2



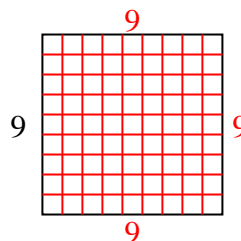
10) Área = 14 u^2



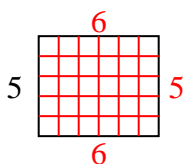
11) Área = 21 u^2



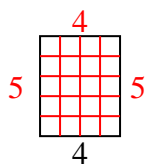
12) Área = 81 u^2



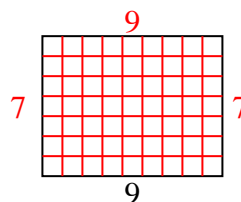
13) Área = 30 u^2



14) Área = 20 u^2



15) Área = 63 u^2

**Respuestas**1. 92. 83. 94. 75. 86. 57. 68. 29. 310. 211. 712. 913. 614. 515. 7