

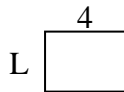


**Determina el valor de "P"**

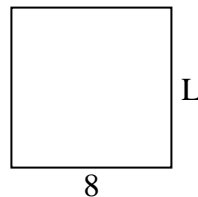
1) Área =  $16 \text{ u}^2$



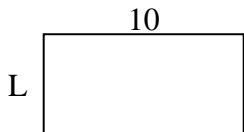
2) Área =  $12 \text{ u}^2$



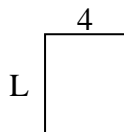
3) Área =  $64 \text{ u}^2$



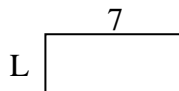
4) Área =  $50 \text{ u}^2$



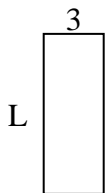
5) Área =  $20 \text{ u}^2$



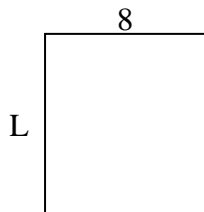
6) Área =  $21 \text{ u}^2$



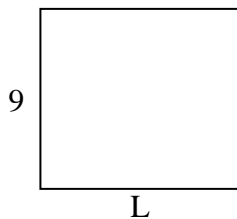
7) Área =  $24 \text{ u}^2$



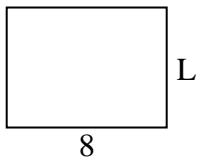
8) Área =  $72 \text{ u}^2$



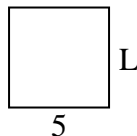
9) Área =  $90 \text{ u}^2$



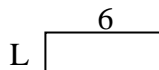
10) Área =  $48 \text{ u}^2$



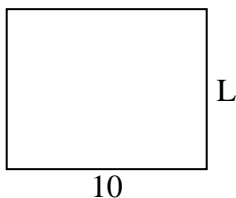
11) Área =  $25 \text{ u}^2$




12) Área =  $12 \text{ u}^2$



13) Área =  $80 \text{ u}^2$



14) Área =  $20 \text{ u}^2$



15) Área =  $14 \text{ u}^2$



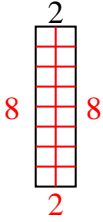
**Respuestas**

1. \_\_\_\_\_
2. \_\_\_\_\_
3. \_\_\_\_\_
4. \_\_\_\_\_
5. \_\_\_\_\_
6. \_\_\_\_\_
7. \_\_\_\_\_
8. \_\_\_\_\_
9. \_\_\_\_\_
10. \_\_\_\_\_
11. \_\_\_\_\_
12. \_\_\_\_\_
13. \_\_\_\_\_
14. \_\_\_\_\_
15. \_\_\_\_\_

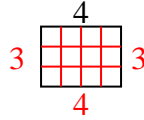


Determina el valor de "P"

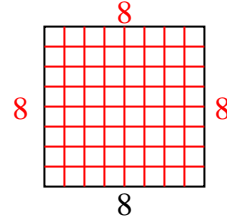
1) Área =  $16 u^2$



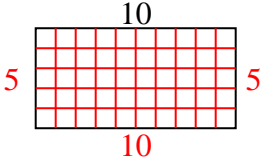
2) Área =  $12 u^2$



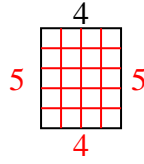
3) Área =  $64 u^2$



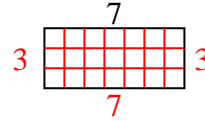
4) Área =  $50 u^2$



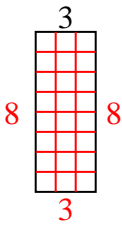
5) Área =  $20 u^2$



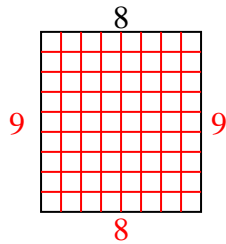
6) Área =  $21 u^2$



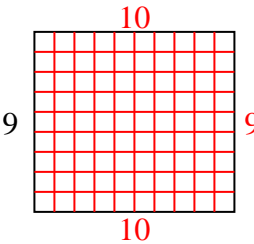
7) Área =  $24 u^2$



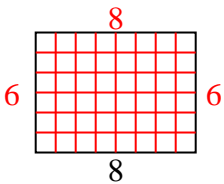
8) Área =  $72 u^2$



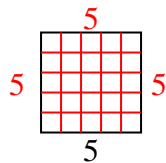
9) Área =  $90 u^2$



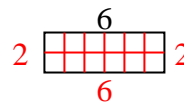
10) Área =  $48 u^2$



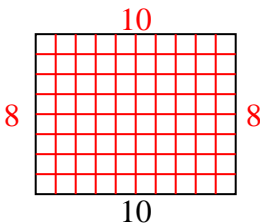
11) Área =  $25 u^2$



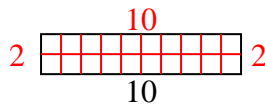
12) Área =  $12 u^2$



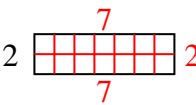
13) Área =  $80 u^2$



14) Área =  $20 u^2$



15) Área =  $14 u^2$



**Respuestas**

1. 8
2. 3
3. 8
4. 5
5. 5
6. 3
7. 8
8. 9
9. 10
10. 6
11. 5
12. 2
13. 8
14. 2
15. 7