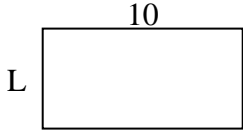


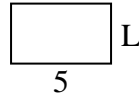


**Determina el valor de "P"**

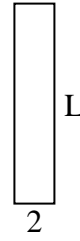
1) Área =  $50 \text{ u}^2$




2) Área =  $15 \text{ u}^2$



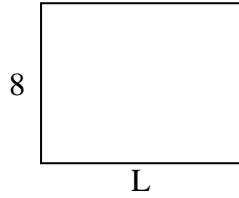
3) Área =  $20 \text{ u}^2$



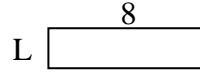
4) Área =  $32 \text{ u}^2$



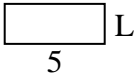
5) Área =  $80 \text{ u}^2$



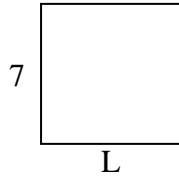
6) Área =  $16 \text{ u}^2$



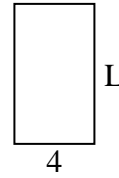
7) Área =  $10 \text{ u}^2$



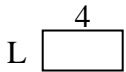
8) Área =  $49 \text{ u}^2$



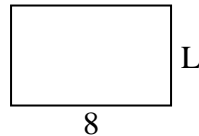
9) Área =  $28 \text{ u}^2$



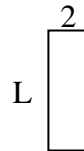
10) Área =  $8 \text{ u}^2$



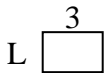
11) Área =  $40 \text{ u}^2$



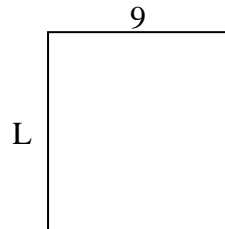
12) Área =  $12 \text{ u}^2$



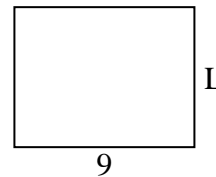
13) Área =  $6 \text{ u}^2$



14) Área =  $90 \text{ u}^2$



15) Área =  $63 \text{ u}^2$



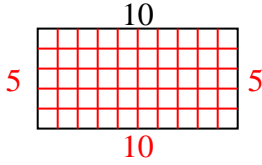
**Respuestas**

1. \_\_\_\_\_
2. \_\_\_\_\_
3. \_\_\_\_\_
4. \_\_\_\_\_
5. \_\_\_\_\_
6. \_\_\_\_\_
7. \_\_\_\_\_
8. \_\_\_\_\_
9. \_\_\_\_\_
10. \_\_\_\_\_
11. \_\_\_\_\_
12. \_\_\_\_\_
13. \_\_\_\_\_
14. \_\_\_\_\_
15. \_\_\_\_\_

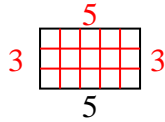


Determina el valor de "P"

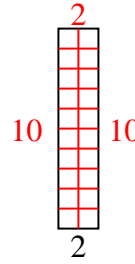
1) Área =  $50 u^2$



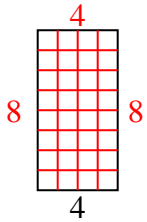
2) Área =  $15 u^2$



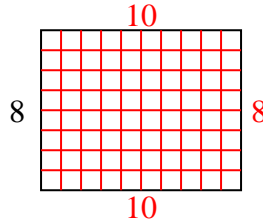
3) Área =  $20 u^2$



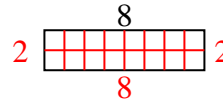
4) Área =  $32 u^2$



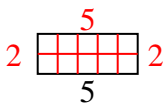
5) Área =  $80 u^2$



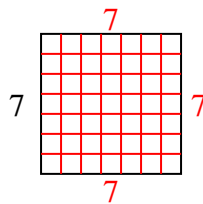
6) Área =  $16 u^2$



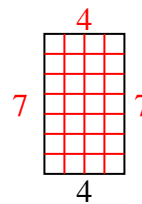
7) Área =  $10 u^2$



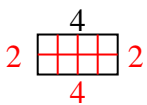
8) Área =  $49 u^2$



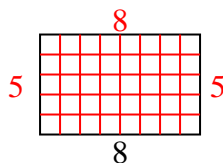
9) Área =  $28 u^2$



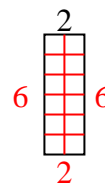
10) Área =  $8 u^2$



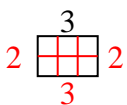
11) Área =  $40 u^2$



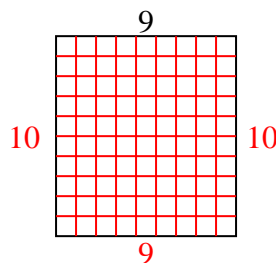
12) Área =  $12 u^2$



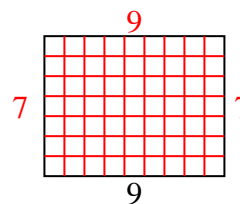
13) Área =  $6 u^2$



14) Área =  $90 u^2$



15) Área =  $63 u^2$



**Respuestas**

1. 5
2. 3
3. 10
4. 8
5. 10
6. 2
7. 2
8. 7
9. 7
10. 2
11. 5
12. 6
13. 2
14. 10
15. 7