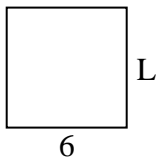


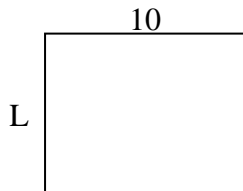


Determina el valor de "P"

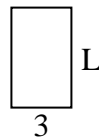
1) Área = 36 u^2




2) Área = 80 u^2



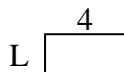
3) Área = 15 u^2



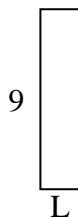
4) Área = 45 u^2



5) Área = 8 u^2



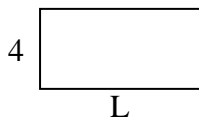
6) Área = 18 u^2



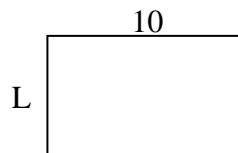
7) Área = 6 u^2



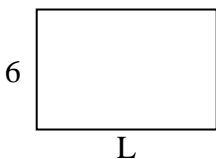
8) Área = 32 u^2



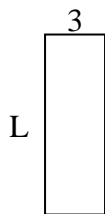
9) Área = 60 u^2



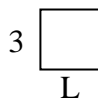
10) Área = 54 u^2



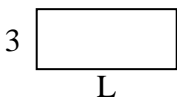
11) Área = 27 u^2



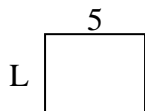
12) Área = 9 u^2



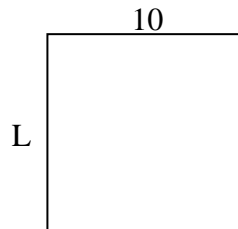
13) Área = 21 u^2



14) Área = 20 u^2



15) Área = 100 u^2



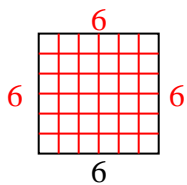
Respuestas

1. _____
2. _____
3. _____
4. _____
5. _____
6. _____
7. _____
8. _____
9. _____
10. _____
11. _____
12. _____
13. _____
14. _____
15. _____

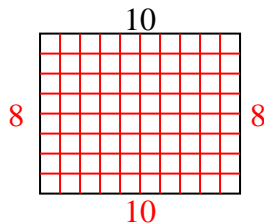


Determina el valor de "P"

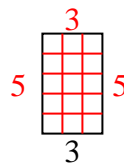
1) Área = $36 u^2$



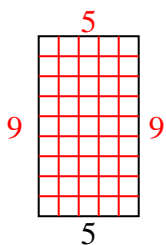
2) Área = $80 u^2$



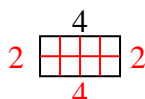
3) Área = $15 u^2$



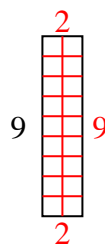
4) Área = $45 u^2$



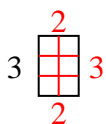
5) Área = $8 u^2$



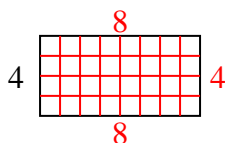
6) Área = $18 u^2$



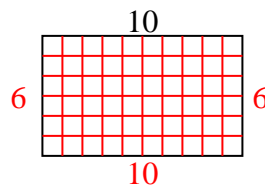
7) Área = $6 u^2$



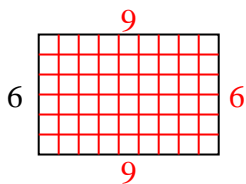
8) Área = $32 u^2$



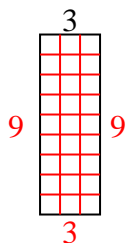
9) Área = $60 u^2$



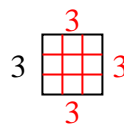
10) Área = $54 u^2$



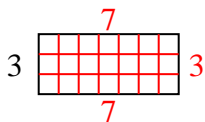
11) Área = $27 u^2$



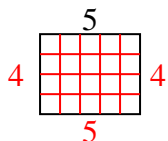
12) Área = $9 u^2$



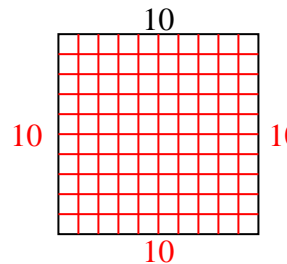
13) Área = $21 u^2$



14) Área = $20 u^2$



15) Área = $100 u^2$

**Respuestas**1. 62. 83. 54. 95. 26. 27. 28. 89. 610. 911. 912. 313. 714. 415. 10