




Determina el valor de "P"

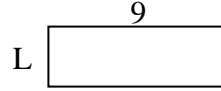
1) Área = 30 u^2



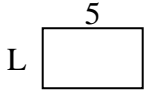
2) Área = 4 u^2



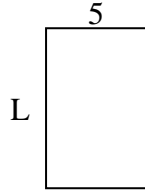
3) Área = 27 u^2



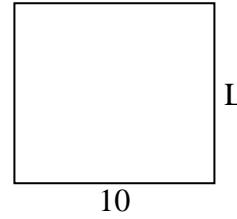
4) Área = 15 u^2



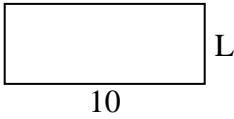
5) Área = 40 u^2



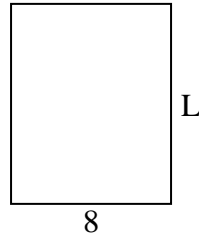
6) Área = 90 u^2



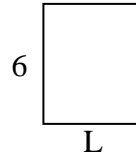
7) Área = 40 u^2



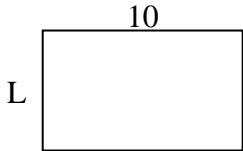
8) Área = 80 u^2



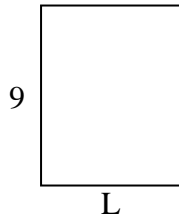
9) Área = 30 u^2



10) Área = 60 u^2



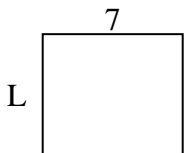
11) Área = 63 u^2



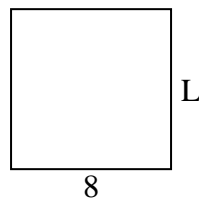
12) Área = 21 u^2




13) Área = 42 u^2



14) Área = 64 u^2



15) Área = 28 u^2



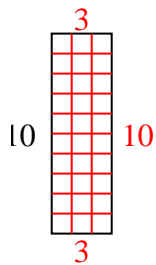
Respuestas

1. _____
2. _____
3. _____
4. _____
5. _____
6. _____
7. _____
8. _____
9. _____
10. _____
11. _____
12. _____
13. _____
14. _____
15. _____

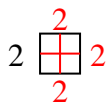


Determina el valor de "P"

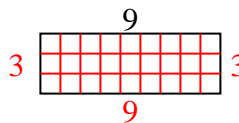
1) Área = $30 u^2$



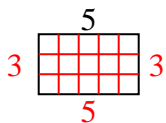
2) Área = $4 u^2$



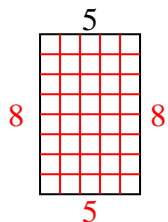
3) Área = $27 u^2$



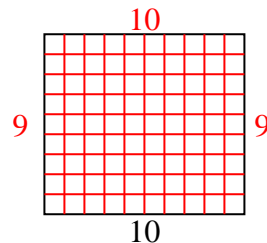
4) Área = $15 u^2$



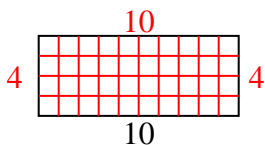
5) Área = $40 u^2$



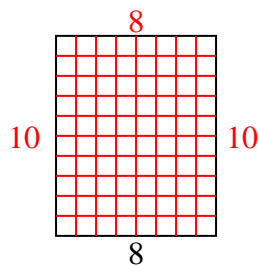
6) Área = $90 u^2$



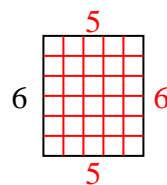
7) Área = $40 u^2$



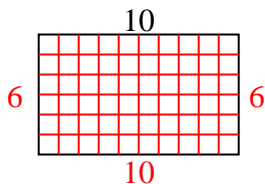
8) Área = $80 u^2$



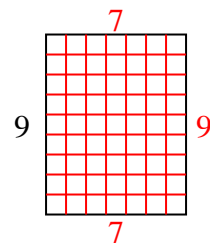
9) Área = $30 u^2$



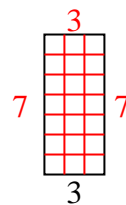
10) Área = $60 u^2$



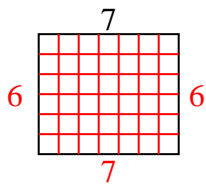
11) Área = $63 u^2$



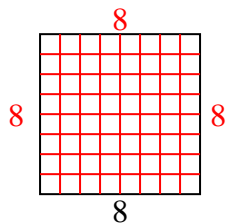
12) Área = $21 u^2$



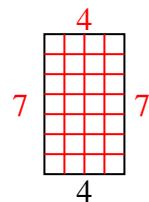
13) Área = $42 u^2$



14) Área = $64 u^2$



15) Área = $28 u^2$



Respuestas

1. 3
2. 2
3. 3
4. 3
5. 8
6. 9
7. 4
8. 10
9. 5
10. 6
11. 7
12. 7
13. 6
14. 8
15. 7