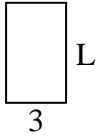


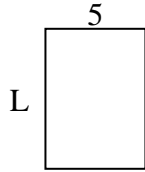


**Determina el valor de 'P'.**

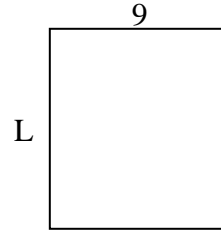
1) Área =  $15 \text{ u}^2$



2) Área =  $35 \text{ u}^2$



3) Área =  $90 \text{ u}^2$



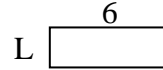
4) Área =  $8 \text{ u}^2$



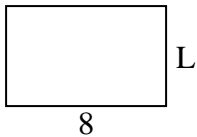
5) Área =  $18 \text{ u}^2$



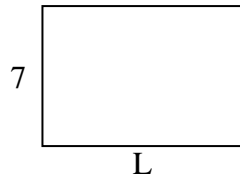
6) Área =  $12 \text{ u}^2$



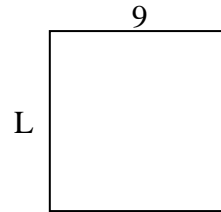
7) Área =  $40 \text{ u}^2$



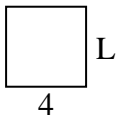
8) Área =  $70 \text{ u}^2$



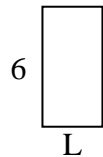
9) Área =  $81 \text{ u}^2$



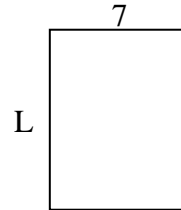
10) Área =  $16 \text{ u}^2$




11) Área =  $18 \text{ u}^2$



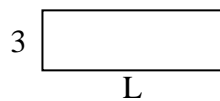
12) Área =  $63 \text{ u}^2$



13) Área =  $24 \text{ u}^2$



14) Área =  $27 \text{ u}^2$



15) Área =  $6 \text{ u}^2$



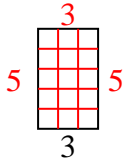
**Respuestas**

1. \_\_\_\_\_
2. \_\_\_\_\_
3. \_\_\_\_\_
4. \_\_\_\_\_
5. \_\_\_\_\_
6. \_\_\_\_\_
7. \_\_\_\_\_
8. \_\_\_\_\_
9. \_\_\_\_\_
10. \_\_\_\_\_
11. \_\_\_\_\_
12. \_\_\_\_\_
13. \_\_\_\_\_
14. \_\_\_\_\_
15. \_\_\_\_\_

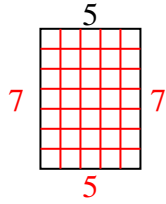


Determina el valor de 'P'.

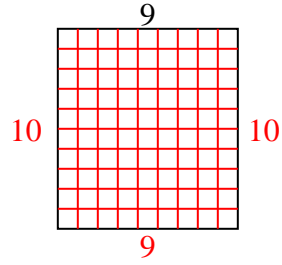
1) Área =  $15 u^2$



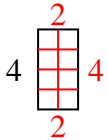
2) Área =  $35 u^2$



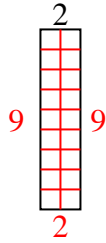
3) Área =  $90 u^2$



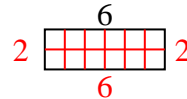
4) Área =  $8 u^2$



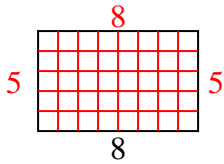
5) Área =  $18 u^2$



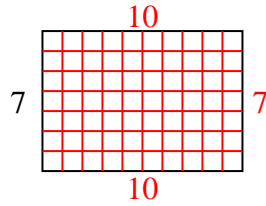
6) Área =  $12 u^2$



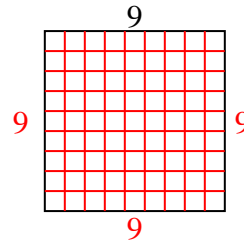
7) Área =  $40 u^2$



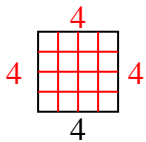
8) Área =  $70 u^2$



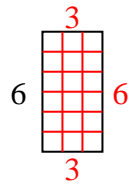
9) Área =  $81 u^2$



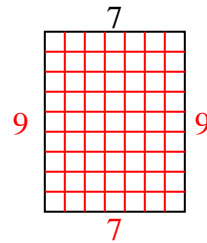
10) Área =  $16 u^2$



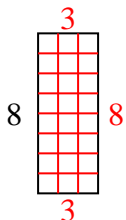
11) Área =  $18 u^2$



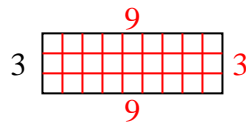
12) Área =  $63 u^2$



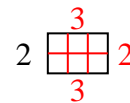
13) Área =  $24 u^2$



14) Área =  $27 u^2$



15) Área =  $6 u^2$



**Respuestas**

1. 5
2. 7
3. 10
4. 2
5. 9
6. 2
7. 5
8. 10
9. 9
10. 4
11. 3
12. 9
13. 3
14. 9
15. 3