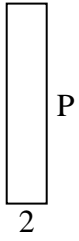


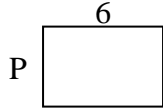


**Determina el valor de "P"**

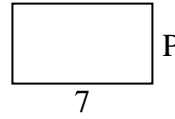
1) Perímetro = 24



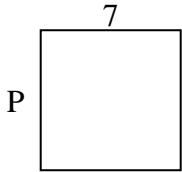
2) Perímetro = 20



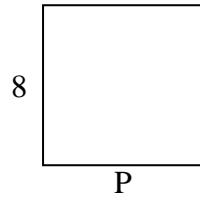
3) Perímetro = 22



4) Perímetro = 28



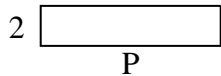
5) Perímetro = 32



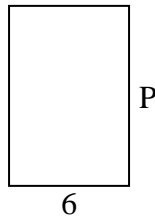
6) Perímetro = 10



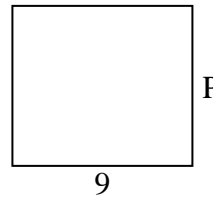
7) Perímetro = 22



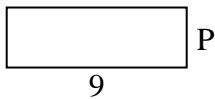
8) Perímetro = 30



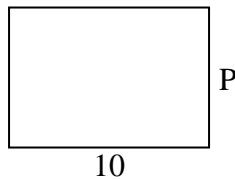
9) Perímetro = 34



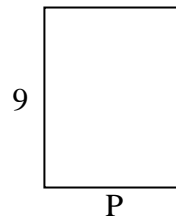
10) Perímetro = 24



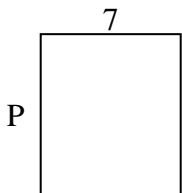
11) Perímetro = 34



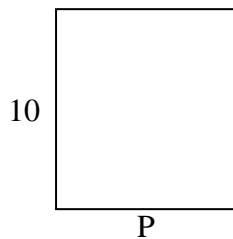
12) Perímetro = 32



13) Perímetro = 30



14) Perímetro = 38



15) Perímetro = 12



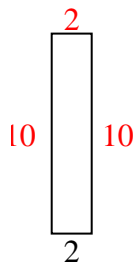
**Respuestas**

1. \_\_\_\_\_
2. \_\_\_\_\_
3. \_\_\_\_\_
4. \_\_\_\_\_
5. \_\_\_\_\_
6. \_\_\_\_\_
7. \_\_\_\_\_
8. \_\_\_\_\_
9. \_\_\_\_\_
10. \_\_\_\_\_
11. \_\_\_\_\_
12. \_\_\_\_\_
13. \_\_\_\_\_
14. \_\_\_\_\_
15. \_\_\_\_\_

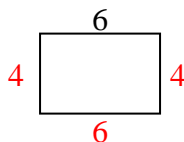


Determina el valor de "P"

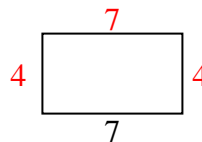
1) Perímetro = 24



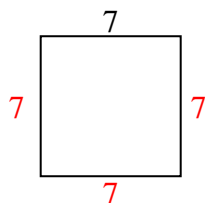
2) Perímetro = 20



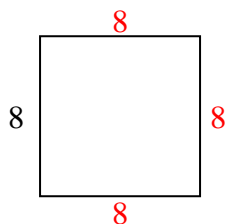
3) Perímetro = 22



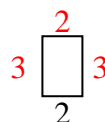
4) Perímetro = 28




5) Perímetro = 32



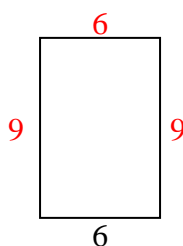
6) Perímetro = 10



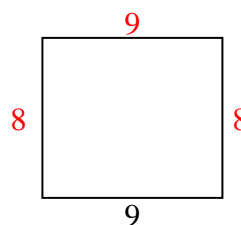
7) Perímetro = 22



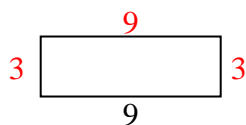
8) Perímetro = 30



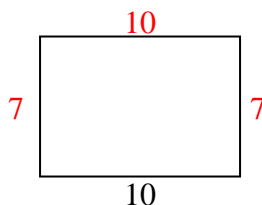
9) Perímetro = 34



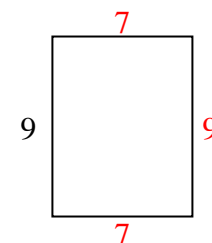
10) Perímetro = 24



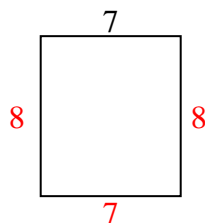
11) Perímetro = 34



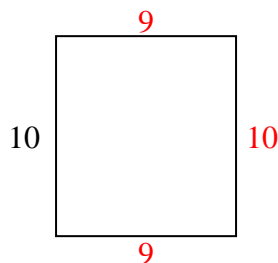
12) Perímetro = 32



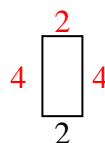
13) Perímetro = 30



14) Perímetro = 38



15) Perímetro = 12

**Respuestas**1. 10 cm2. 4 cm3. 4 cm4. 7 cm5. 8 cm6. 3 cm7. 9 cm8. 9 cm9. 8 cm10. 3 cm11. 7 cm12. 7 cm13. 8 cm14. 9 cm15. 4 cm