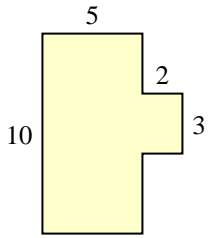


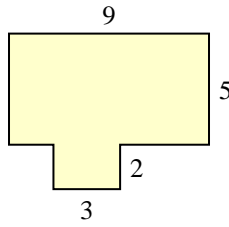


Encuentra el área total de cada figura. La medida está en milímetros (mm). No a escala.

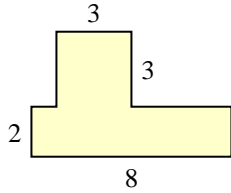
1)



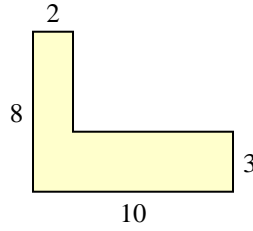
2)



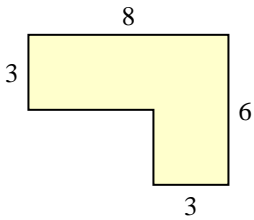
3)



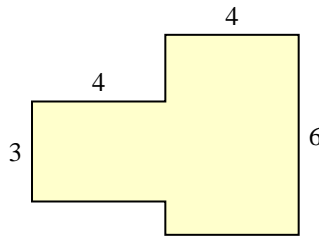
4)



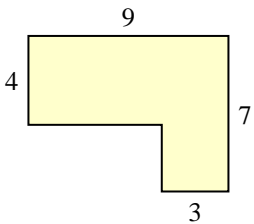
5)



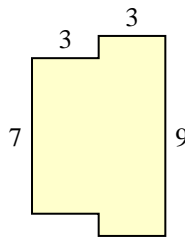
6)



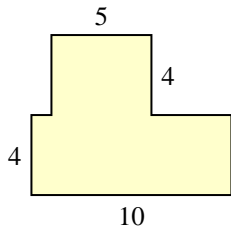
7)



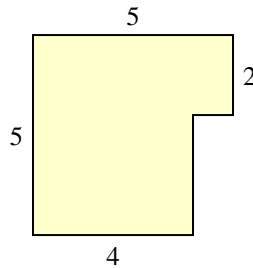
8)



9)



10)

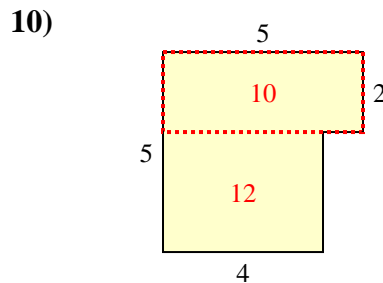
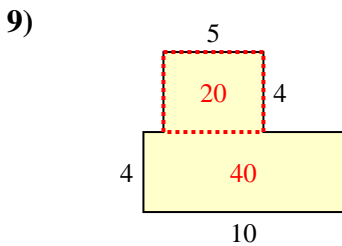
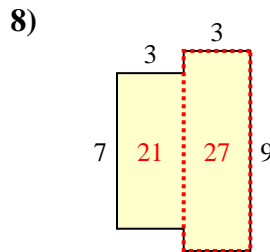
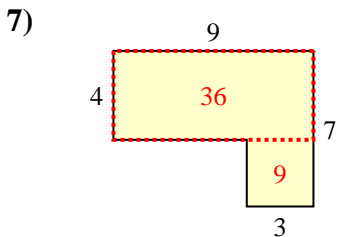
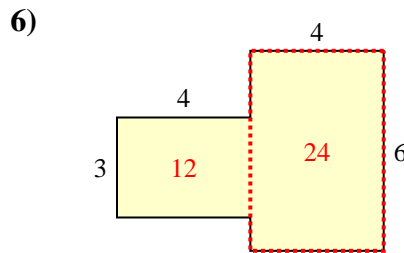
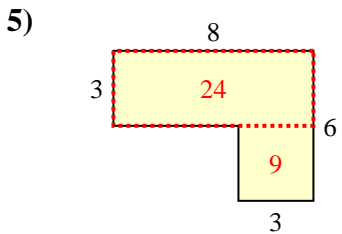
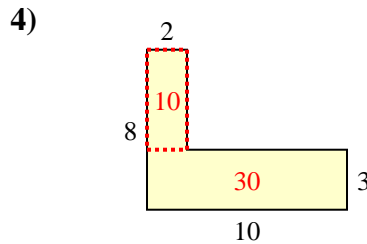
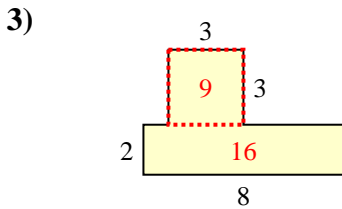
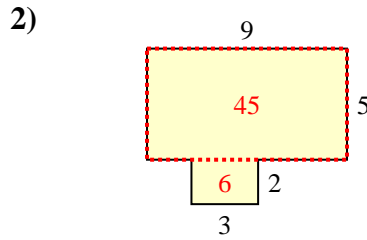
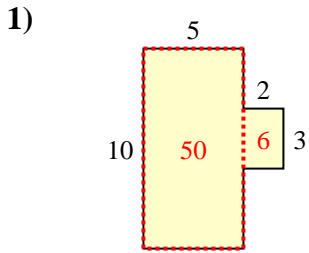


**Respuestas**

1. \_\_\_\_\_
2. \_\_\_\_\_
3. \_\_\_\_\_
4. \_\_\_\_\_
5. \_\_\_\_\_
6. \_\_\_\_\_
7. \_\_\_\_\_
8. \_\_\_\_\_
9. \_\_\_\_\_
10. \_\_\_\_\_



Encuentra el área total de cada figura. La medida está en milímetros (mm). No a escala.



**Respuestas**

1. 56 mm<sup>2</sup>
2. 51 mm<sup>2</sup>
3. 25 mm<sup>2</sup>
4. 40 mm<sup>2</sup>
5. 33 mm<sup>2</sup>
6. 36 mm<sup>2</sup>
7. 45 mm<sup>2</sup>
8. 48 mm<sup>2</sup>
9. 60 mm<sup>2</sup>
10. 22 mm<sup>2</sup>