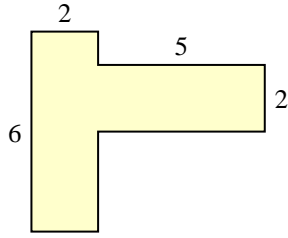


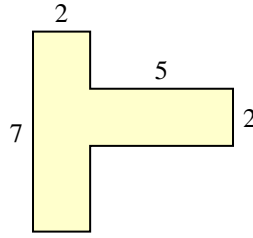


Encuentra el área total de cada figura. La medida está en milímetros (mm). No a escala.

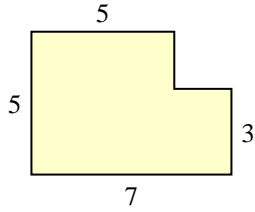
1)



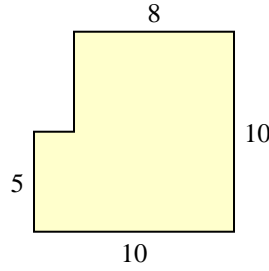
2)



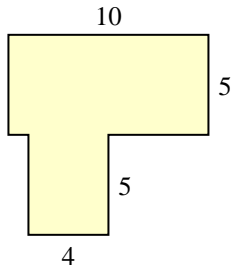
3)



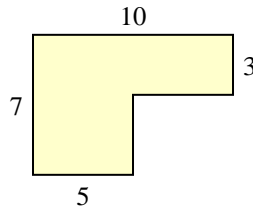
4)



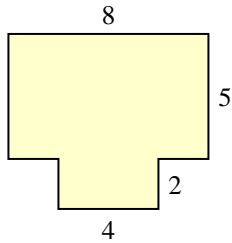
5)



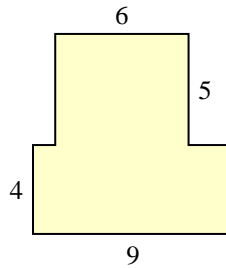
6)



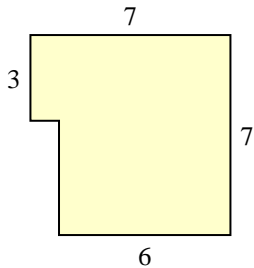
7)



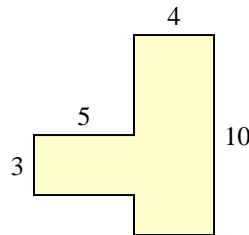
8)



9)



10)

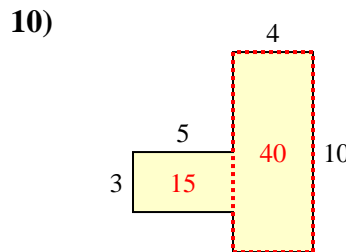
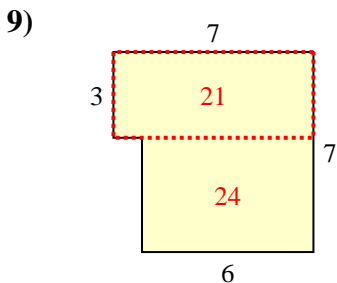
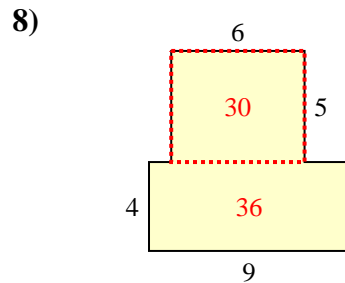
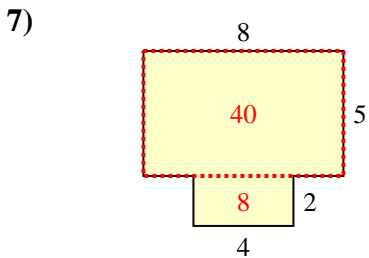
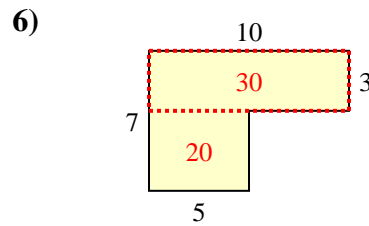
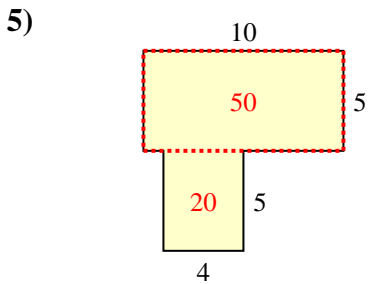
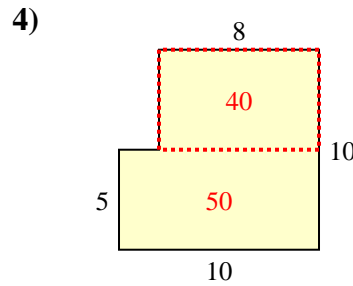
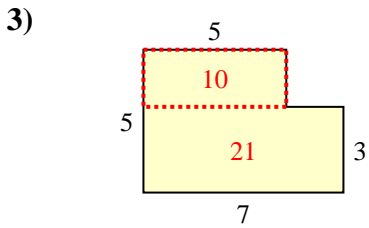
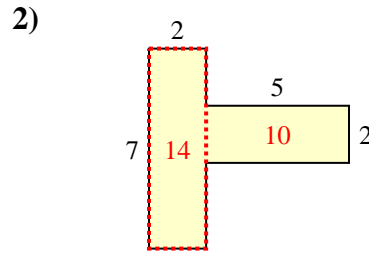
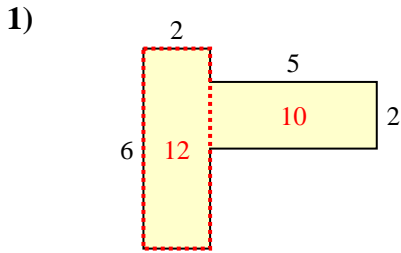


**Respuestas**

- 1. \_\_\_\_\_
- 2. \_\_\_\_\_
- 3. \_\_\_\_\_
- 4. \_\_\_\_\_
- 5. \_\_\_\_\_
- 6. \_\_\_\_\_
- 7. \_\_\_\_\_
- 8. \_\_\_\_\_
- 9. \_\_\_\_\_
- 10. \_\_\_\_\_



Encuentra el área total de cada figura. La medida está en milímetros (mm). No a escala.



**Respuestas**

1. 22 mm<sup>2</sup>
2. 24 mm<sup>2</sup>
3. 31 mm<sup>2</sup>
4. 90 mm<sup>2</sup>
5. 70 mm<sup>2</sup>
6. 50 mm<sup>2</sup>
7. 48 mm<sup>2</sup>
8. 66 mm<sup>2</sup>
9. 45 mm<sup>2</sup>
10. 55 mm<sup>2</sup>