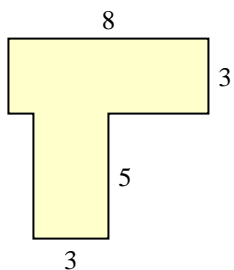


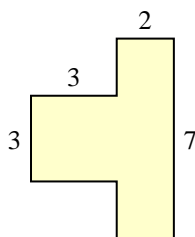


Encuentra el área total de cada figura. La medida está en milímetros (mm). No a escala.

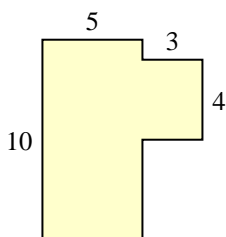
1)



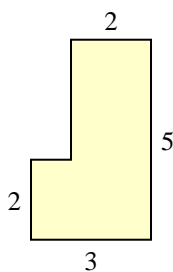
2)



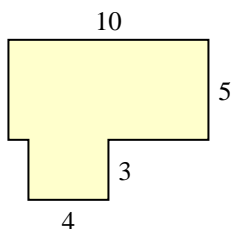
3)



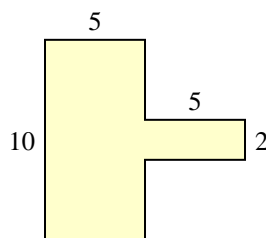
4)



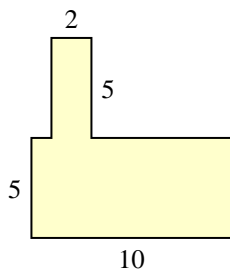
5)



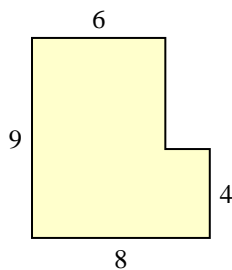
6)



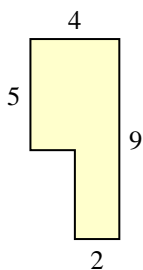
7)



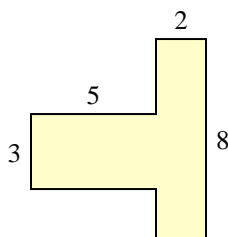
8)



9)



10)



**Respuestas**

1. \_\_\_\_\_

2. \_\_\_\_\_

3. \_\_\_\_\_

4. \_\_\_\_\_

5. \_\_\_\_\_

6. \_\_\_\_\_

7. \_\_\_\_\_

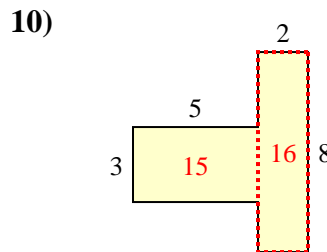
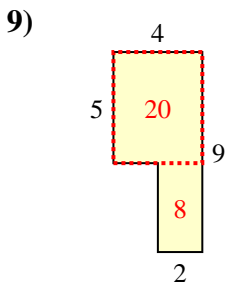
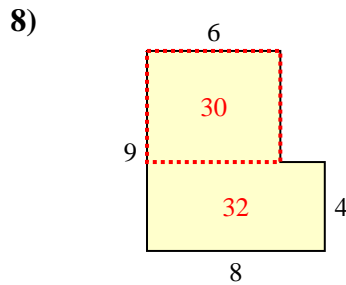
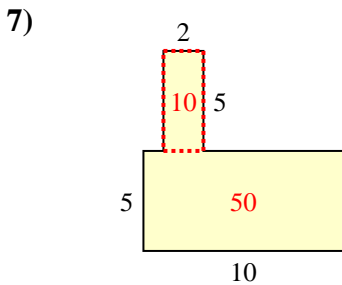
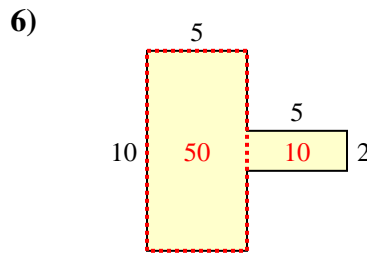
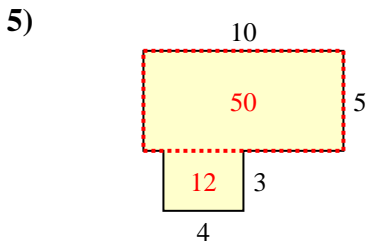
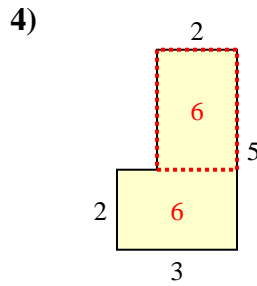
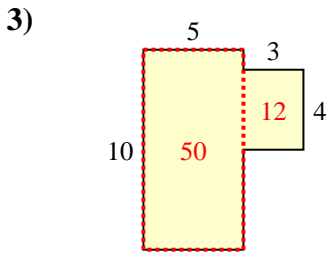
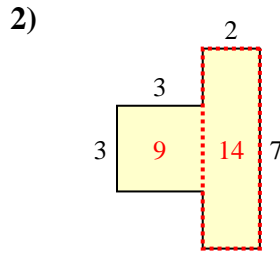
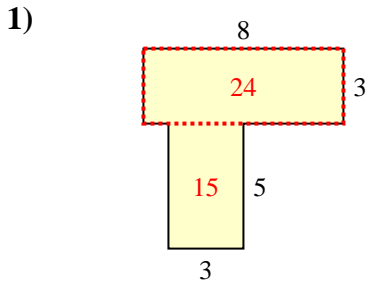
8. \_\_\_\_\_

9. \_\_\_\_\_

10. \_\_\_\_\_



Encuentra el área total de cada figura. La medida está en milímetros (mm). No a escala.



**Respuestas**

1. 39 mm<sup>2</sup>
2. 23 mm<sup>2</sup>
3. 62 mm<sup>2</sup>
4. 12 mm<sup>2</sup>
5. 62 mm<sup>2</sup>
6. 60 mm<sup>2</sup>
7. 60 mm<sup>2</sup>
8. 62 mm<sup>2</sup>
9. 28 mm<sup>2</sup>
10. 31 mm<sup>2</sup>