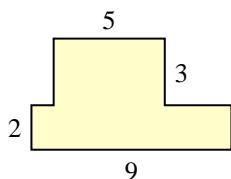


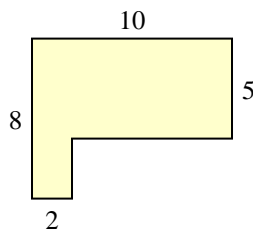


Encuentra el área total de cada figura. La medida está en milímetros (mm). No a escala.

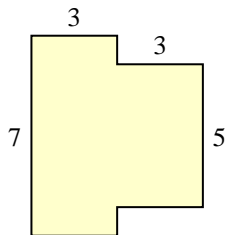
1)



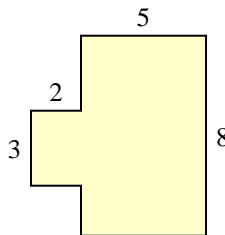
2)



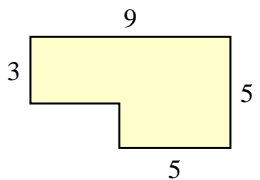
3)



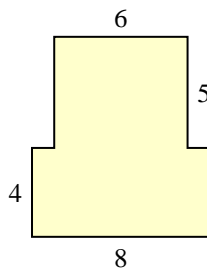
4)



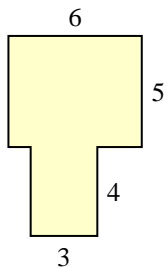
5)



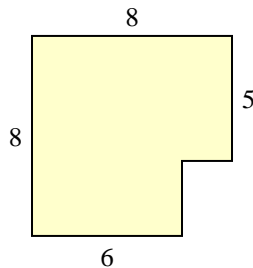
6)



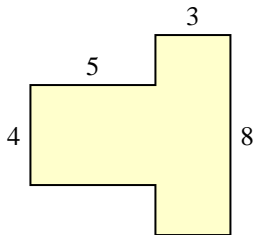
7)



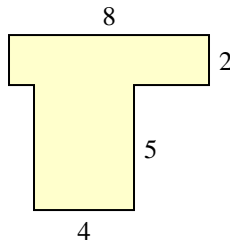
8)



9)



10)



Respuestas

1. _____

2. _____

3. _____

4. _____

5. _____

6. _____

7. _____

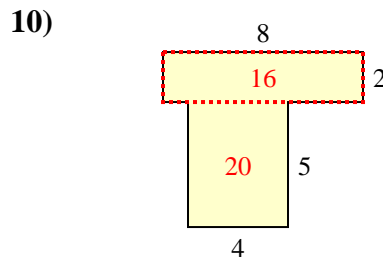
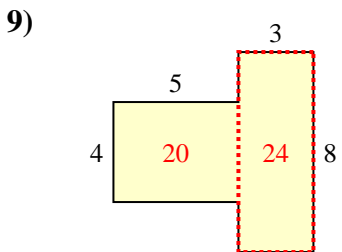
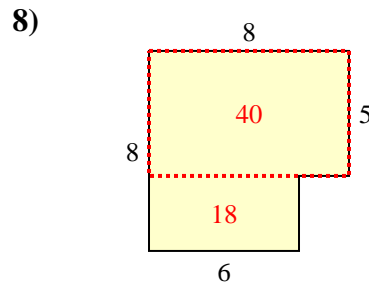
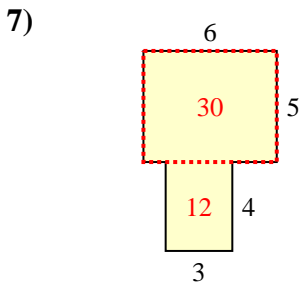
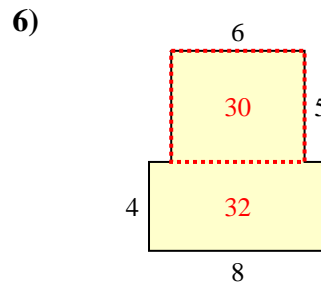
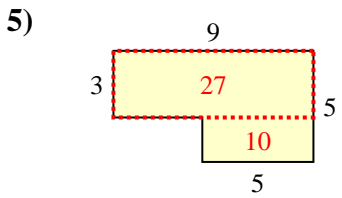
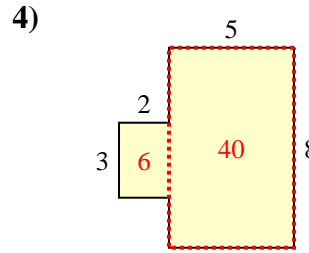
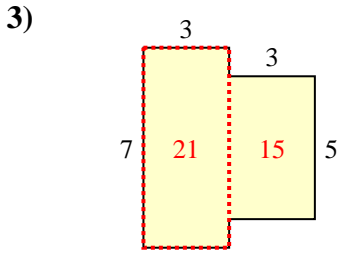
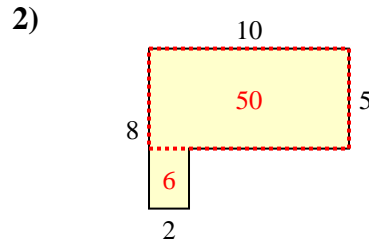
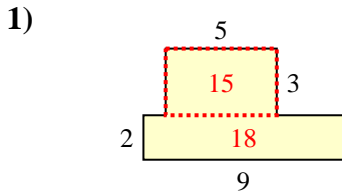
8. _____

9. _____

10. _____



Encuentra el área total de cada figura. La medida está en milímetros (mm). No a escala.



Respuestas

1. 33 mm²
2. 56 mm²
3. 36 mm²
4. 46 mm²
5. 37 mm²
6. 62 mm²
7. 42 mm²
8. 58 mm²
9. 44 mm²
10. 36 mm²