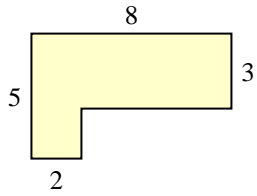


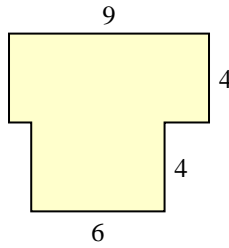


Encuentra el área total de cada figura. La medida está en milímetros (mm). No a escala.

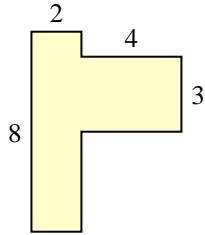
1)



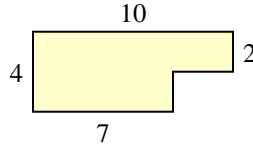
2)



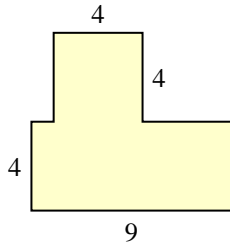
3)



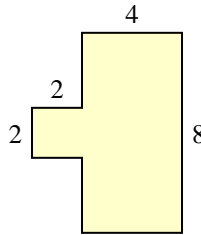
4)



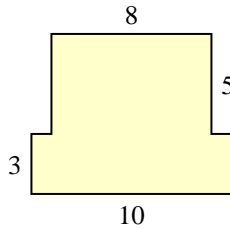
5)



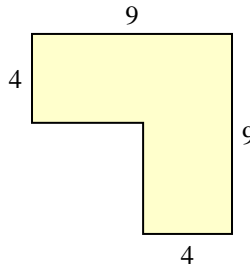
6)



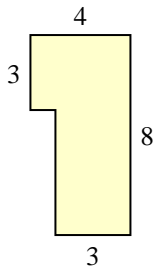
7)



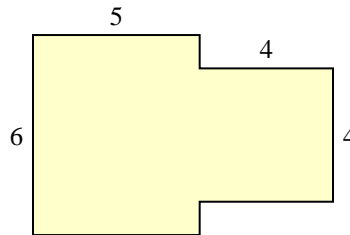
8)



9)



10)

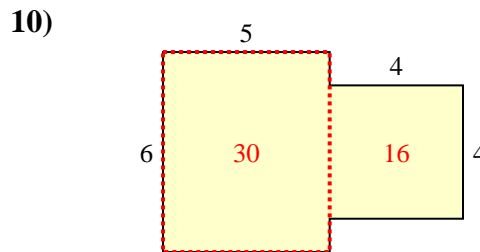
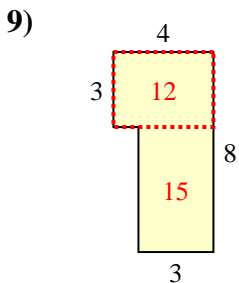
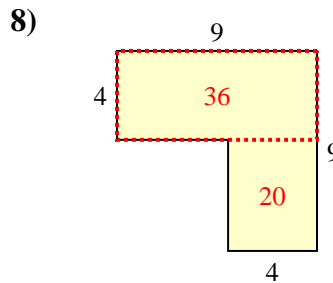
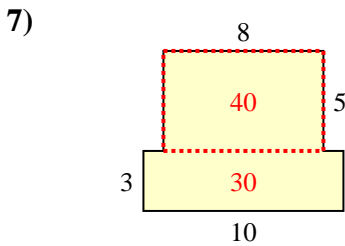
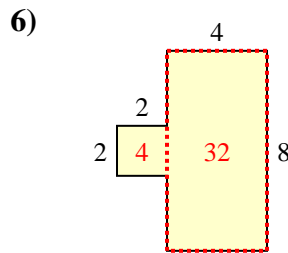
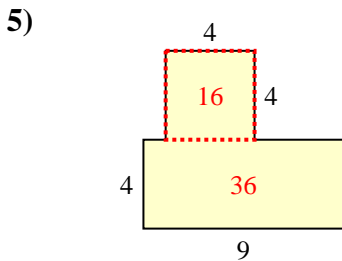
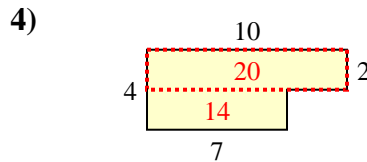
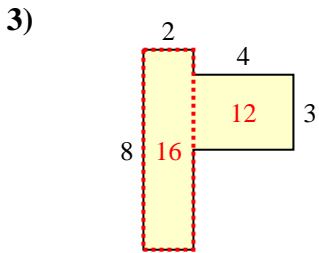
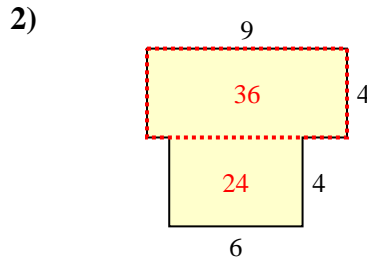
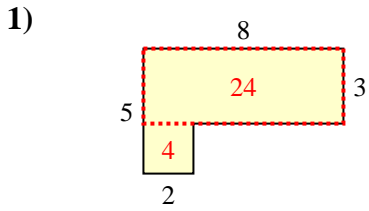


Respuestas

1. _____
2. _____
3. _____
4. _____
5. _____
6. _____
7. _____
8. _____
9. _____
10. _____



Encuentra el área total de cada figura. La medida está en milímetros (mm). No a escala.



Respuestas

1. 28 mm²
2. 60 mm²
3. 28 mm²
4. 34 mm²
5. 52 mm²
6. 36 mm²
7. 70 mm²
8. 56 mm²
9. 27 mm²
10. 46 mm²