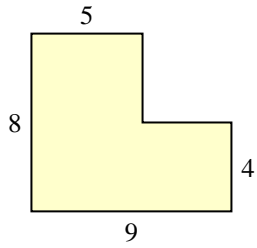


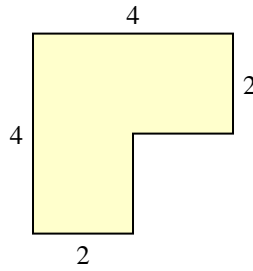


Encuentra el área total de cada figura. La medida está en milímetros (mm). No a escala.

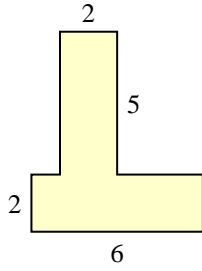
1)



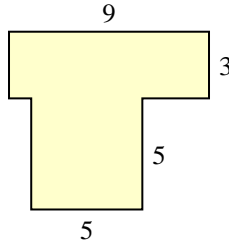
2)



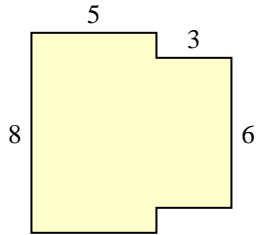
3)



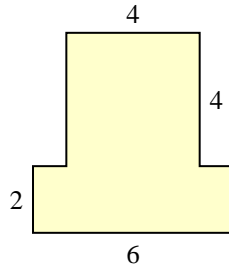
4)



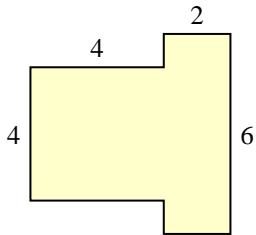
5)



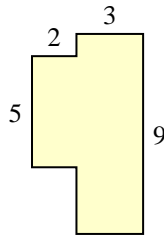
6)



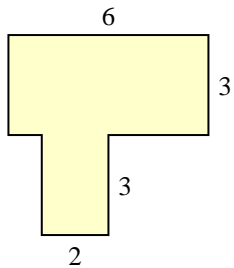
7)



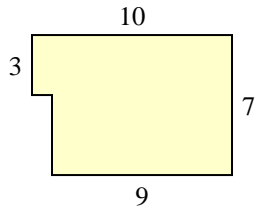
8)



9)



10)



Respuestas

1. _____

2. _____

3. _____

4. _____

5. _____

6. _____

7. _____

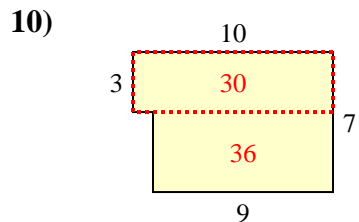
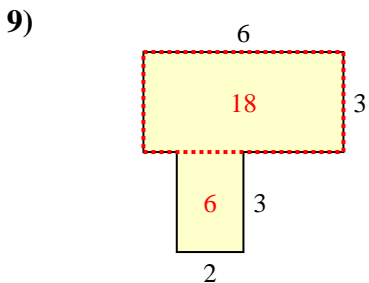
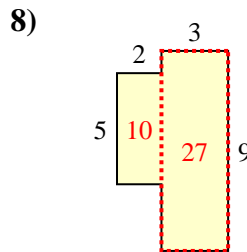
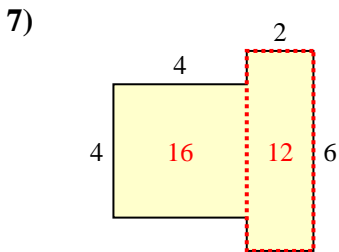
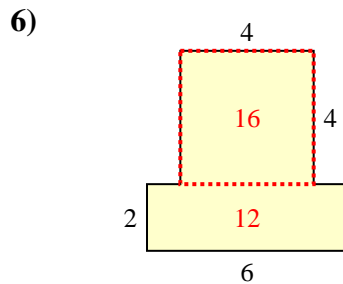
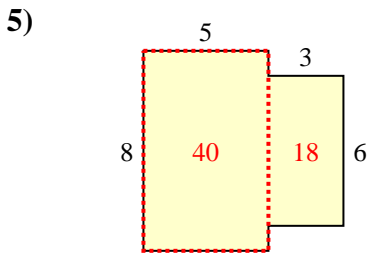
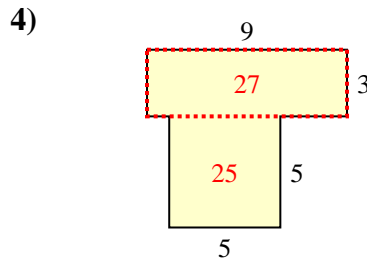
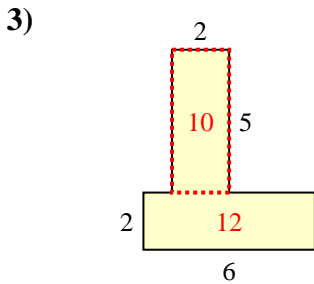
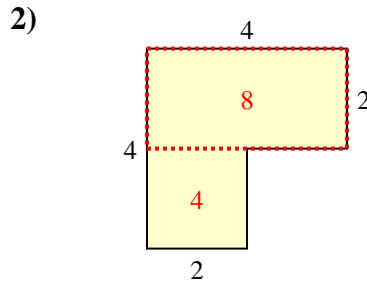
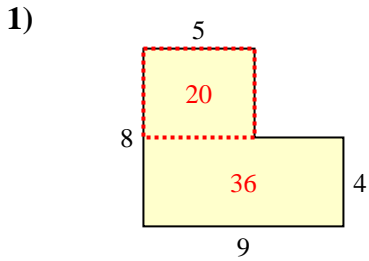
8. _____

9. _____

10. _____



Encuentra el área total de cada figura. La medida está en milímetros (mm). No a escala.



Respuestas

1. 56 mm²

2. 12 mm²

3. 22 mm²

4. 52 mm²

5. 58 mm²

6. 28 mm²

7. 28 mm²

8. 37 mm²

9. 24 mm²

10. 66 mm²