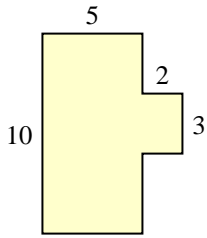


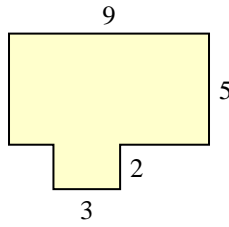


Encuentra el área total de cada figura. La medida está en milímetros (mm). No a escala.

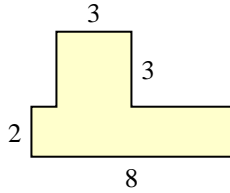
1)



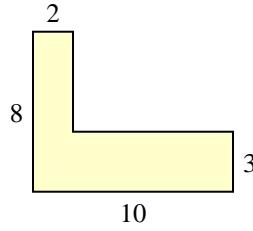
2)



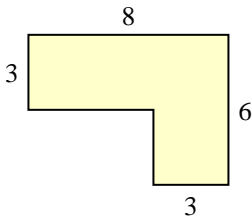
3)



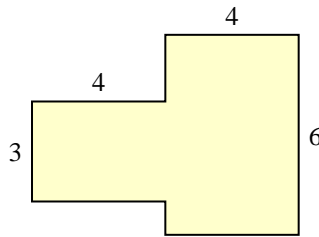
4)



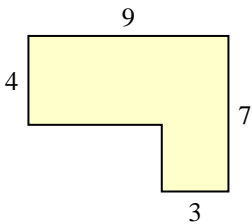
5)



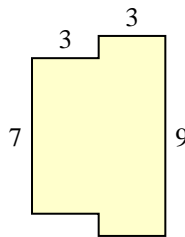
6)



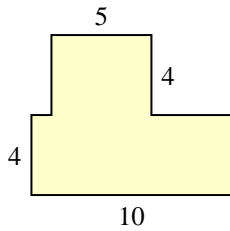
7)



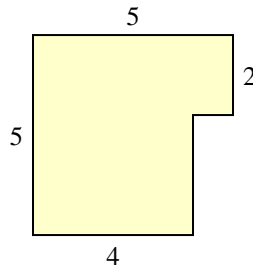
8)



9)



10)



Respuestas

1. _____

2. _____

3. _____

4. _____

5. _____

6. _____

7. _____

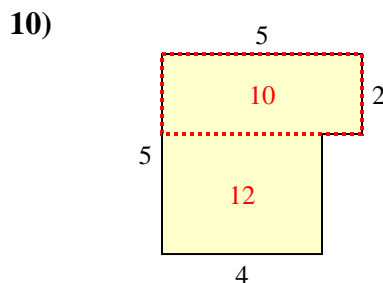
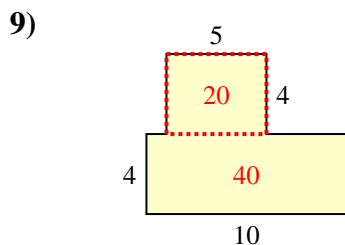
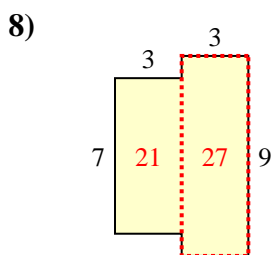
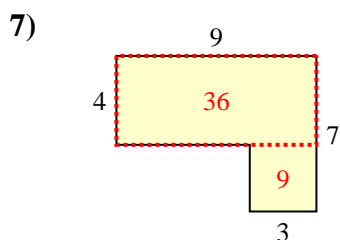
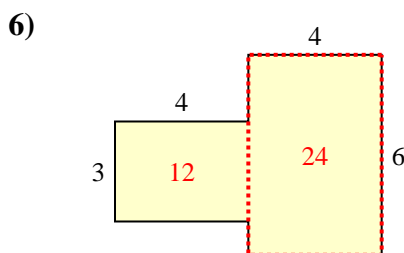
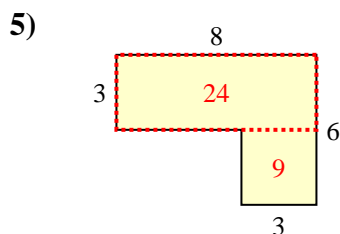
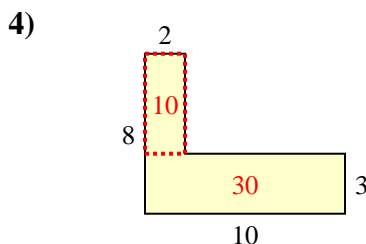
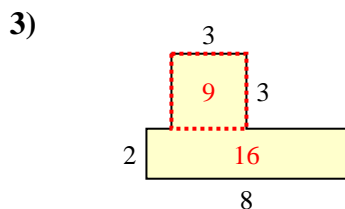
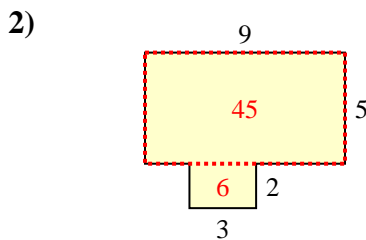
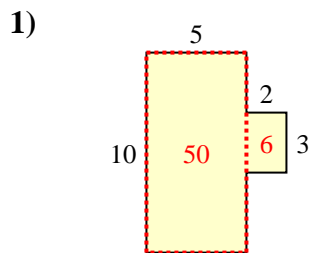
8. _____

9. _____

10. _____



Encuentra el área total de cada figura. La medida está en milímetros (mm). No a escala.



Respuestas

1. 56 mm²

2. 51 mm²

3. 25 mm²

4. 40 mm²

5. 33 mm²

6. 36 mm²

7. 45 mm²

8. 48 mm²

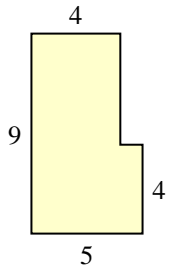
9. 60 mm²

10. 22 mm²

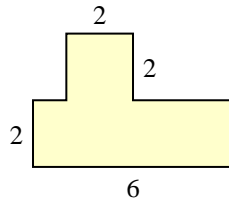


Encuentra el área total de cada figura. La medida está en milímetros (mm). No a escala.

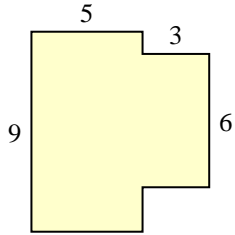
1)



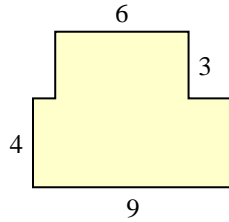
2)



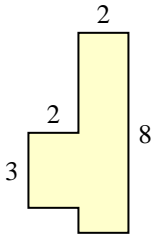
3)



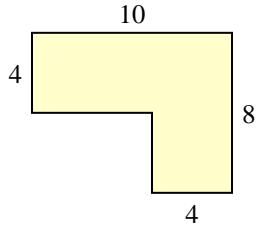
4)



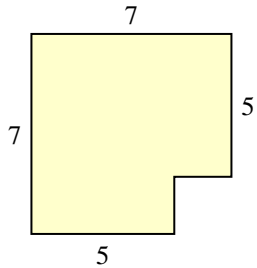
5)



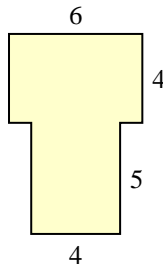
6)



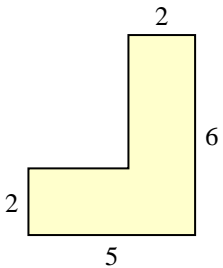
7)



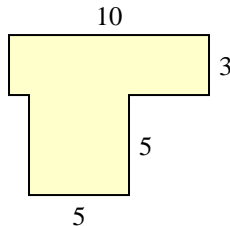
8)



9)



10)



Respuestas

1. _____

2. _____

3. _____

4. _____

5. _____

6. _____

7. _____

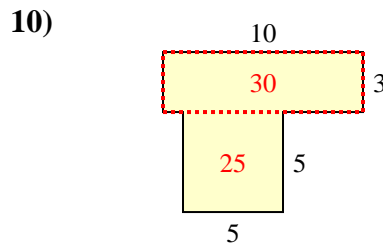
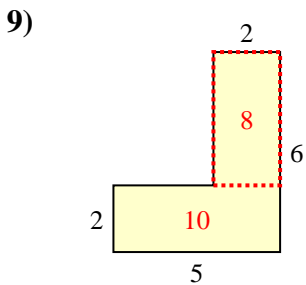
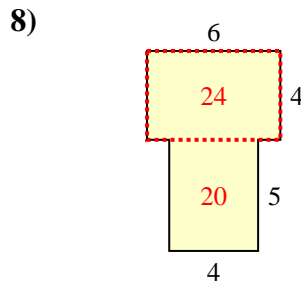
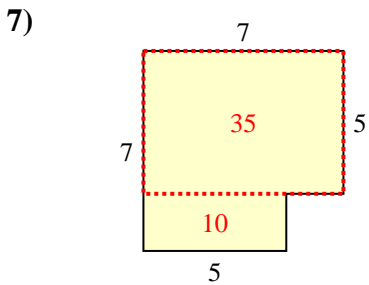
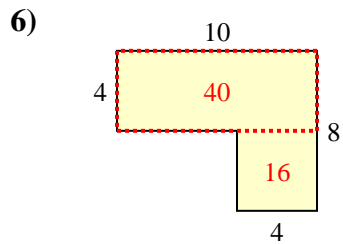
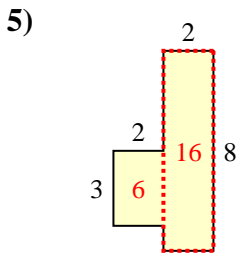
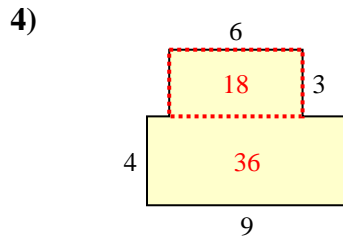
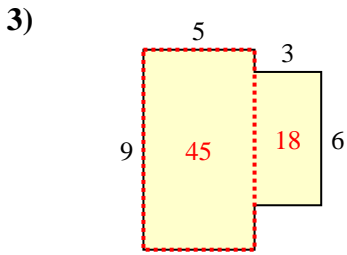
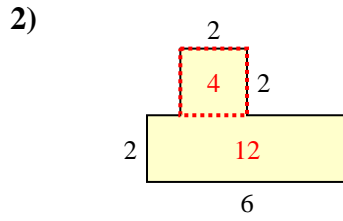
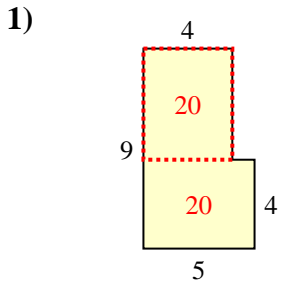
8. _____

9. _____

10. _____



Encuentra el área total de cada figura. La medida está en milímetros (mm). No a escala.



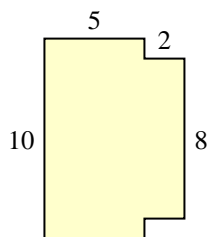
Respuestas

1. 40 mm²
2. 16 mm²
3. 63 mm²
4. 54 mm²
5. 22 mm²
6. 56 mm²
7. 45 mm²
8. 44 mm²
9. 18 mm²
10. 55 mm²

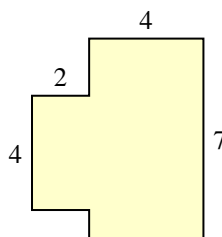


Encuentra el área total de cada figura. La medida está en milímetros (mm). No a escala.

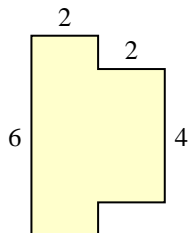
1)



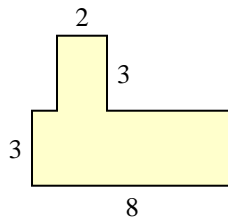
2)



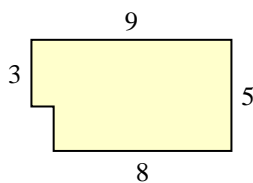
3)



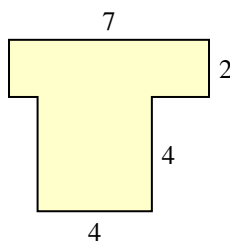
4)



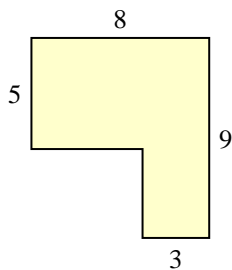
5)



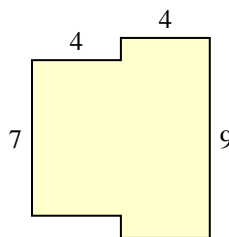
6)



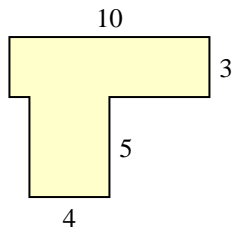
7)



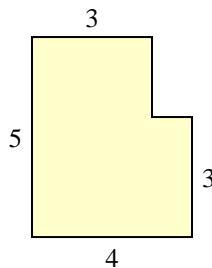
8)



9)



10)



Respuestas

1. _____

2. _____

3. _____

4. _____

5. _____

6. _____

7. _____

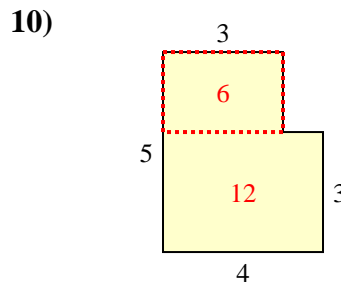
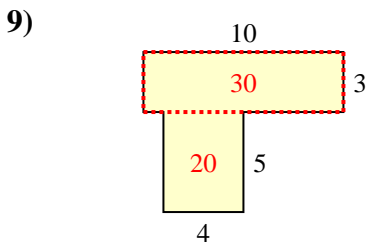
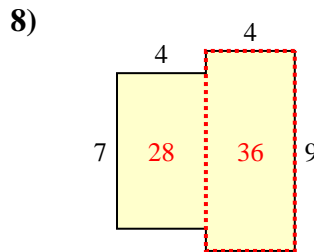
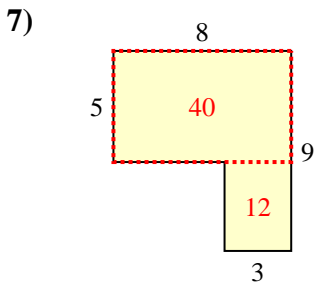
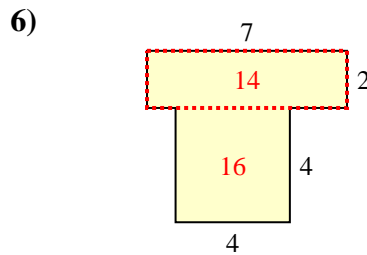
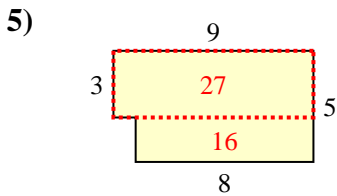
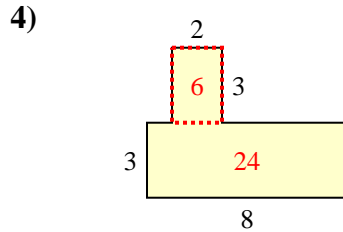
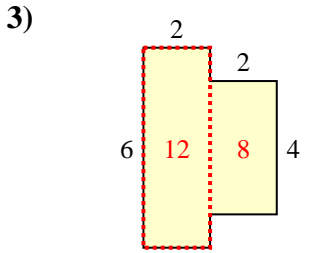
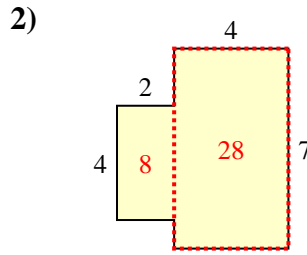
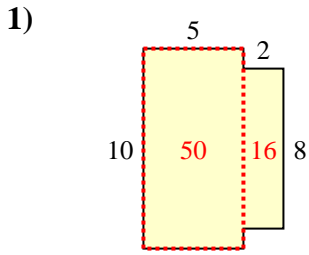
8. _____

9. _____

10. _____



Encuentra el área total de cada figura. La medida está en milímetros (mm). No a escala.



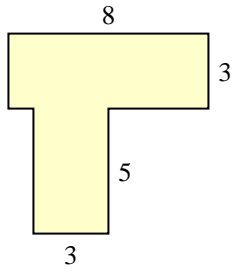
Respuestas

1. 66 mm²
2. 36 mm²
3. 20 mm²
4. 30 mm²
5. 43 mm²
6. 30 mm²
7. 52 mm²
8. 64 mm²
9. 50 mm²
10. 18 mm²

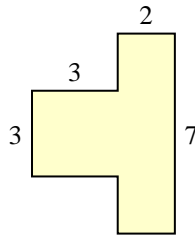


Encuentra el área total de cada figura. La medida está en milímetros (mm). No a escala.

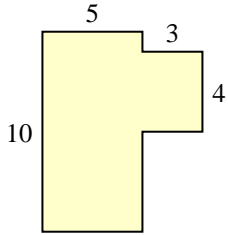
1)



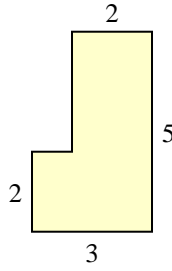
2)



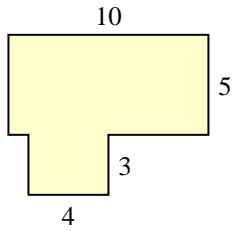
3)



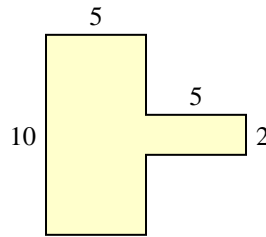
4)



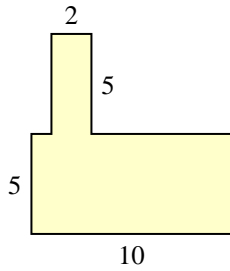
5)



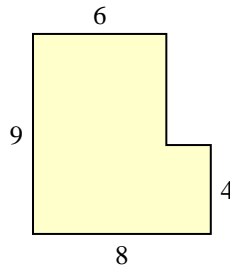
6)



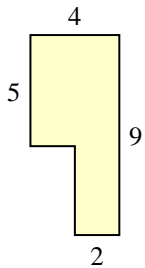
7)



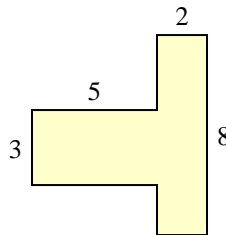
8)



9)



10)



Respuestas

1. _____

2. _____

3. _____

4. _____

5. _____

6. _____

7. _____

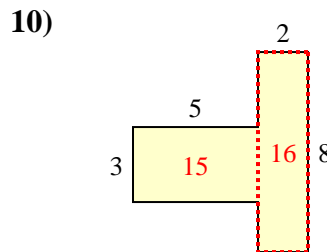
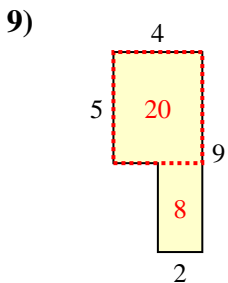
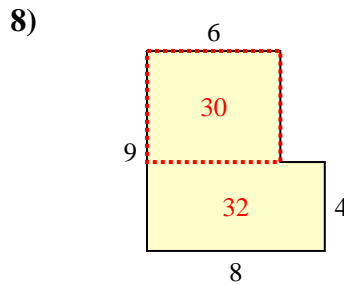
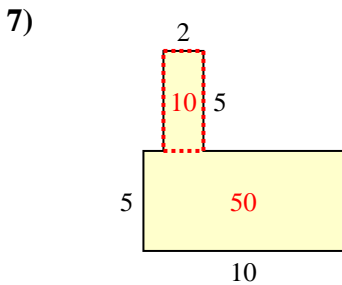
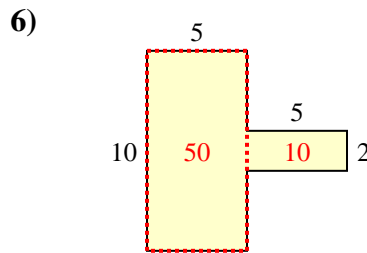
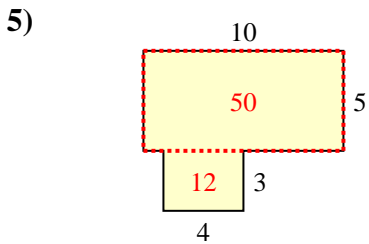
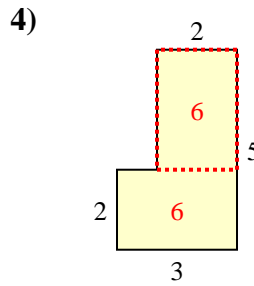
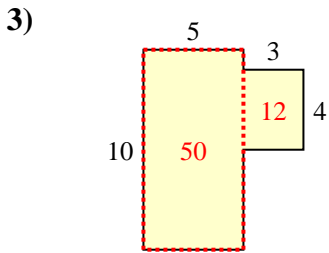
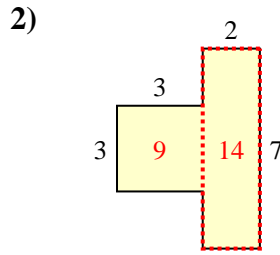
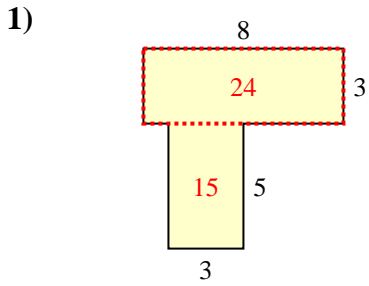
8. _____

9. _____

10. _____



Encuentra el área total de cada figura. La medida está en milímetros (mm). No a escala.



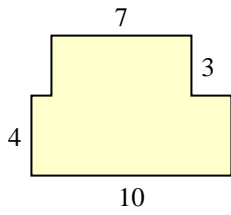
Respuestas

1. 39 mm²
2. 23 mm²
3. 62 mm²
4. 12 mm²
5. 62 mm²
6. 60 mm²
7. 60 mm²
8. 62 mm²
9. 28 mm²
10. 31 mm²

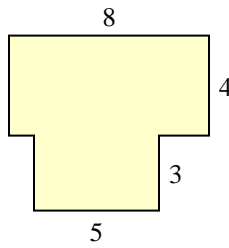


Encuentra el área total de cada figura. La medida está en milímetros (mm). No a escala.

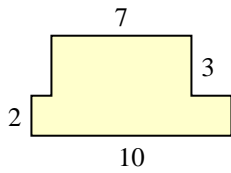
1)



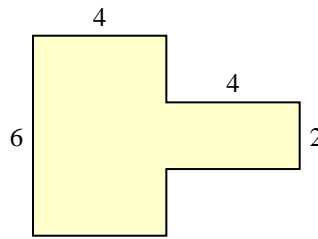
2)



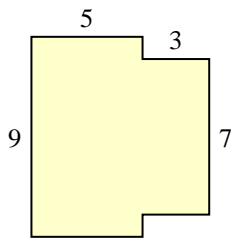
3)



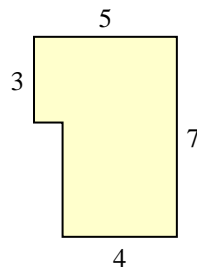
4)



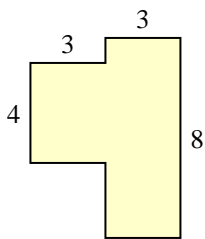
5)



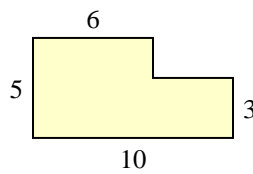
6)



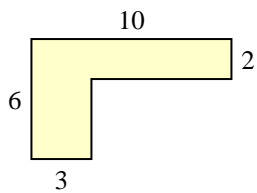
7)



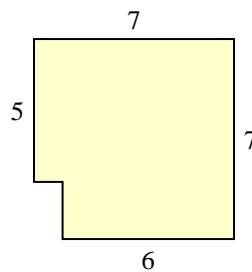
8)



9)



10)



Respuestas

1. _____

2. _____

3. _____

4. _____

5. _____

6. _____

7. _____

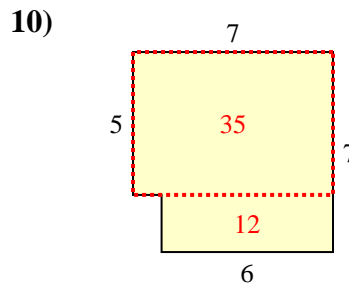
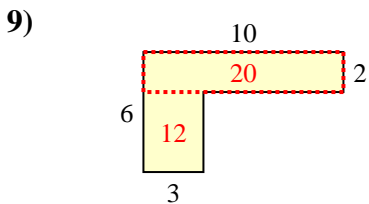
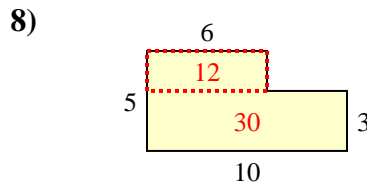
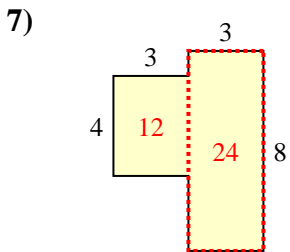
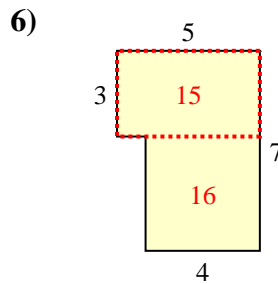
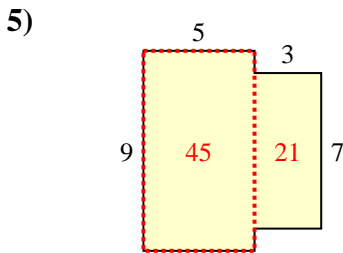
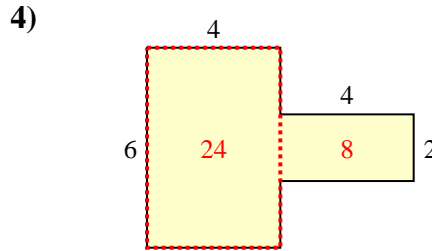
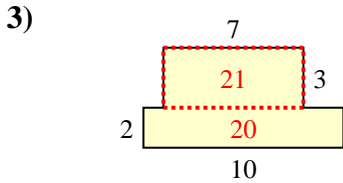
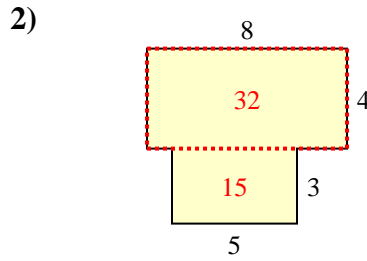
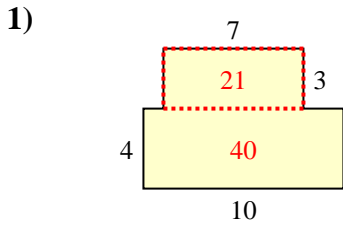
8. _____

9. _____

10. _____



Encuentra el área total de cada figura. La medida está en milímetros (mm). No a escala.



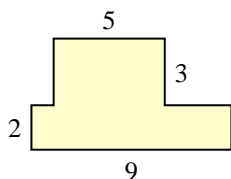
Respuestas

1. 61 mm²
2. 47 mm²
3. 41 mm²
4. 32 mm²
5. 66 mm²
6. 31 mm²
7. 36 mm²
8. 42 mm²
9. 32 mm²
10. 47 mm²

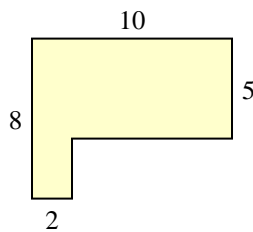


Encuentra el área total de cada figura. La medida está en milímetros (mm). No a escala.

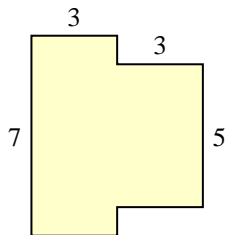
1)



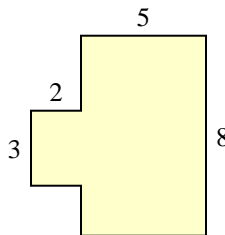
2)



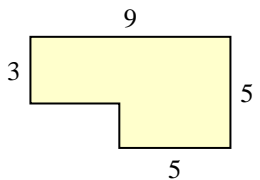
3)



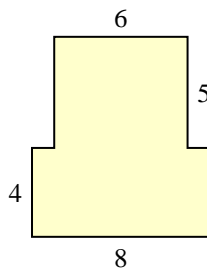
4)



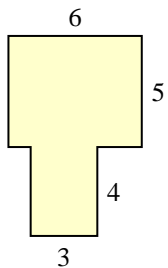
5)



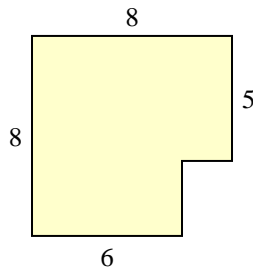
6)



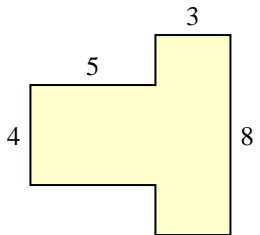
7)



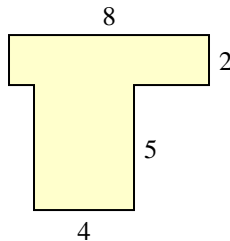
8)



9)



10)

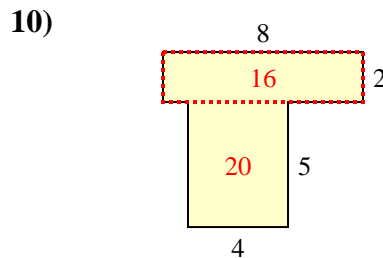
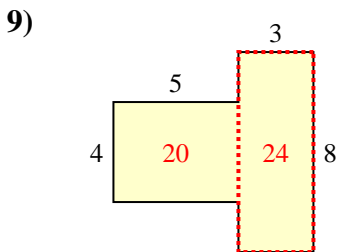
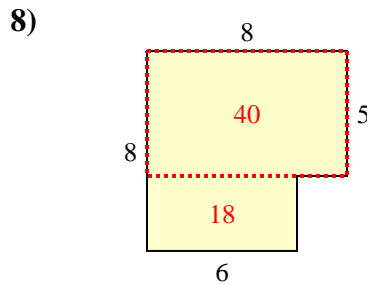
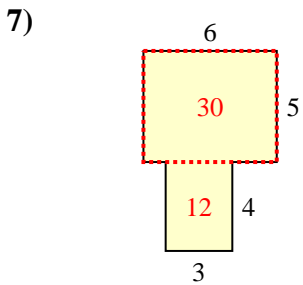
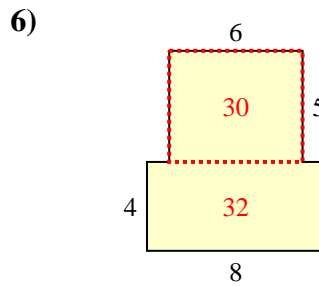
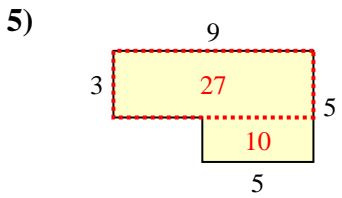
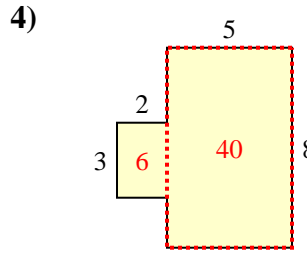
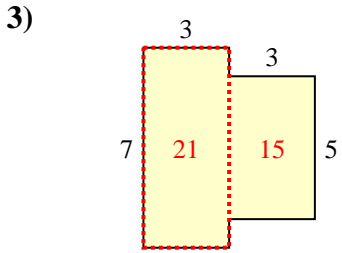
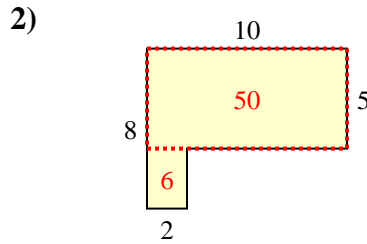
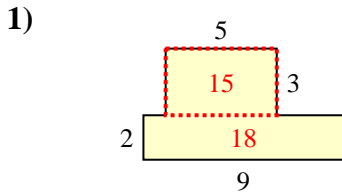


Respuestas

1. _____
2. _____
3. _____
4. _____
5. _____
6. _____
7. _____
8. _____
9. _____
10. _____



Encuentra el área total de cada figura. La medida está en milímetros (mm). No a escala.



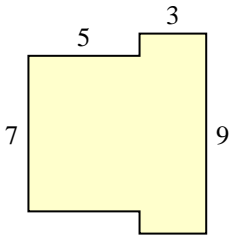
Respuestas

1. 33 mm²
2. 56 mm²
3. 36 mm²
4. 46 mm²
5. 37 mm²
6. 62 mm²
7. 42 mm²
8. 58 mm²
9. 44 mm²
10. 36 mm²

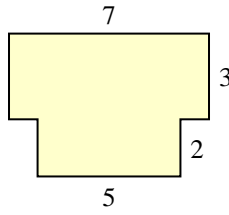


Encuentra el área total de cada figura. La medida está en milímetros (mm). No a escala.

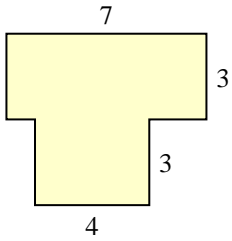
1)



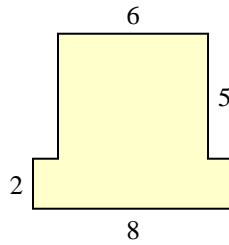
2)



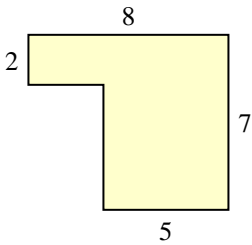
3)



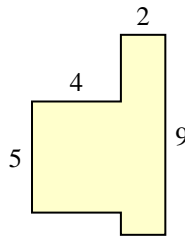
4)



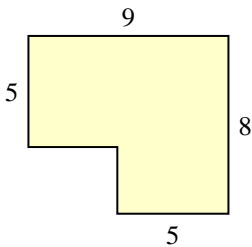
5)



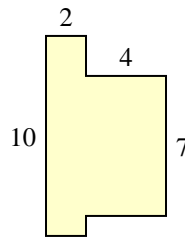
6)



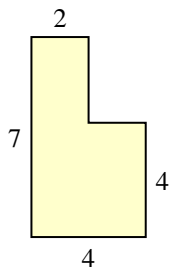
7)



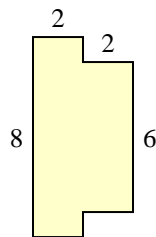
8)



9)



10)



Respuestas

1. _____

2. _____

3. _____

4. _____

5. _____

6. _____

7. _____

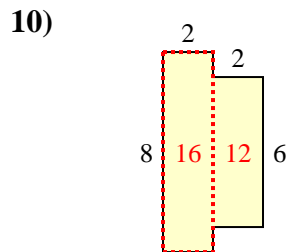
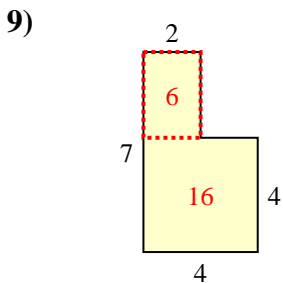
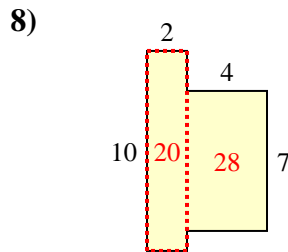
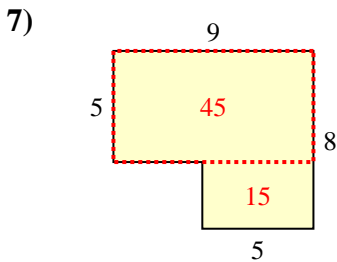
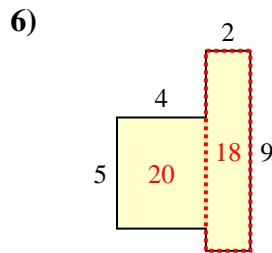
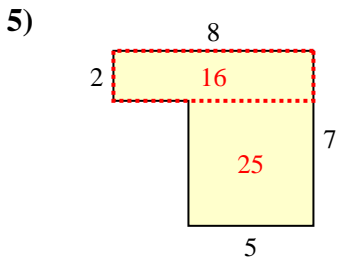
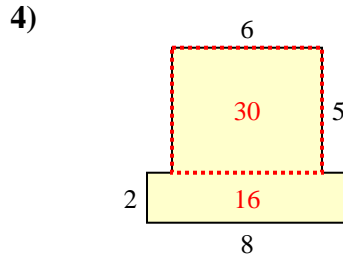
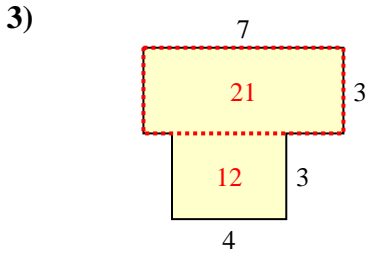
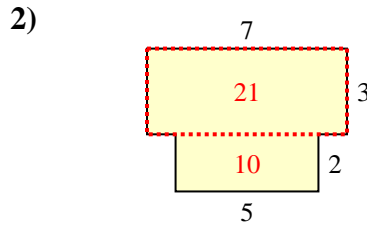
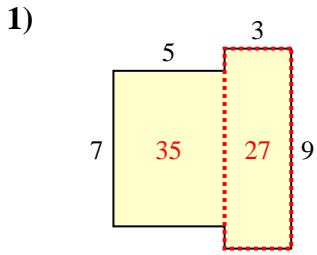
8. _____

9. _____

10. _____



Encuentra el área total de cada figura. La medida está en milímetros (mm). No a escala.



Respuestas

1. 62 mm²

2. 31 mm²

3. 33 mm²

4. 46 mm²

5. 41 mm²

6. 38 mm²

7. 60 mm²

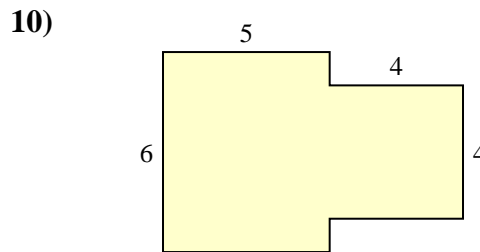
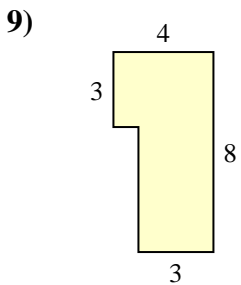
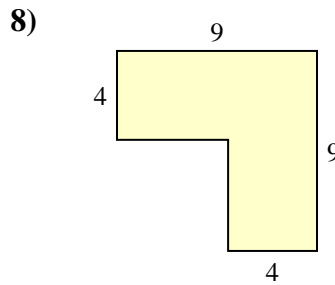
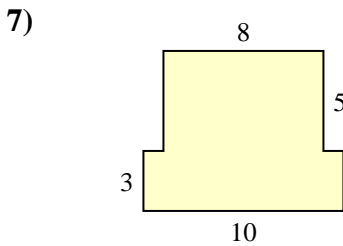
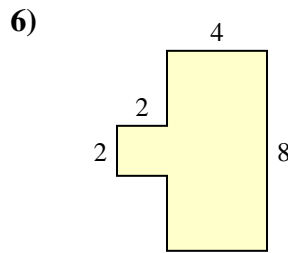
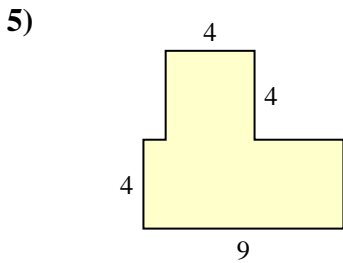
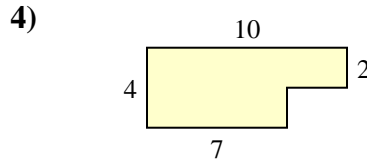
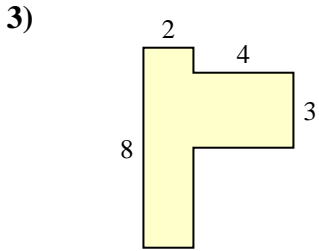
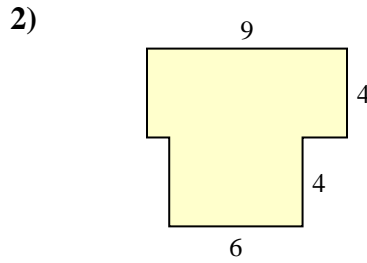
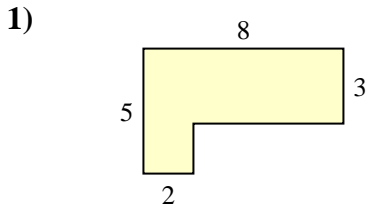
8. 48 mm²

9. 22 mm²

10. 28 mm²



Encuentra el área total de cada figura. La medida está en milímetros (mm). No a escala.

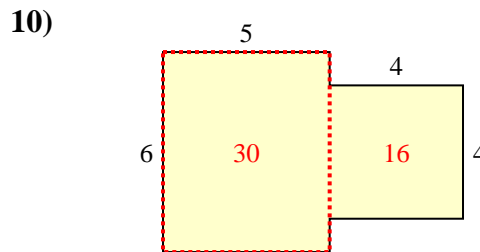
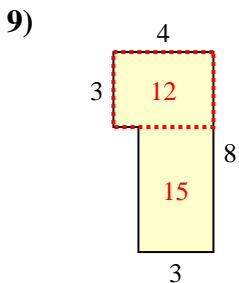
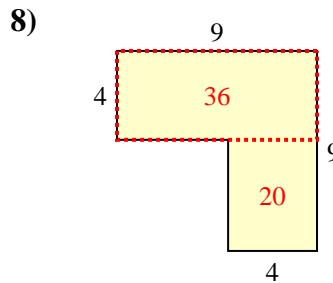
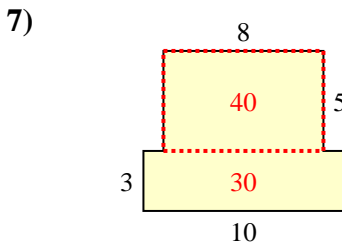
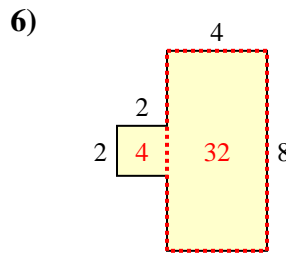
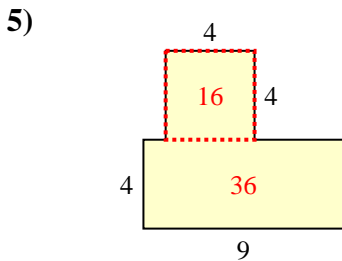
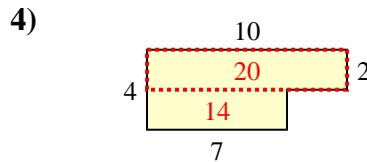
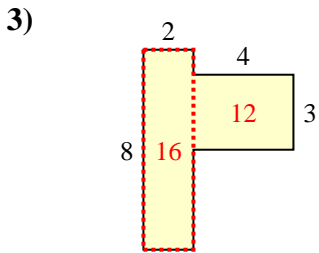
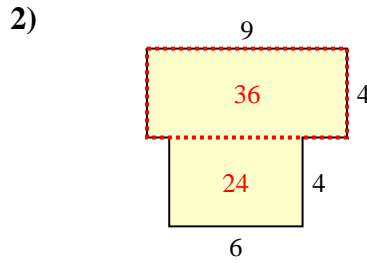
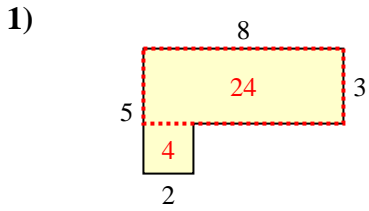


Respuestas

1. _____
2. _____
3. _____
4. _____
5. _____
6. _____
7. _____
8. _____
9. _____
10. _____



Encuentra el área total de cada figura. La medida está en milímetros (mm). No a escala.



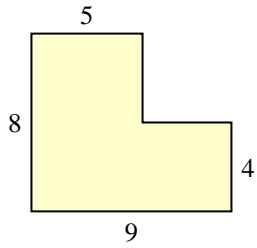
Respuestas

1. 28 mm²
2. 60 mm²
3. 28 mm²
4. 34 mm²
5. 52 mm²
6. 36 mm²
7. 70 mm²
8. 56 mm²
9. 27 mm²
10. 46 mm²

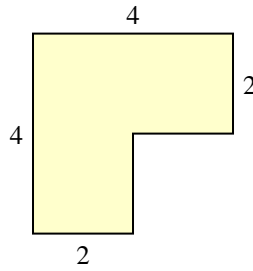


Encuentra el área total de cada figura. La medida está en milímetros (mm). No a escala.

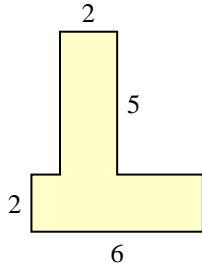
1)



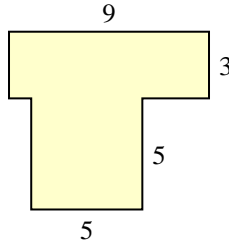
2)



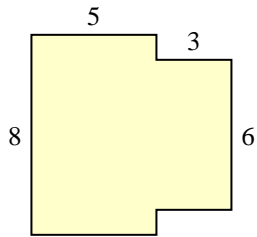
3)



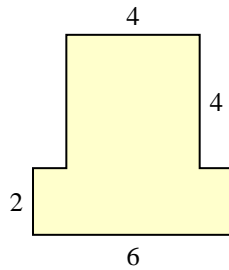
4)



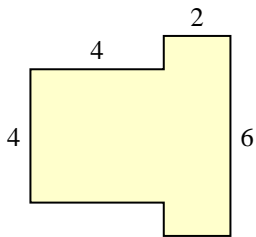
5)



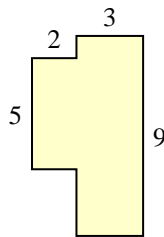
6)



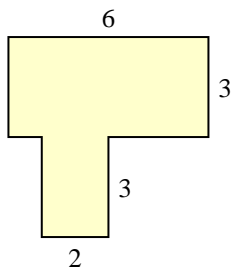
7)



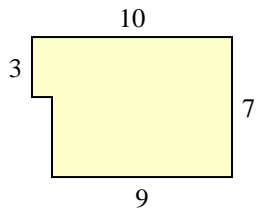
8)



9)



10)

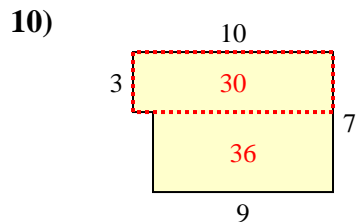
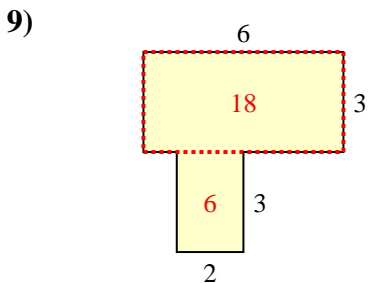
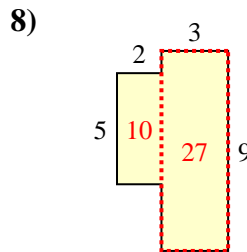
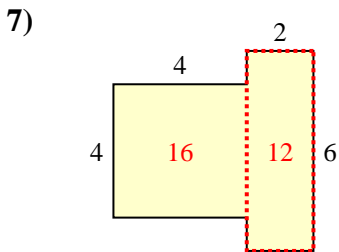
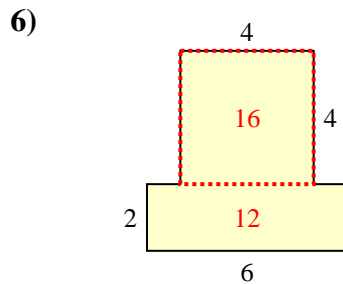
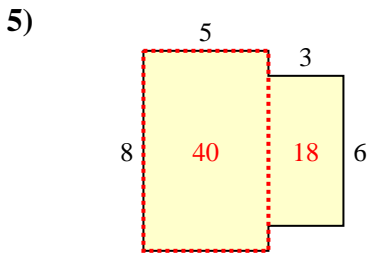
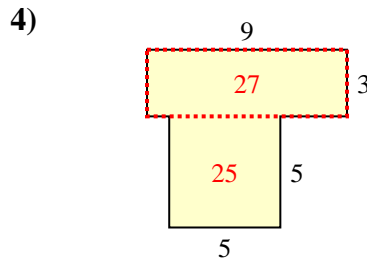
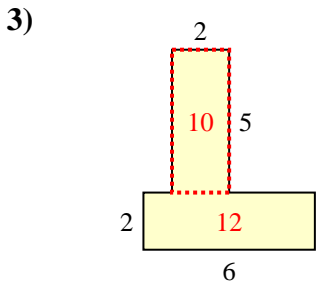
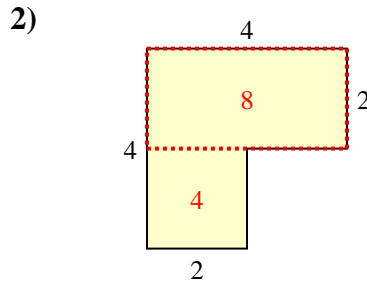
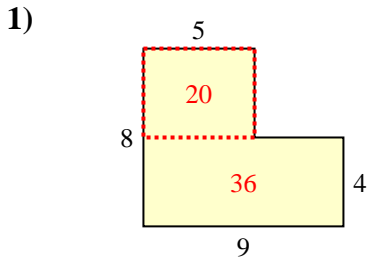


Respuestas

1. _____
2. _____
3. _____
4. _____
5. _____
6. _____
7. _____
8. _____
9. _____
10. _____



Encuentra el área total de cada figura. La medida está en milímetros (mm). No a escala.



Respuestas

1. 56 mm²

2. 12 mm²

3. 22 mm²

4. 52 mm²

5. 58 mm²

6. 28 mm²

7. 28 mm²

8. 37 mm²

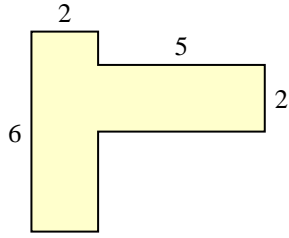
9. 24 mm²

10. 66 mm²

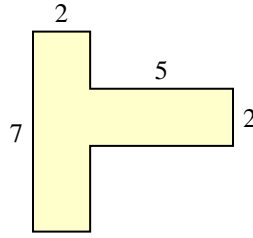


Encuentra el área total de cada figura. La medida está en milímetros (mm). No a escala.

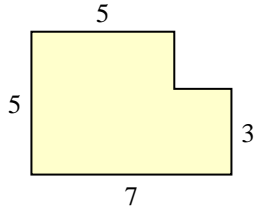
1)



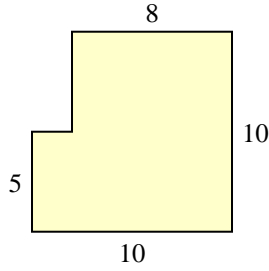
2)



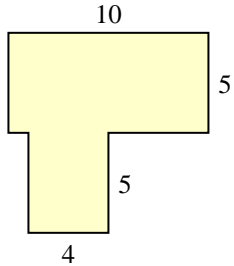
3)



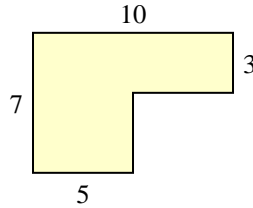
4)



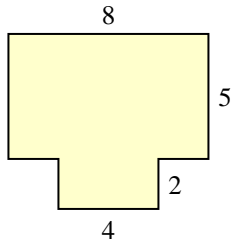
5)



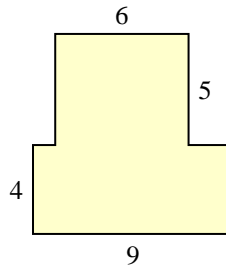
6)



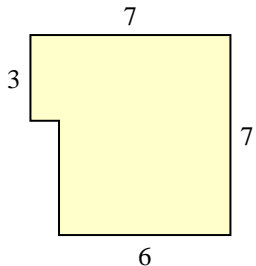
7)



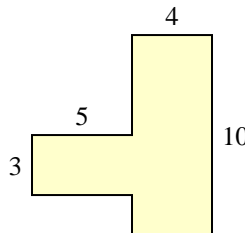
8)



9)



10)



Respuestas

1. _____

2. _____

3. _____

4. _____

5. _____

6. _____

7. _____

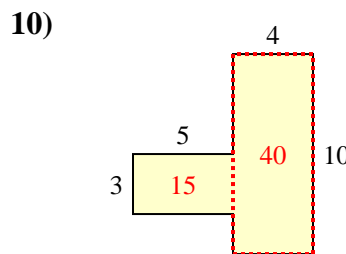
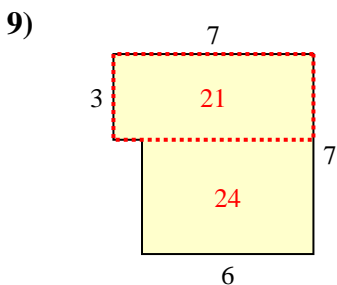
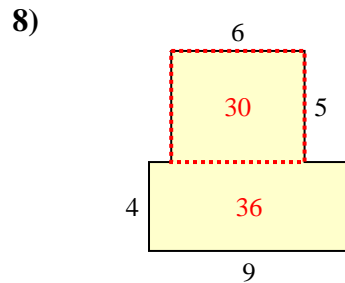
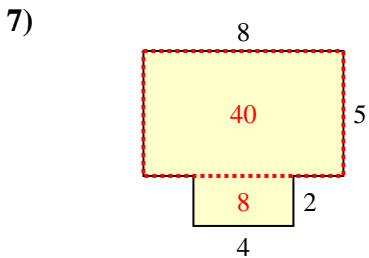
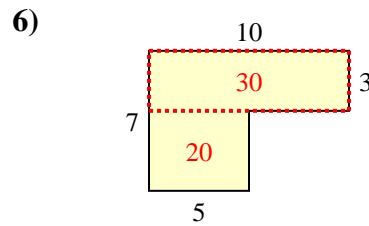
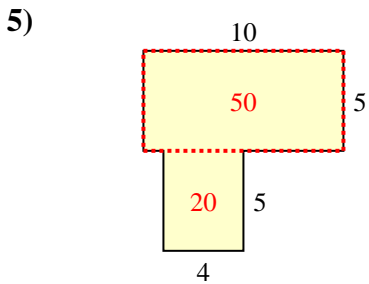
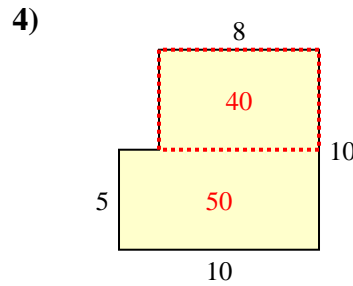
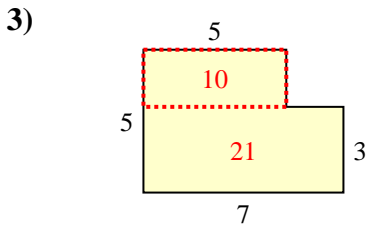
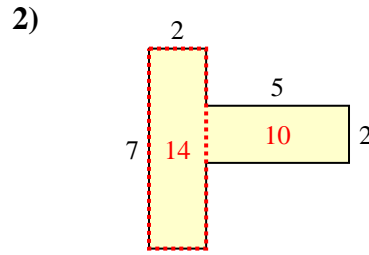
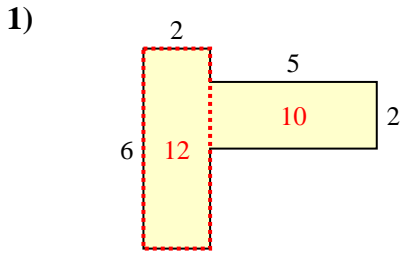
8. _____

9. _____

10. _____



Encuentra el área total de cada figura. La medida está en milímetros (mm). No a escala.



Respuestas

1. 22 mm²
2. 24 mm²
3. 31 mm²
4. 90 mm²
5. 70 mm²
6. 50 mm²
7. 48 mm²
8. 66 mm²
9. 45 mm²
10. 55 mm²