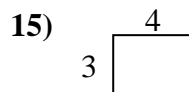
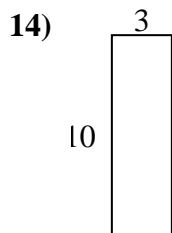
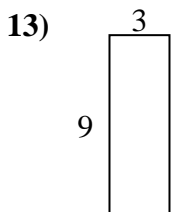
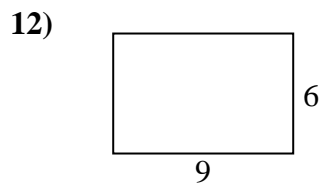
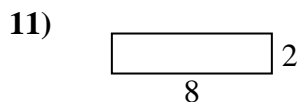
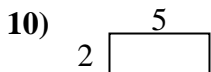
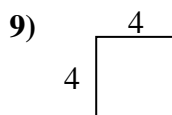
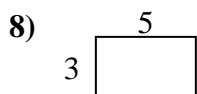
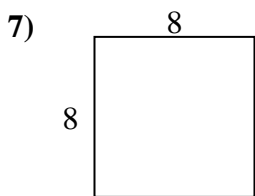
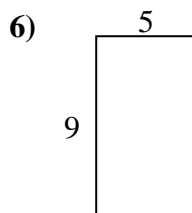
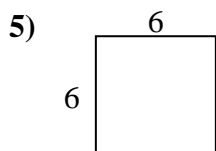
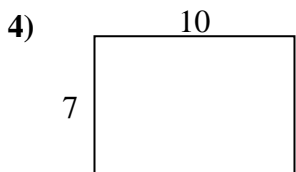
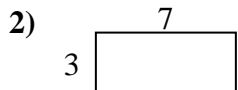
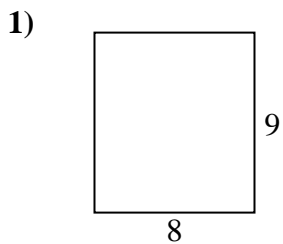




Encuentra el perímetro de cada figura. Cada figura está en pulgadas. No a escala.

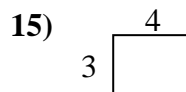
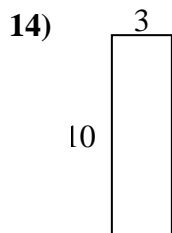
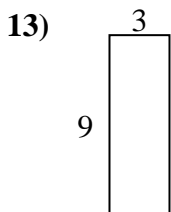
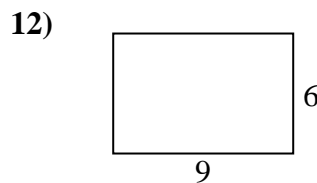
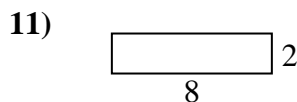
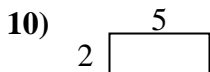
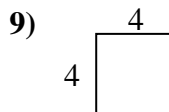
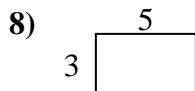
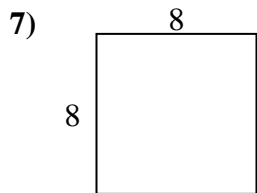
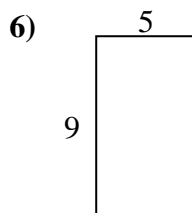
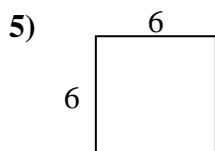
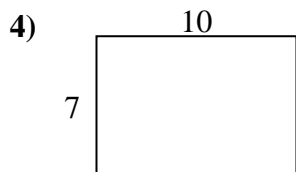
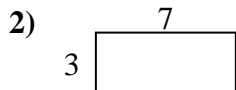
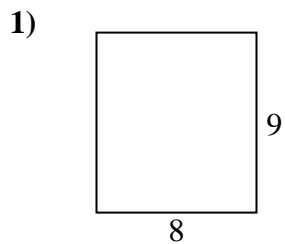


**Respuestas**

1. \_\_\_\_\_
2. \_\_\_\_\_
3. \_\_\_\_\_
4. \_\_\_\_\_
5. \_\_\_\_\_
6. \_\_\_\_\_
7. \_\_\_\_\_
8. \_\_\_\_\_
9. \_\_\_\_\_
10. \_\_\_\_\_
11. \_\_\_\_\_
12. \_\_\_\_\_
13. \_\_\_\_\_
14. \_\_\_\_\_
15. \_\_\_\_\_



Encuentra el perímetro de cada figura. Cada figura está en pulgadas. No a escala.



**Respuestas**

1. 34 in    72 in<sup>2</sup>
2. 20 in    21 in<sup>2</sup>
3. 22 in    24 in<sup>2</sup>
4. 34 in    70 in<sup>2</sup>
5. 24 in    36 in<sup>2</sup>
6. 28 in    45 in<sup>2</sup>
7. 32 in    64 in<sup>2</sup>
8. 16 in    15 in<sup>2</sup>
9. 16 in    16 in<sup>2</sup>
10. 14 in    10 in<sup>2</sup>
11. 20 in    16 in<sup>2</sup>
12. 30 in    54 in<sup>2</sup>
13. 24 in    27 in<sup>2</sup>
14. 26 in    30 in<sup>2</sup>
15. 14 in    12 in<sup>2</sup>