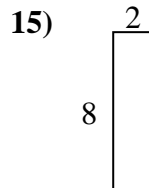
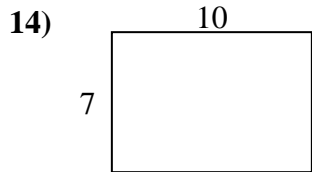
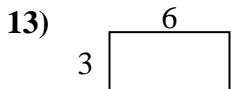
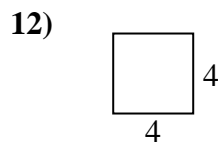
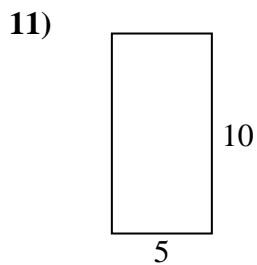
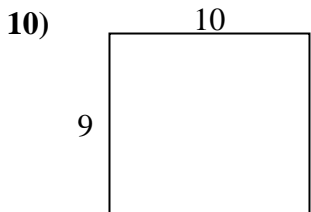
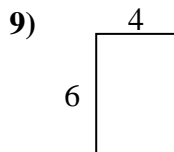
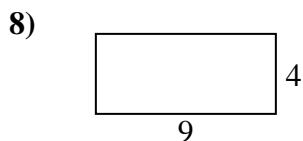
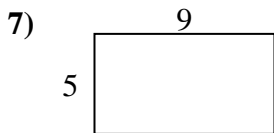
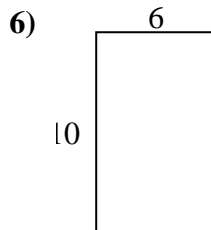
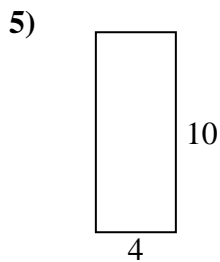
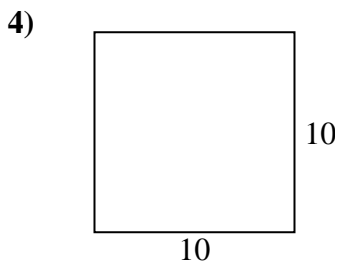
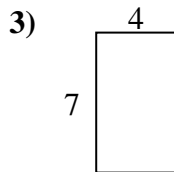
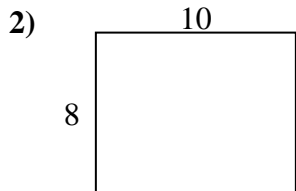
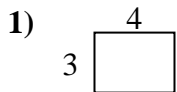




Encuentra el perímetro de cada figura. Cada figura está en pulgadas. No a escala.

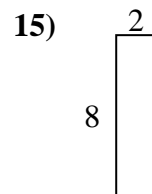
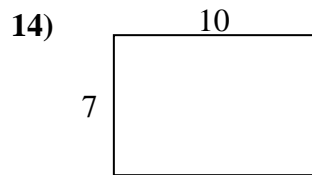
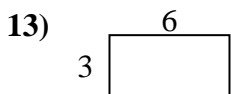
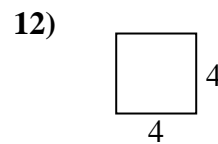
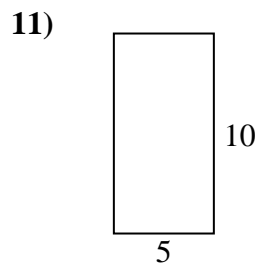
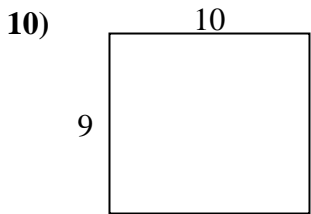
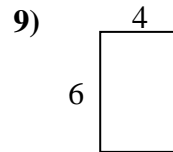
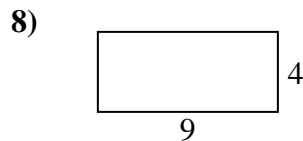
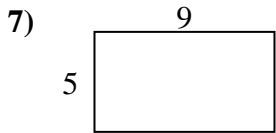
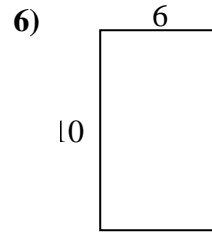
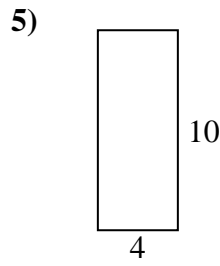
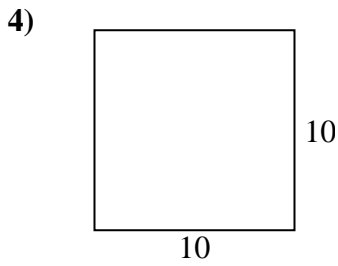
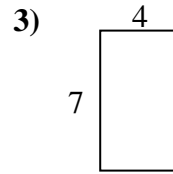
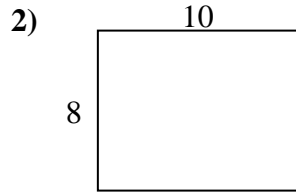
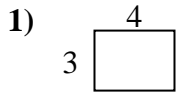


Respuestas

1. _____
2. _____
3. _____
4. _____
5. _____
6. _____
7. _____
8. _____
9. _____
10. _____
11. _____
12. _____
13. _____
14. _____
15. _____



Encuentra el perímetro de cada figura. Cada figura está en pulgadas. No a escala.



Respuestas

1. 14 in 12 in²
2. 36 in 80 in²
3. 22 in 28 in²
4. 40 in 100 in²
5. 28 in 40 in²
6. 32 in 60 in²
7. 28 in 45 in²
8. 26 in 36 in²
9. 20 in 24 in²
10. 38 in 90 in²
11. 30 in 50 in²
12. 16 in 16 in²
13. 18 in 18 in²
14. 34 in 70 in²
15. 20 in 16 in²