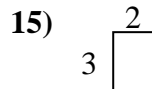
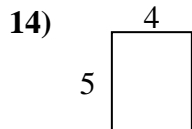
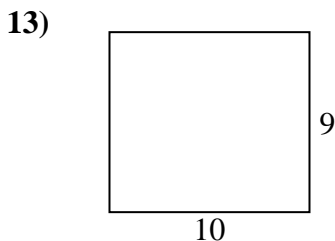
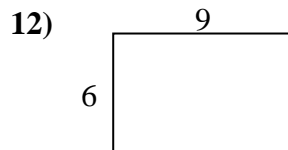
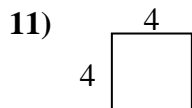
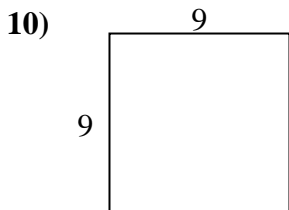
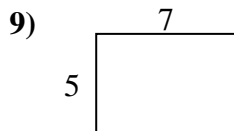
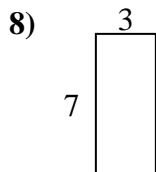
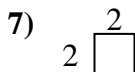
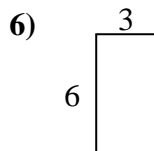
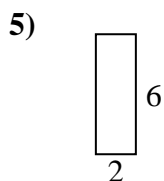
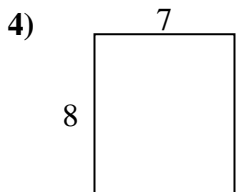
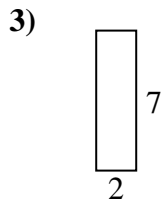
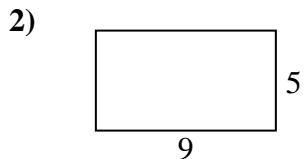
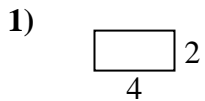




Encuentra el perímetro de cada figura. Cada figura está en pulgadas. No a escala.

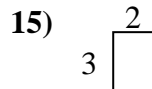
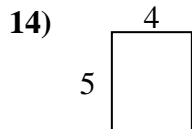
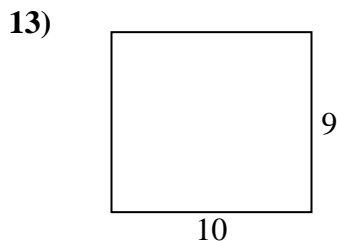
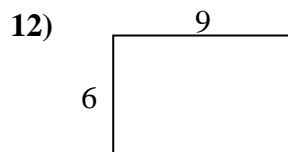
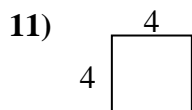
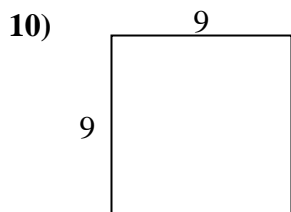
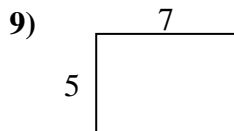
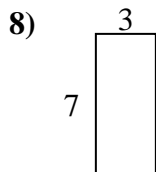
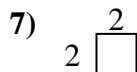
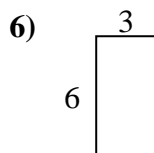
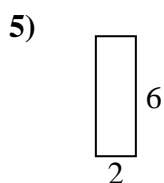
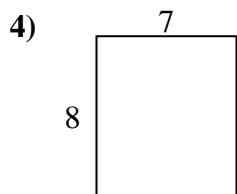
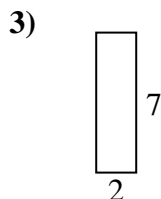
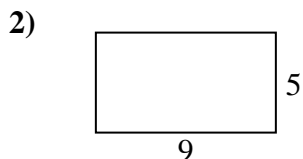
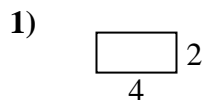


Respuestas

1. _____
2. _____
3. _____
4. _____
5. _____
6. _____
7. _____
8. _____
9. _____
10. _____
11. _____
12. _____
13. _____
14. _____
15. _____



Encuentra el perímetro de cada figura. Cada figura está en pulgadas. No a escala.



Respuestas

1. 12 in 8 in²
2. 28 in 45 in²
3. 18 in 14 in²
4. 30 in 56 in²
5. 16 in 12 in²
6. 18 in 18 in²
7. 8 in 4 in²
8. 20 in 21 in²
9. 24 in 35 in²
10. 36 in 81 in²
11. 16 in 16 in²
12. 30 in 54 in²
13. 38 in 90 in²
14. 18 in 20 in²
15. 10 in 6 in²