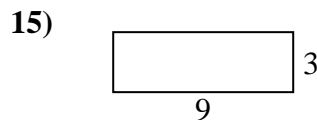
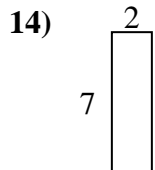
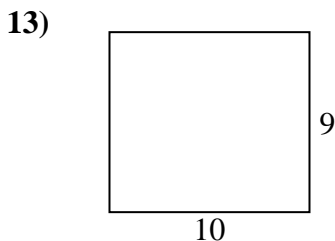
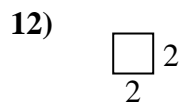
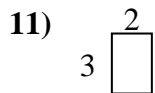
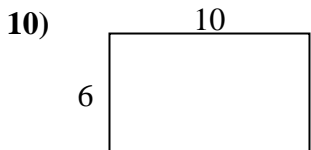
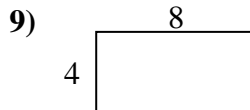
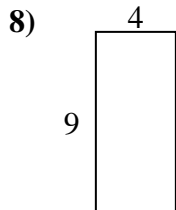
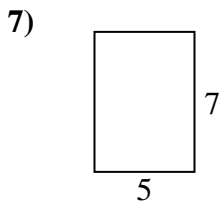
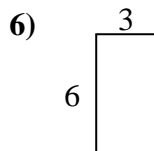
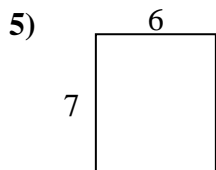
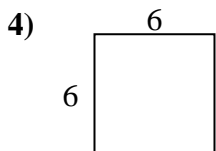
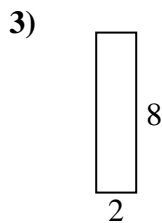
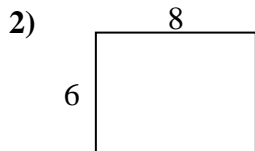
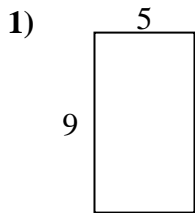




Encuentra el perímetro de cada figura. Cada figura está en pulgadas. No a escala.

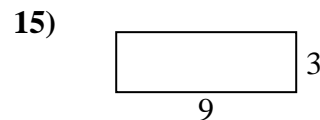
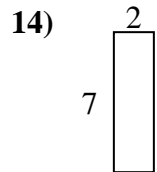
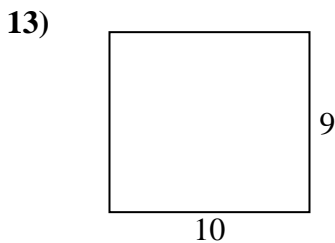
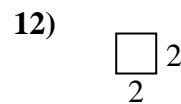
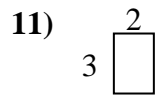
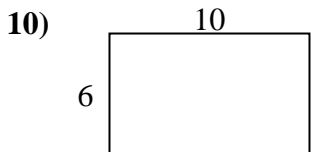
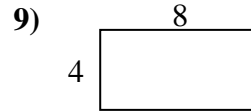
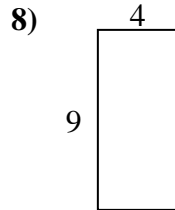
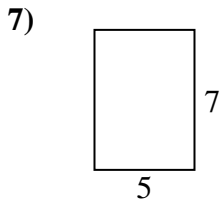
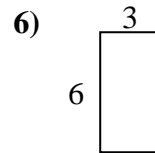
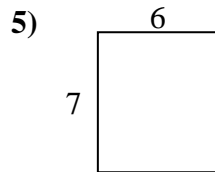
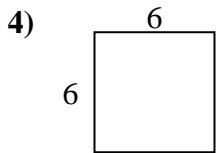
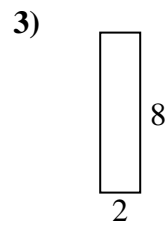
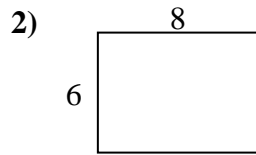
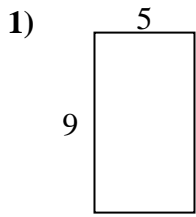


**Respuestas**

1. \_\_\_\_\_
2. \_\_\_\_\_
3. \_\_\_\_\_
4. \_\_\_\_\_
5. \_\_\_\_\_
6. \_\_\_\_\_
7. \_\_\_\_\_
8. \_\_\_\_\_
9. \_\_\_\_\_
10. \_\_\_\_\_
11. \_\_\_\_\_
12. \_\_\_\_\_
13. \_\_\_\_\_
14. \_\_\_\_\_
15. \_\_\_\_\_



Encuentra el perímetro de cada figura. Cada figura está en pulgadas. No a escala.



**Respuestas**

1.	<u>28 in</u>	<u>45 in<sup>2</sup></u>
2.	<u>28 in</u>	<u>48 in<sup>2</sup></u>
3.	<u>20 in</u>	<u>16 in<sup>2</sup></u>
4.	<u>24 in</u>	<u>36 in<sup>2</sup></u>
5.	<u>26 in</u>	<u>42 in<sup>2</sup></u>
6.	<u>18 in</u>	<u>18 in<sup>2</sup></u>
7.	<u>24 in</u>	<u>35 in<sup>2</sup></u>
8.	<u>26 in</u>	<u>36 in<sup>2</sup></u>
9.	<u>24 in</u>	<u>32 in<sup>2</sup></u>
10.	<u>32 in</u>	<u>60 in<sup>2</sup></u>
11.	<u>10 in</u>	<u>6 in<sup>2</sup></u>
12.	<u>8 in</u>	<u>4 in<sup>2</sup></u>
13.	<u>38 in</u>	<u>90 in<sup>2</sup></u>
14.	<u>18 in</u>	<u>14 in<sup>2</sup></u>
15.	<u>24 in</u>	<u>27 in<sup>2</sup></u>