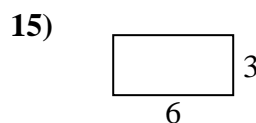
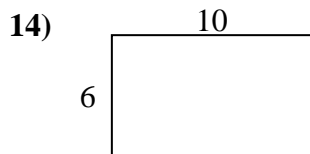
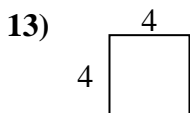
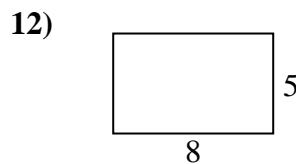
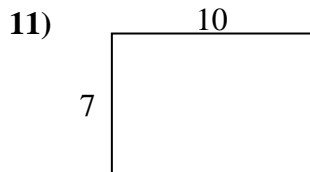
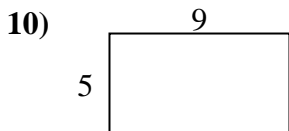
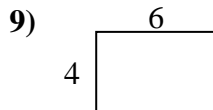
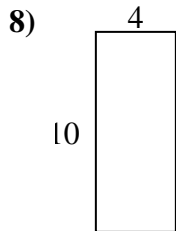
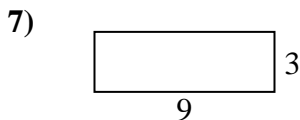
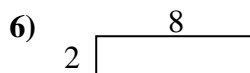
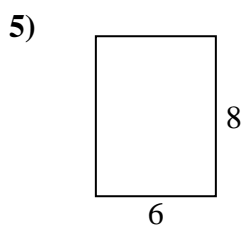
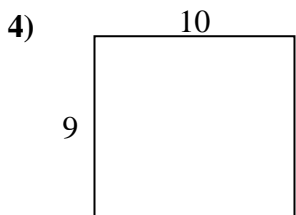
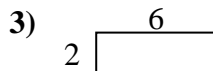
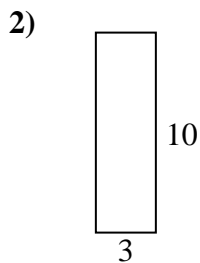
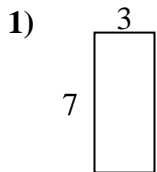




Encuentra el perímetro de cada figura. Cada figura está en pulgadas. No a escala.

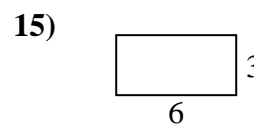
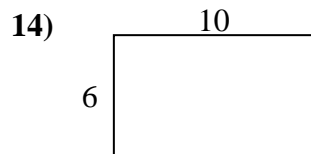
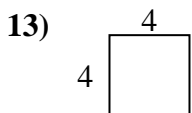
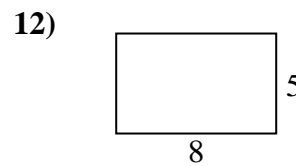
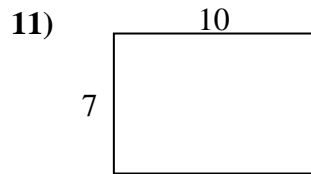
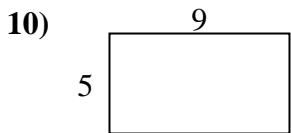
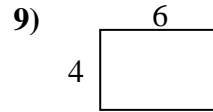
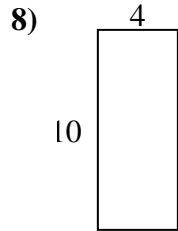
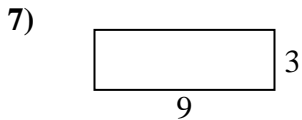
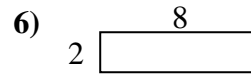
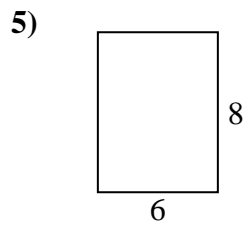
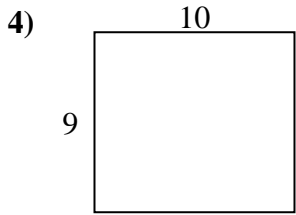
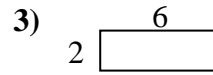
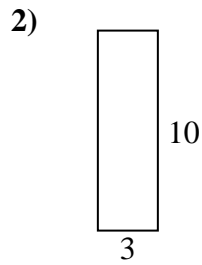
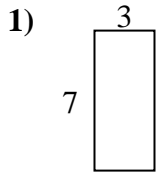


Respuestas

1. _____
2. _____
3. _____
4. _____
5. _____
6. _____
7. _____
8. _____
9. _____
10. _____
11. _____
12. _____
13. _____
14. _____
15. _____



Encuentra el perímetro de cada figura. Cada figura está en pulgadas. No a escala.



Respuestas

1.	<u>20 in</u>	<u>21 in²</u>
2.	<u>26 in</u>	<u>30 in²</u>
3.	<u>16 in</u>	<u>12 in²</u>
4.	<u>38 in</u>	<u>90 in²</u>
5.	<u>28 in</u>	<u>48 in²</u>
6.	<u>20 in</u>	<u>16 in²</u>
7.	<u>24 in</u>	<u>27 in²</u>
8.	<u>28 in</u>	<u>40 in²</u>
9.	<u>20 in</u>	<u>24 in²</u>
10.	<u>28 in</u>	<u>45 in²</u>
11.	<u>34 in</u>	<u>70 in²</u>
12.	<u>26 in</u>	<u>40 in²</u>
13.	<u>16 in</u>	<u>16 in²</u>
14.	<u>32 in</u>	<u>60 in²</u>
15.	<u>18 in</u>	<u>18 in²</u>