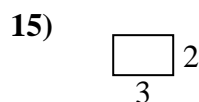
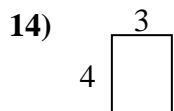
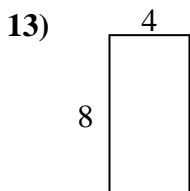
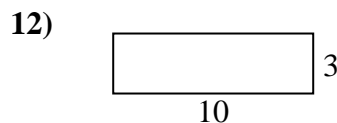
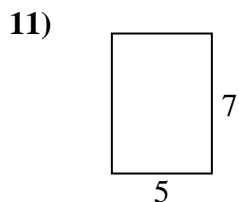
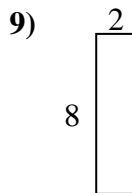
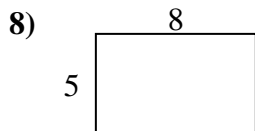
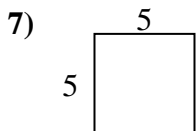
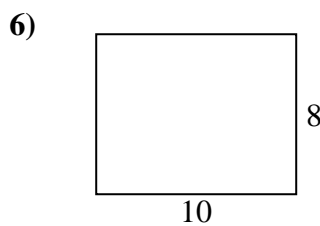
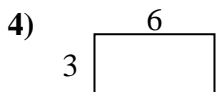
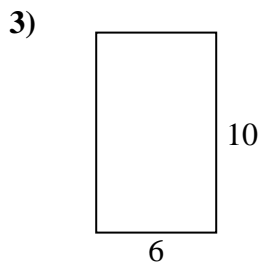
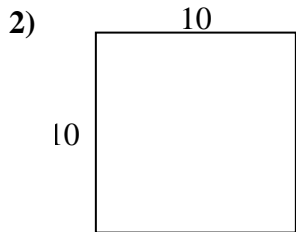
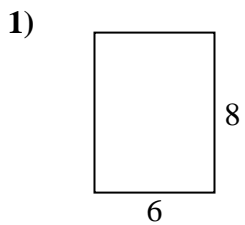




Encuentra el perímetro de cada figura. Cada figura está en pulgadas. No a escala.

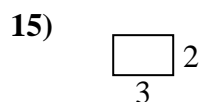
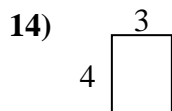
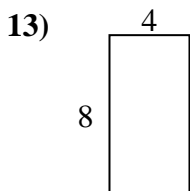
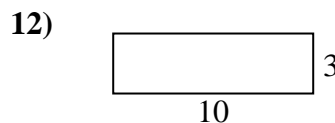
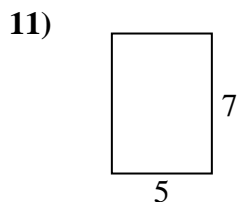
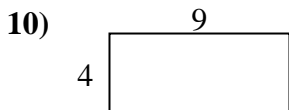
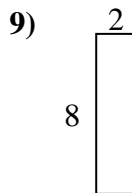
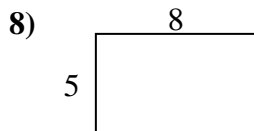
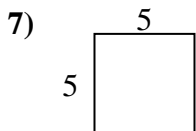
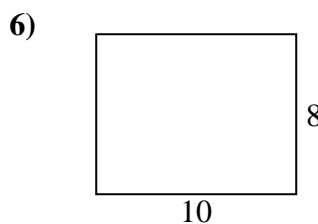
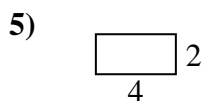
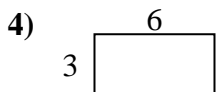
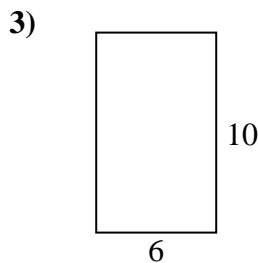
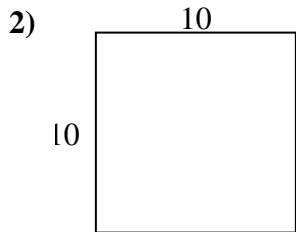
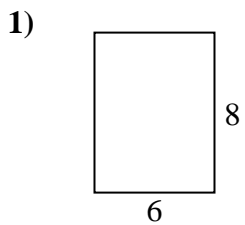


**Respuestas**

- 1. \_\_\_\_\_
- 2. \_\_\_\_\_
- 3. \_\_\_\_\_
- 4. \_\_\_\_\_
- 5. \_\_\_\_\_
- 6. \_\_\_\_\_
- 7. \_\_\_\_\_
- 8. \_\_\_\_\_
- 9. \_\_\_\_\_
- 10. \_\_\_\_\_
- 11. \_\_\_\_\_
- 12. \_\_\_\_\_
- 13. \_\_\_\_\_
- 14. \_\_\_\_\_
- 15. \_\_\_\_\_



Encuentra el perímetro de cada figura. Cada figura está en pulgadas. No a escala.



**Respuestas**

1. 28 in    48 in<sup>2</sup>
2. 40 in    100 in<sup>2</sup>
3. 32 in    60 in<sup>2</sup>
4. 18 in    18 in<sup>2</sup>
5. 12 in    8 in<sup>2</sup>
6. 36 in    80 in<sup>2</sup>
7. 20 in    25 in<sup>2</sup>
8. 26 in    40 in<sup>2</sup>
9. 20 in    16 in<sup>2</sup>
10. 26 in    36 in<sup>2</sup>
11. 24 in    35 in<sup>2</sup>
12. 26 in    30 in<sup>2</sup>
13. 24 in    32 in<sup>2</sup>
14. 14 in    12 in<sup>2</sup>
15. 10 in    6 in<sup>2</sup>