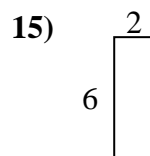
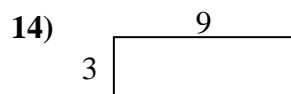
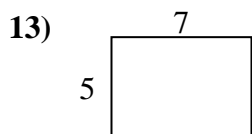
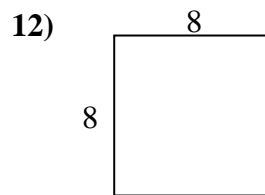
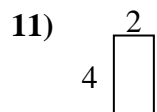
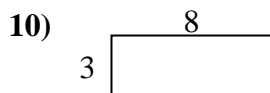
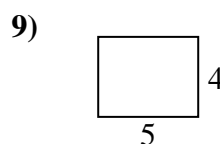
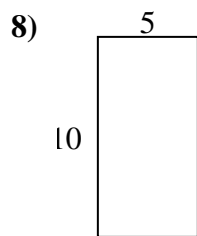
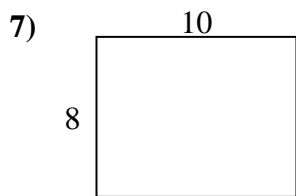
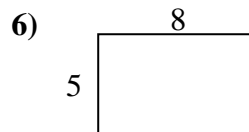
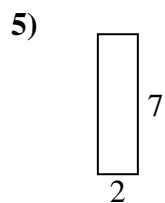
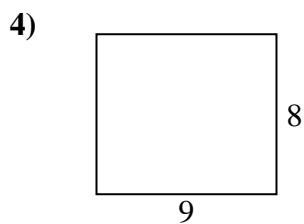
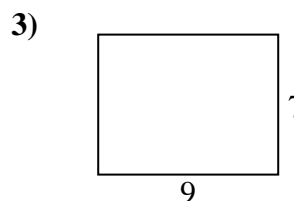
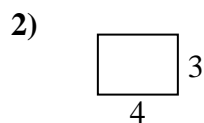
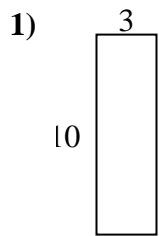




Encuentra el perímetro de cada figura. Cada figura está en pulgadas. No a escala.

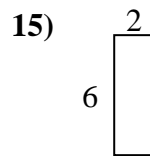
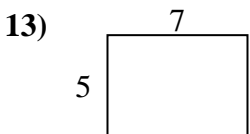
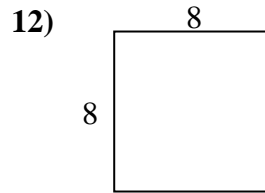
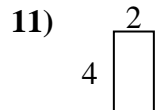
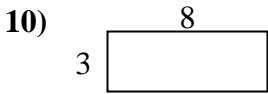
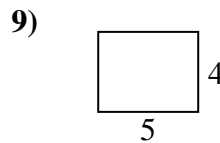
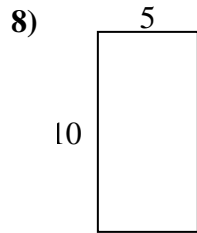
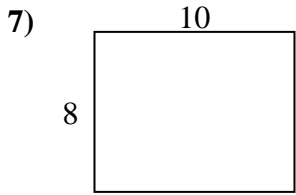
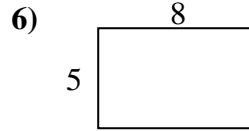
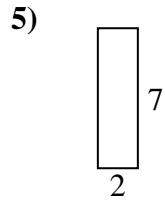
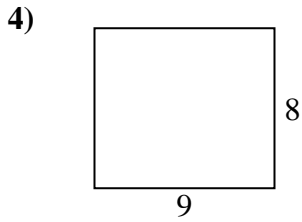
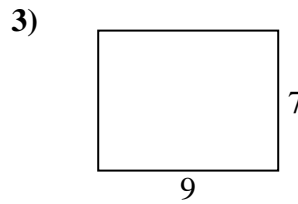
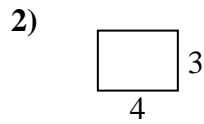
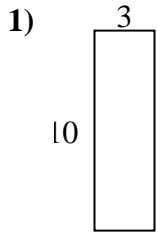


Respuestas

1. _____
2. _____
3. _____
4. _____
5. _____
6. _____
7. _____
8. _____
9. _____
10. _____
11. _____
12. _____
13. _____
14. _____
15. _____



Encuentra el perímetro de cada figura. Cada figura está en pulgadas. No a escala.



Respuestas

1. 26 in 30 in²
2. 14 in 12 in²
3. 32 in 63 in²
4. 34 in 72 in²
5. 18 in 14 in²
6. 26 in 40 in²
7. 36 in 80 in²
8. 30 in 50 in²
9. 18 in 20 in²
10. 22 in 24 in²
11. 12 in 8 in²
12. 32 in 64 in²
13. 24 in 35 in²
14. 24 in 27 in²
15. 16 in 12 in²