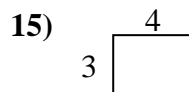
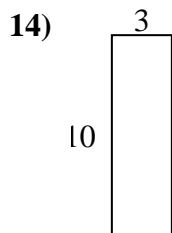
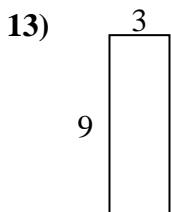
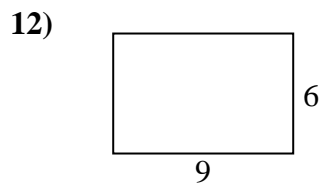
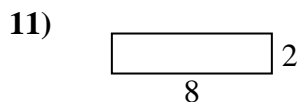
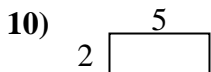
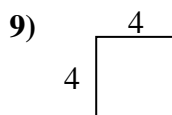
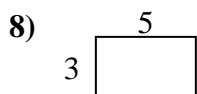
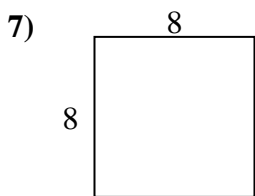
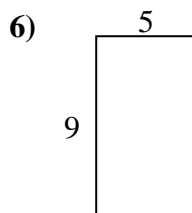
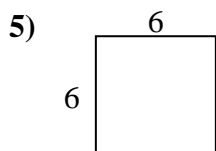
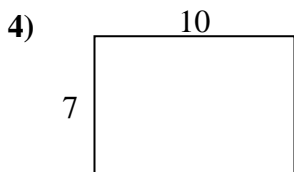
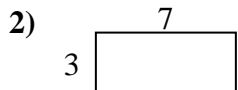
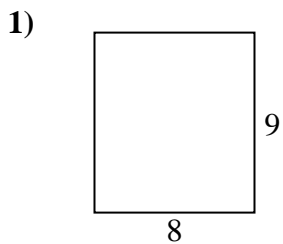




Encuentra el perímetro de cada figura. Cada figura está en pulgadas. No a escala.

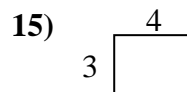
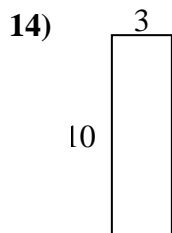
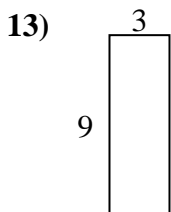
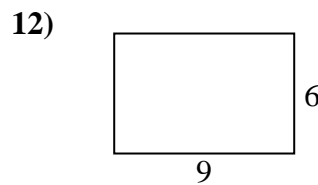
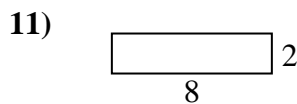
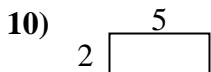
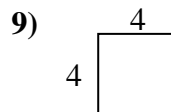
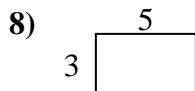
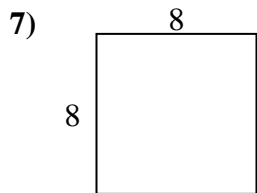
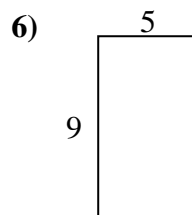
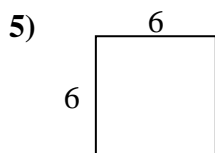
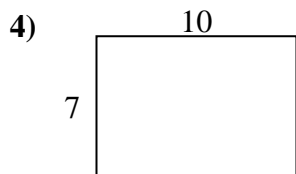
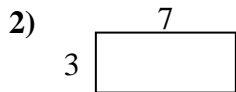
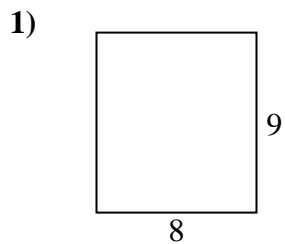


Respuestas

1. _____
2. _____
3. _____
4. _____
5. _____
6. _____
7. _____
8. _____
9. _____
10. _____
11. _____
12. _____
13. _____
14. _____
15. _____



Encuentra el perímetro de cada figura. Cada figura está en pulgadas. No a escala.

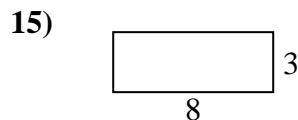
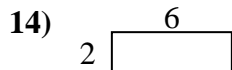
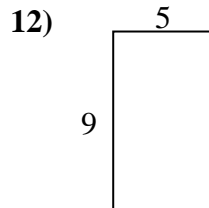
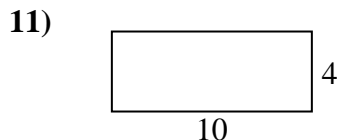
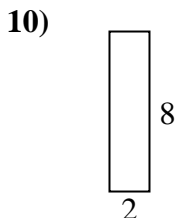
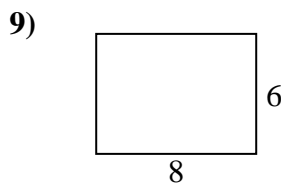
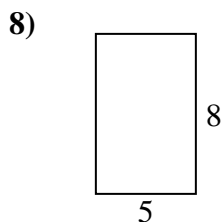
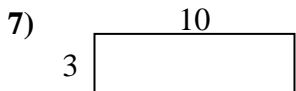
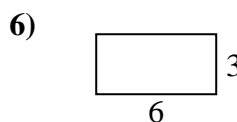
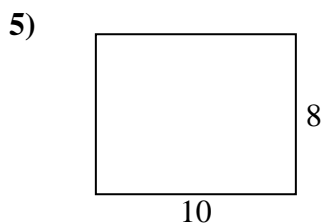
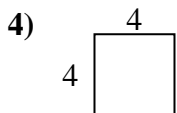
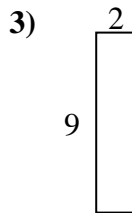
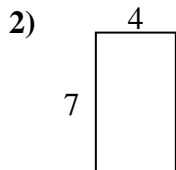
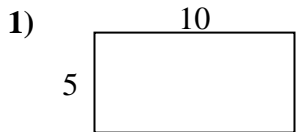


Respuestas

1. 34 in 72 in²
2. 20 in 21 in²
3. 22 in 24 in²
4. 34 in 70 in²
5. 24 in 36 in²
6. 28 in 45 in²
7. 32 in 64 in²
8. 16 in 15 in²
9. 16 in 16 in²
10. 14 in 10 in²
11. 20 in 16 in²
12. 30 in 54 in²
13. 24 in 27 in²
14. 26 in 30 in²
15. 14 in 12 in²



Encuentra el perímetro de cada figura. Cada figura está en pulgadas. No a escala.

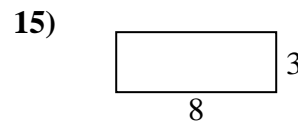
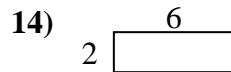
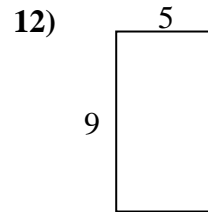
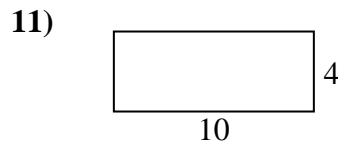
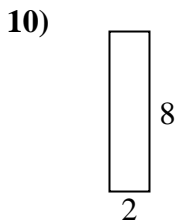
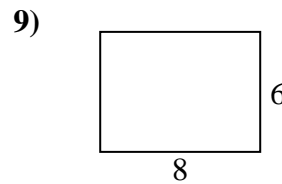
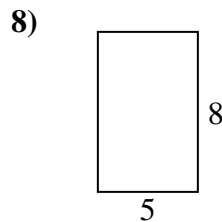

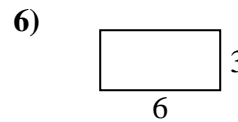
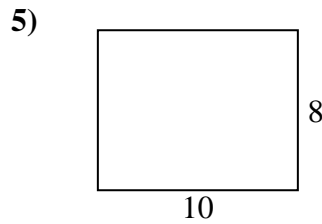
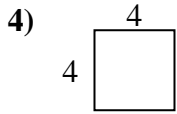
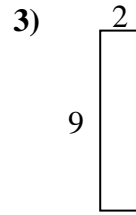
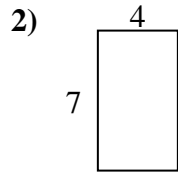
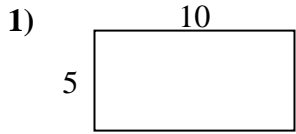


Respuestas

1. _____
2. _____
3. _____
4. _____
5. _____
6. _____
7. _____
8. _____
9. _____
10. _____
11. _____
12. _____
13. _____
14. _____
15. _____



Encuentra el perímetro de cada figura. Cada figura está en pulgadas. No a escala.

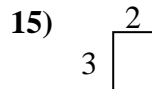
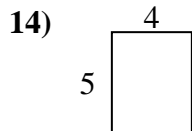
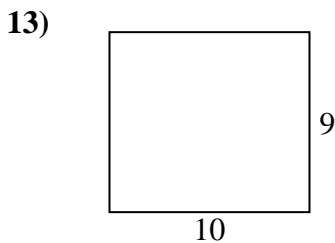
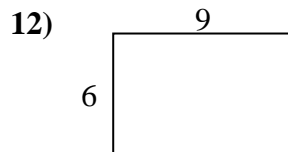
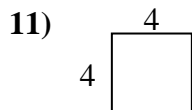
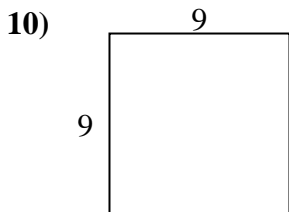
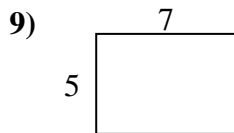
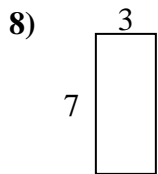
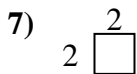
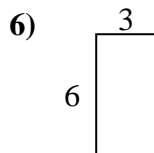
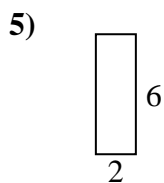
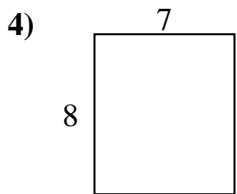
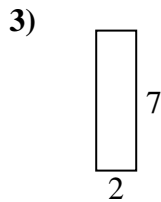
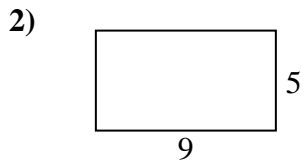
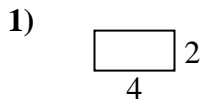


Respuestas

1. 30 in 50 in²
2. 22 in 28 in²
3. 22 in 18 in²
4. 16 in 16 in²
5. 36 in 80 in²
6. 18 in 18 in²
7. 26 in 30 in²
8. 26 in 40 in²
9. 28 in 48 in²
10. 20 in 16 in²
11. 28 in 40 in²
12. 28 in 45 in²
13. 10 in 6 in²
14. 16 in 12 in²
15. 22 in 24 in²



Encuentra el perímetro de cada figura. Cada figura está en pulgadas. No a escala.

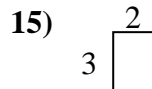
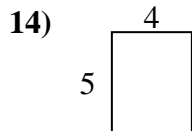
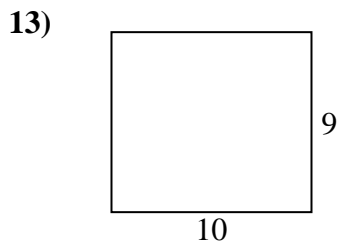
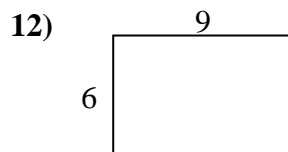
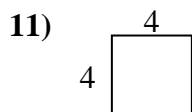
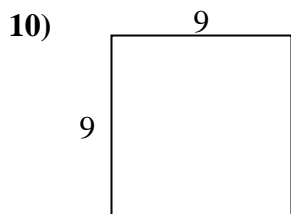
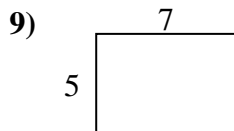
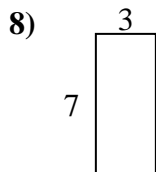
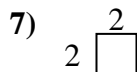
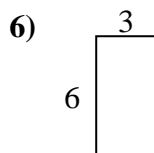
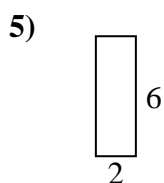
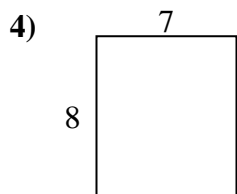
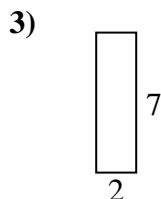
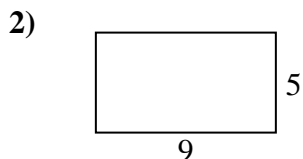


Respuestas

1. _____
2. _____
3. _____
4. _____
5. _____
6. _____
7. _____
8. _____
9. _____
10. _____
11. _____
12. _____
13. _____
14. _____
15. _____



Encuentra el perímetro de cada figura. Cada figura está en pulgadas. No a escala.

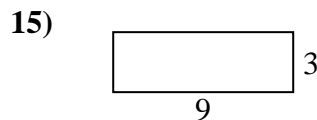
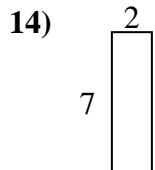
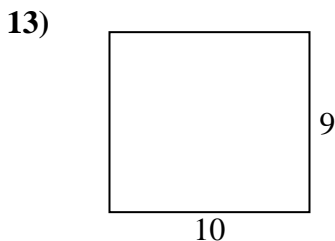
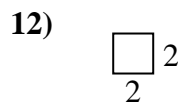
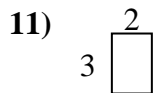
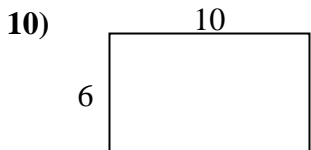
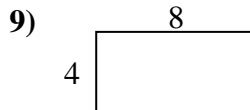
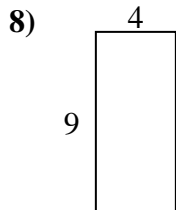
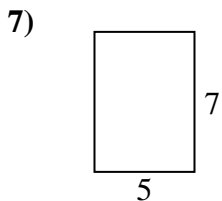
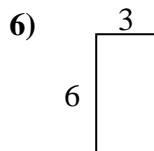
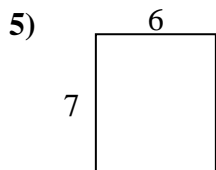
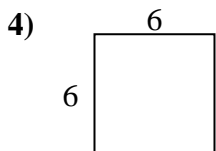
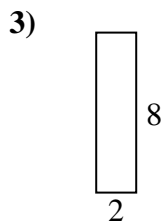
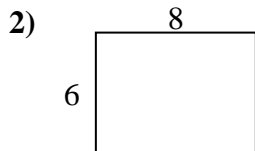
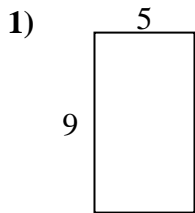


Respuestas

1. 12 in 8 in²
2. 28 in 45 in²
3. 18 in 14 in²
4. 30 in 56 in²
5. 16 in 12 in²
6. 18 in 18 in²
7. 8 in 4 in²
8. 20 in 21 in²
9. 24 in 35 in²
10. 36 in 81 in²
11. 16 in 16 in²
12. 30 in 54 in²
13. 38 in 90 in²
14. 18 in 20 in²
15. 10 in 6 in²



Encuentra el perímetro de cada figura. Cada figura está en pulgadas. No a escala.

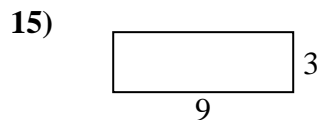
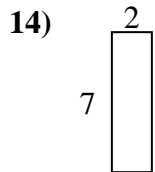
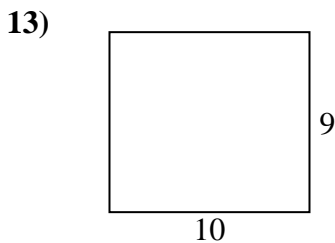
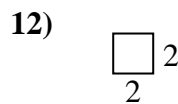
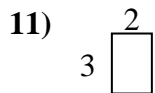
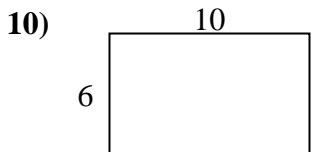
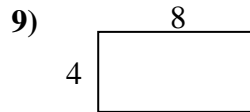
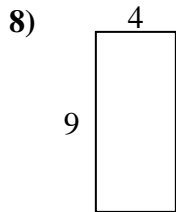
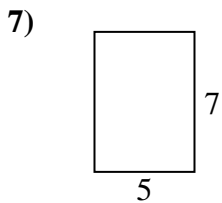
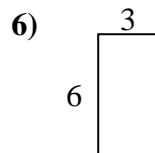
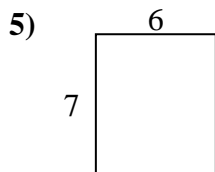
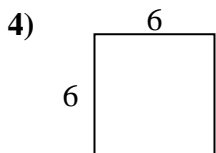
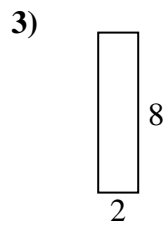
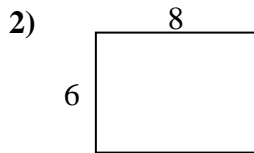
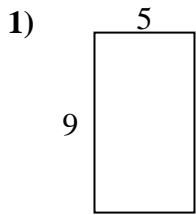


Respuestas

1. _____
2. _____
3. _____
4. _____
5. _____
6. _____
7. _____
8. _____
9. _____
10. _____
11. _____
12. _____
13. _____
14. _____
15. _____



Encuentra el perímetro de cada figura. Cada figura está en pulgadas. No a escala.

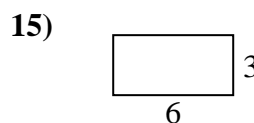
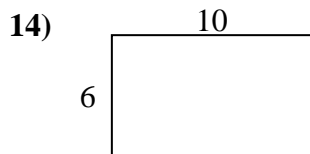
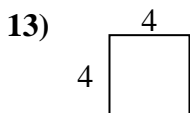
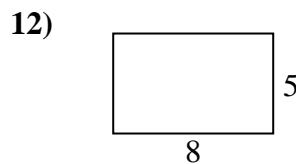
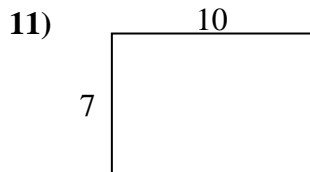
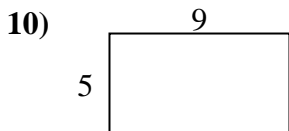
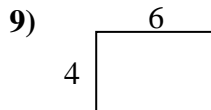
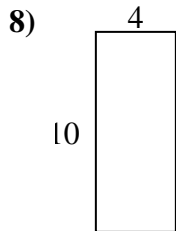
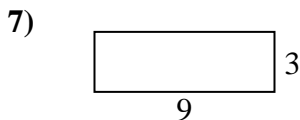
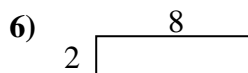
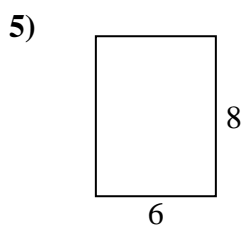
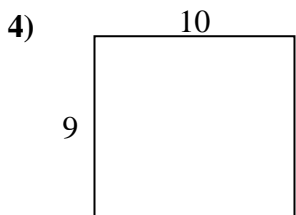
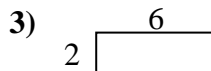
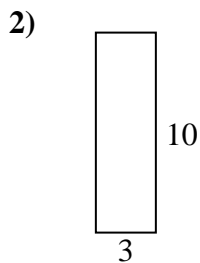
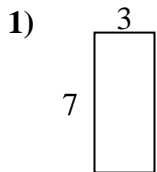


Respuestas

1.	<u>28 in</u>	<u>45 in²</u>
2.	<u>28 in</u>	<u>48 in²</u>
3.	<u>20 in</u>	<u>16 in²</u>
4.	<u>24 in</u>	<u>36 in²</u>
5.	<u>26 in</u>	<u>42 in²</u>
6.	<u>18 in</u>	<u>18 in²</u>
7.	<u>24 in</u>	<u>35 in²</u>
8.	<u>26 in</u>	<u>36 in²</u>
9.	<u>24 in</u>	<u>32 in²</u>
10.	<u>32 in</u>	<u>60 in²</u>
11.	<u>10 in</u>	<u>6 in²</u>
12.	<u>8 in</u>	<u>4 in²</u>
13.	<u>38 in</u>	<u>90 in²</u>
14.	<u>18 in</u>	<u>14 in²</u>
15.	<u>24 in</u>	<u>27 in²</u>



Encuentra el perímetro de cada figura. Cada figura está en pulgadas. No a escala.

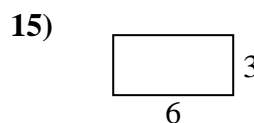
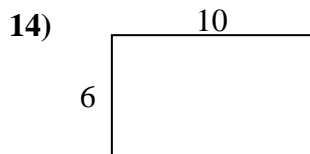
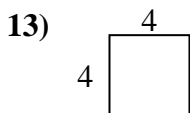
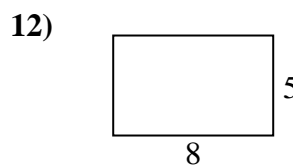
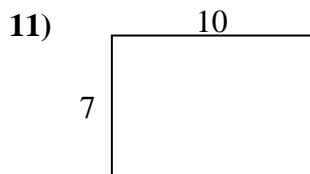
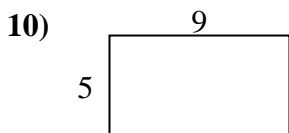
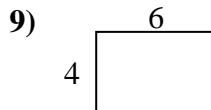
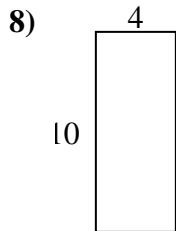
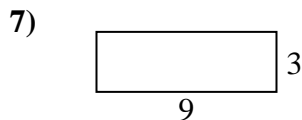
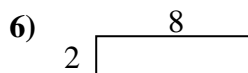
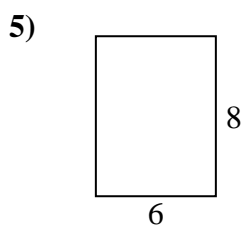
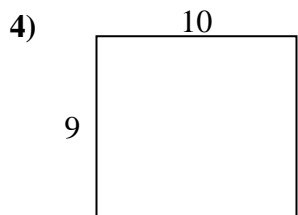
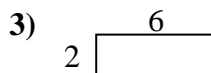
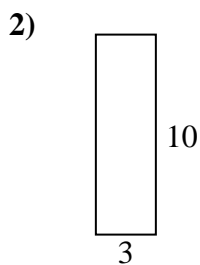
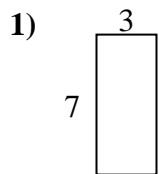


Respuestas

1. _____
2. _____
3. _____
4. _____
5. _____
6. _____
7. _____
8. _____
9. _____
10. _____
11. _____
12. _____
13. _____
14. _____
15. _____



Encuentra el perímetro de cada figura. Cada figura está en pulgadas. No a escala.

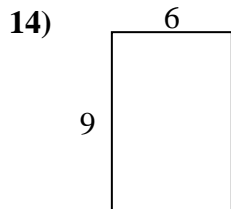
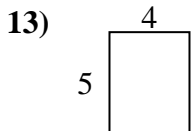
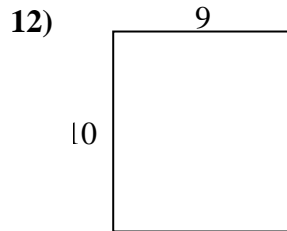
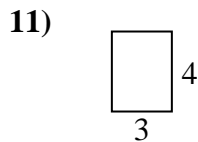
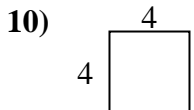
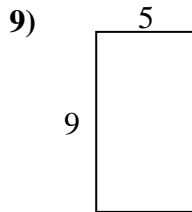
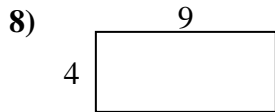
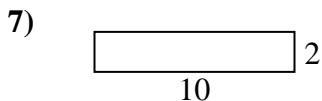
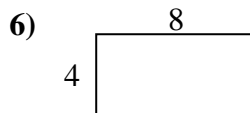
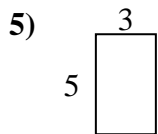
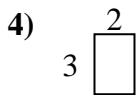
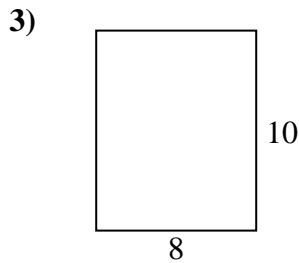
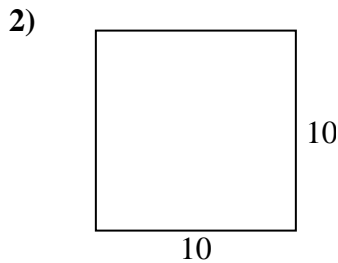
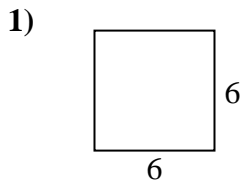


Respuestas

1.	<u>20 in</u>	<u>21 in²</u>
2.	<u>26 in</u>	<u>30 in²</u>
3.	<u>16 in</u>	<u>12 in²</u>
4.	<u>38 in</u>	<u>90 in²</u>
5.	<u>28 in</u>	<u>48 in²</u>
6.	<u>20 in</u>	<u>16 in²</u>
7.	<u>24 in</u>	<u>27 in²</u>
8.	<u>28 in</u>	<u>40 in²</u>
9.	<u>20 in</u>	<u>24 in²</u>
10.	<u>28 in</u>	<u>45 in²</u>
11.	<u>34 in</u>	<u>70 in²</u>
12.	<u>26 in</u>	<u>40 in²</u>
13.	<u>16 in</u>	<u>16 in²</u>
14.	<u>32 in</u>	<u>60 in²</u>
15.	<u>18 in</u>	<u>18 in²</u>



Encuentra el perímetro de cada figura. Cada figura está en pulgadas. No a escala.

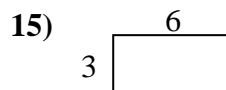
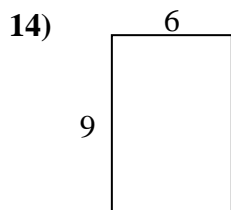
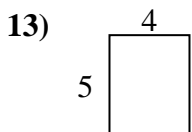
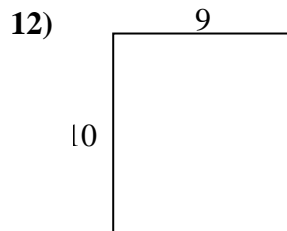
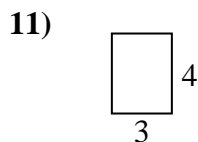
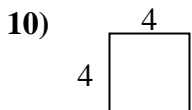
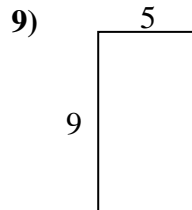
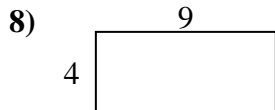
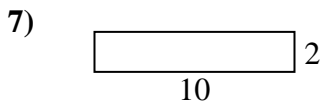
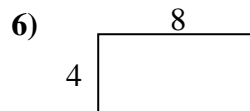
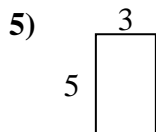
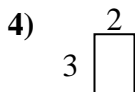
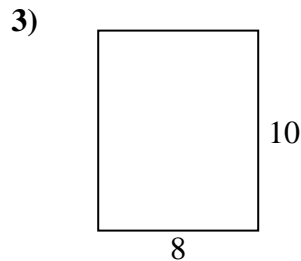
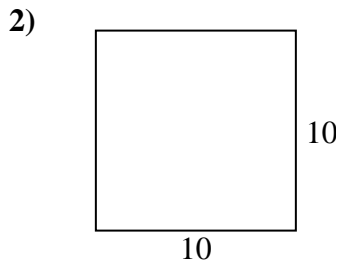
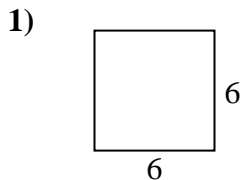


Respuestas

1. _____
2. _____
3. _____
4. _____
5. _____
6. _____
7. _____
8. _____
9. _____
10. _____
11. _____
12. _____
13. _____
14. _____
15. _____



Encuentra el perímetro de cada figura. Cada figura está en pulgadas. No a escala.

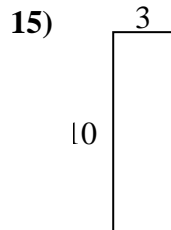
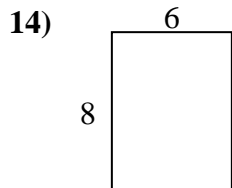
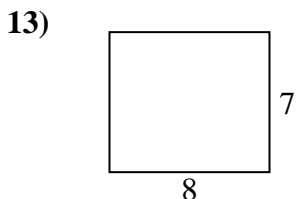
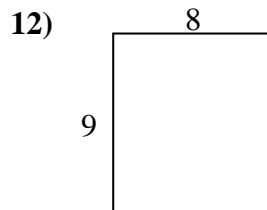
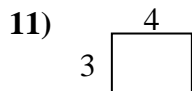
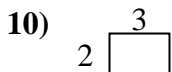
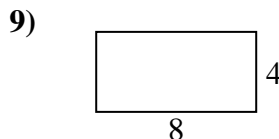
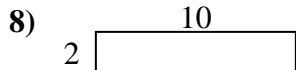
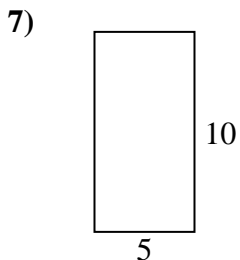
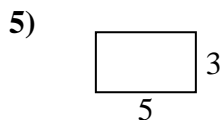
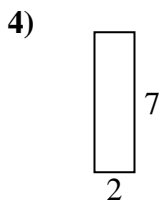
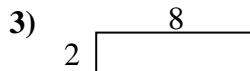
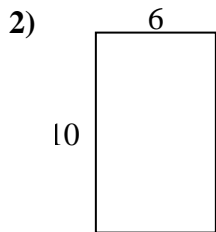
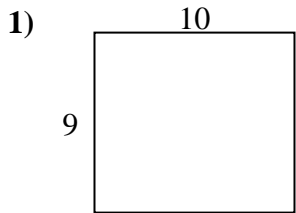


Respuestas

1.	<u>24 in</u>	<u>36 in²</u>
2.	<u>40 in</u>	<u>100 in²</u>
3.	<u>36 in</u>	<u>80 in²</u>
4.	<u>10 in</u>	<u>6 in²</u>
5.	<u>16 in</u>	<u>15 in²</u>
6.	<u>24 in</u>	<u>32 in²</u>
7.	<u>24 in</u>	<u>20 in²</u>
8.	<u>26 in</u>	<u>36 in²</u>
9.	<u>28 in</u>	<u>45 in²</u>
10.	<u>16 in</u>	<u>16 in²</u>
11.	<u>14 in</u>	<u>12 in²</u>
12.	<u>38 in</u>	<u>90 in²</u>
13.	<u>18 in</u>	<u>20 in²</u>
14.	<u>30 in</u>	<u>54 in²</u>
15.	<u>18 in</u>	<u>18 in²</u>



Encuentra el perímetro de cada figura. Cada figura está en pulgadas. No a escala.

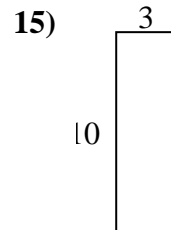
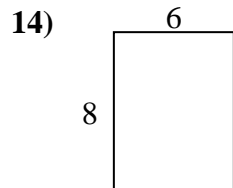
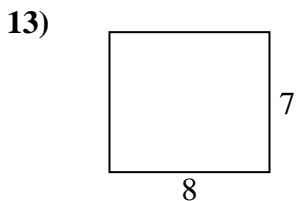
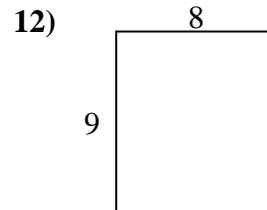
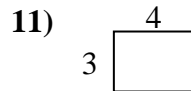
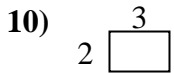
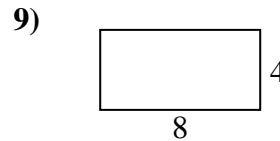

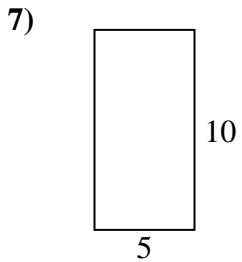
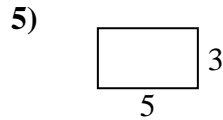
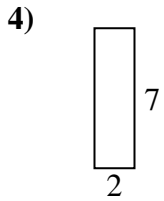
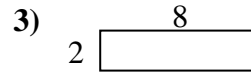
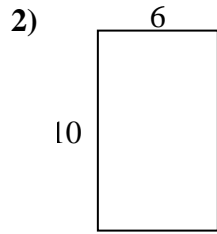
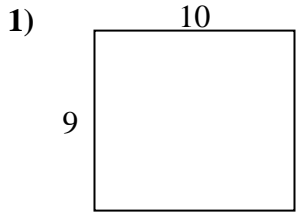


Respuestas

1. _____
2. _____
3. _____
4. _____
5. _____
6. _____
7. _____
8. _____
9. _____
10. _____
11. _____
12. _____
13. _____
14. _____
15. _____



Encuentra el perímetro de cada figura. Cada figura está en pulgadas. No a escala.

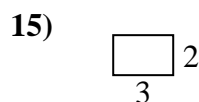
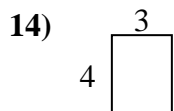
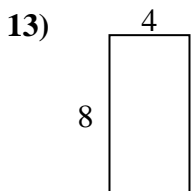
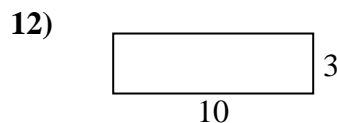
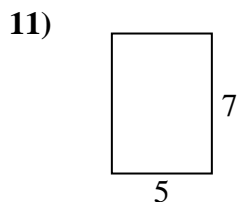
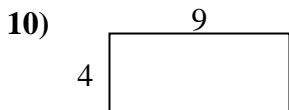
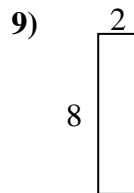
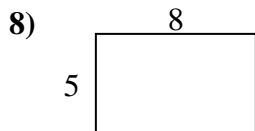
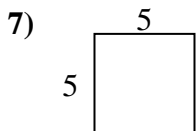
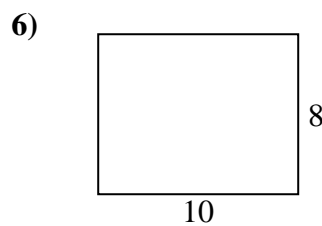
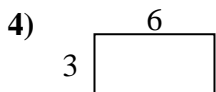
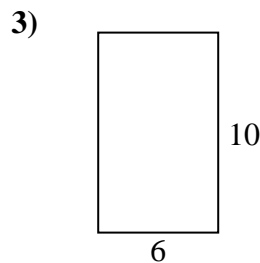
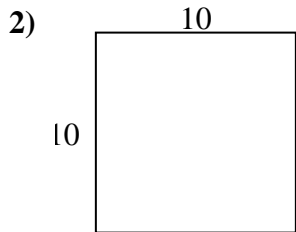
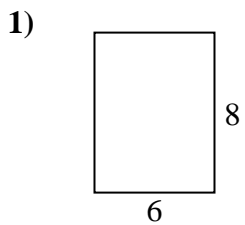


Respuestas

1. 38 in 90 in²
2. 32 in 60 in²
3. 20 in 16 in²
4. 18 in 14 in²
5. 16 in 15 in²
6. 22 in 24 in²
7. 30 in 50 in²
8. 24 in 20 in²
9. 24 in 32 in²
10. 10 in 6 in²
11. 14 in 12 in²
12. 34 in 72 in²
13. 30 in 56 in²
14. 28 in 48 in²
15. 26 in 30 in²



Encuentra el perímetro de cada figura. Cada figura está en pulgadas. No a escala.

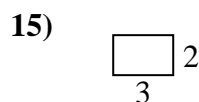
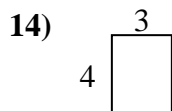
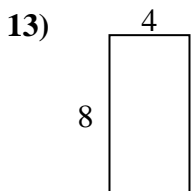
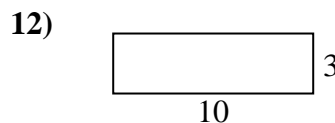
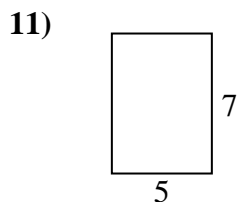
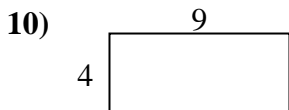
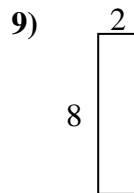
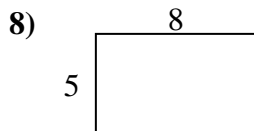
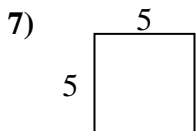
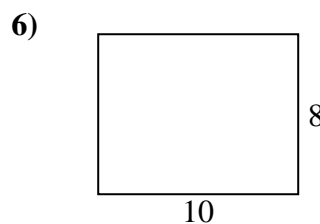
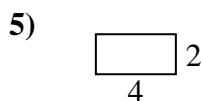
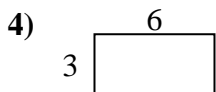
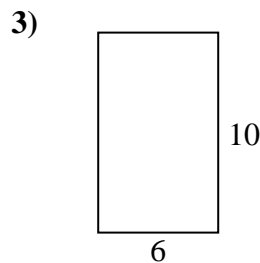
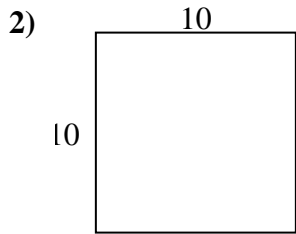
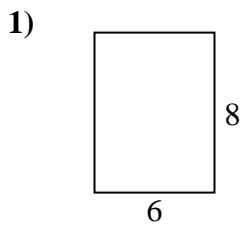


Respuestas

1. _____
2. _____
3. _____
4. _____
5. _____
6. _____
7. _____
8. _____
9. _____
10. _____
11. _____
12. _____
13. _____
14. _____
15. _____



Encuentra el perímetro de cada figura. Cada figura está en pulgadas. No a escala.

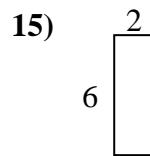
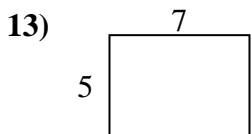
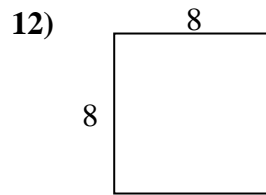
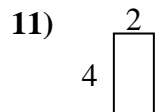
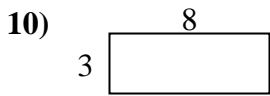
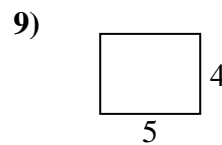
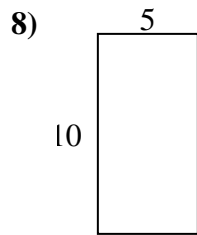
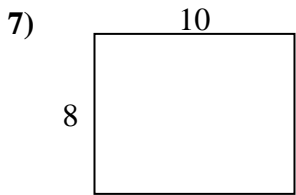
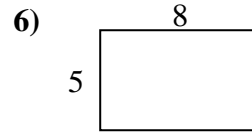
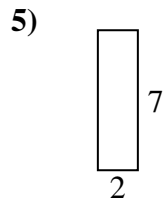
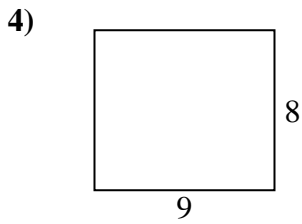
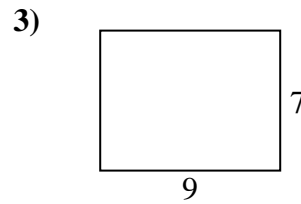
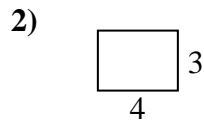
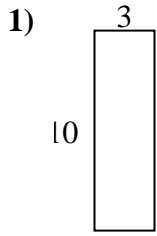


Respuestas

1. 28 in 48 in²
2. 40 in 100 in²
3. 32 in 60 in²
4. 18 in 18 in²
5. 12 in 8 in²
6. 36 in 80 in²
7. 20 in 25 in²
8. 26 in 40 in²
9. 20 in 16 in²
10. 26 in 36 in²
11. 24 in 35 in²
12. 26 in 30 in²
13. 24 in 32 in²
14. 14 in 12 in²
15. 10 in 6 in²



Encuentra el perímetro de cada figura. Cada figura está en pulgadas. No a escala.

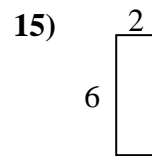
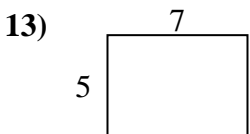
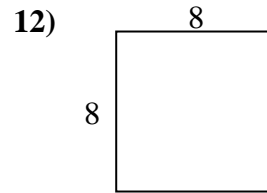
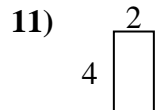
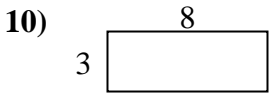
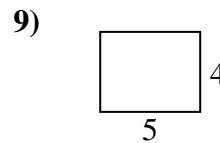
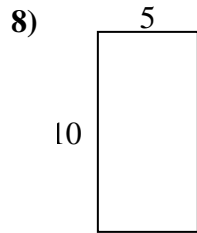
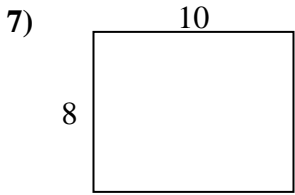
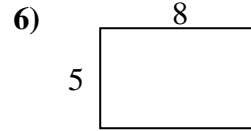
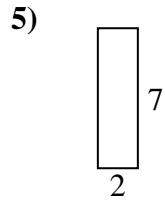
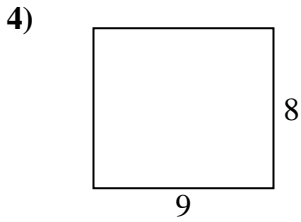
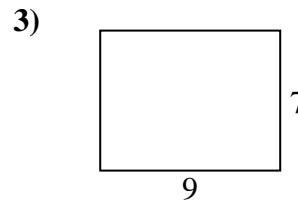
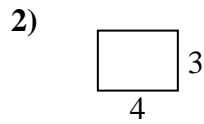
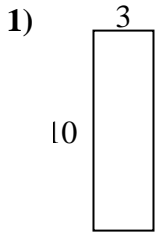


Respuestas

1. _____
2. _____
3. _____
4. _____
5. _____
6. _____
7. _____
8. _____
9. _____
10. _____
11. _____
12. _____
13. _____
14. _____
15. _____



Encuentra el perímetro de cada figura. Cada figura está en pulgadas. No a escala.

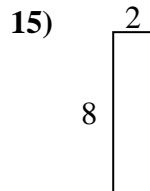
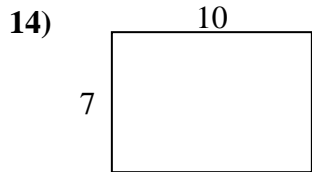
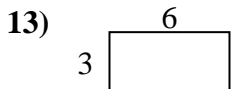
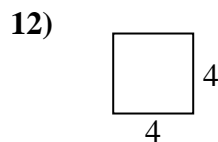
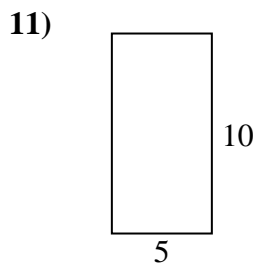
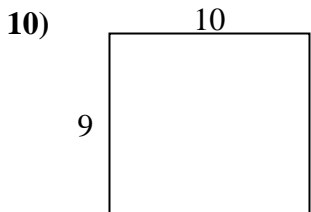
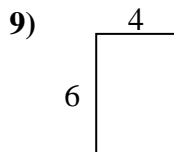
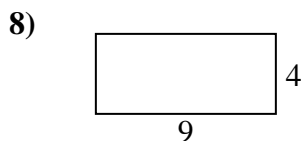
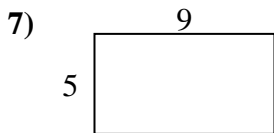
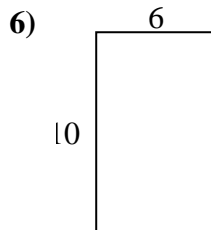
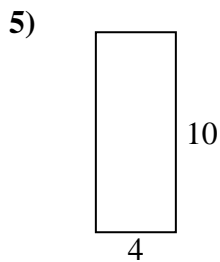
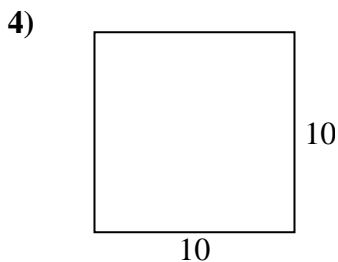
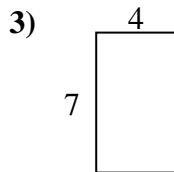
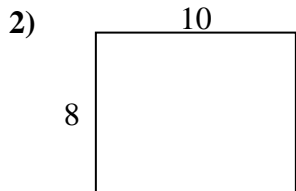
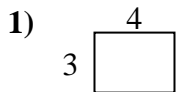


Respuestas

1. 26 in 30 in²
2. 14 in 12 in²
3. 32 in 63 in²
4. 34 in 72 in²
5. 18 in 14 in²
6. 26 in 40 in²
7. 36 in 80 in²
8. 30 in 50 in²
9. 18 in 20 in²
10. 22 in 24 in²
11. 12 in 8 in²
12. 32 in 64 in²
13. 24 in 35 in²
14. 24 in 27 in²
15. 16 in 12 in²



Encuentra el perímetro de cada figura. Cada figura está en pulgadas. No a escala.

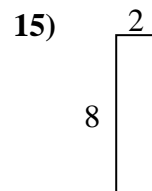
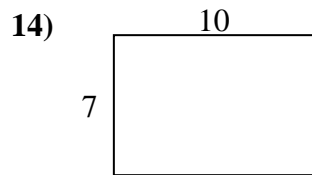
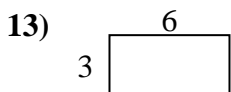
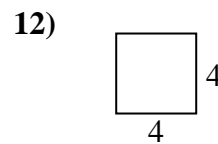
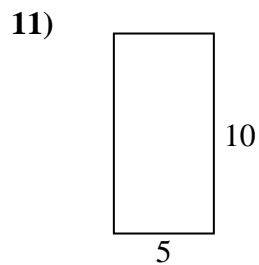
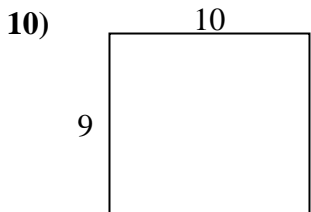
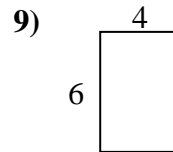
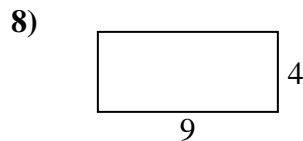
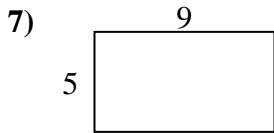
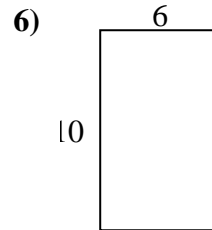
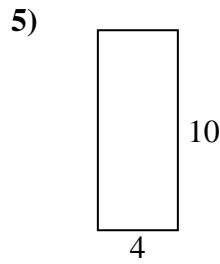
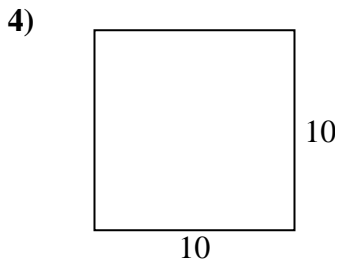
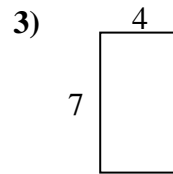
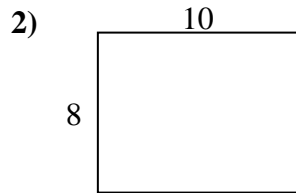
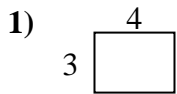


Respuestas

- 1. _____
- 2. _____
- 3. _____
- 4. _____
- 5. _____
- 6. _____
- 7. _____
- 8. _____
- 9. _____
- 10. _____
- 11. _____
- 12. _____
- 13. _____
- 14. _____
- 15. _____



Encuentra el perímetro de cada figura. Cada figura está en pulgadas. No a escala.



Respuestas

1.	<u>14 in</u>	<u>12 in²</u>
2.	<u>36 in</u>	<u>80 in²</u>
3.	<u>22 in</u>	<u>28 in²</u>
4.	<u>40 in</u>	<u>100 in²</u>
5.	<u>28 in</u>	<u>40 in²</u>
6.	<u>32 in</u>	<u>60 in²</u>
7.	<u>28 in</u>	<u>45 in²</u>
8.	<u>26 in</u>	<u>36 in²</u>
9.	<u>20 in</u>	<u>24 in²</u>
10.	<u>38 in</u>	<u>90 in²</u>
11.	<u>30 in</u>	<u>50 in²</u>
12.	<u>16 in</u>	<u>16 in²</u>
13.	<u>18 in</u>	<u>18 in²</u>
14.	<u>34 in</u>	<u>70 in²</u>
15.	<u>20 in</u>	<u>16 in²</u>