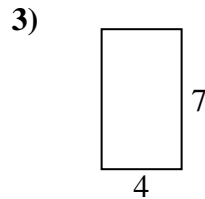
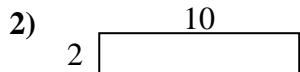
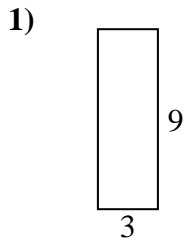


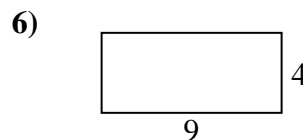
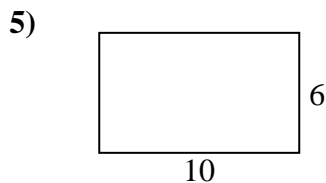
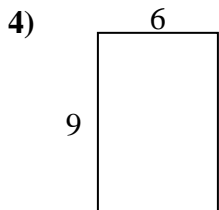


Encuentra el perímetro de cada figura. Cada figura está en pulgadas. No a escala.

Respuestas



1. _____



2. _____

3. _____


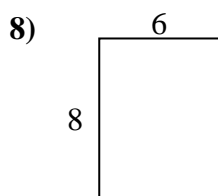
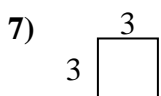
4. _____

5. _____

6. _____

7. _____

8. _____

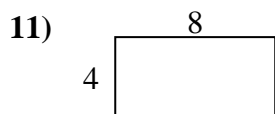
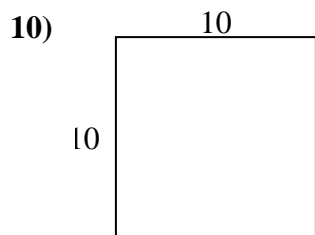


9. _____

10. _____

11. _____

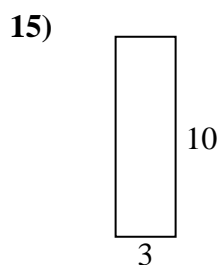
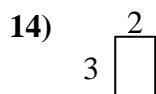
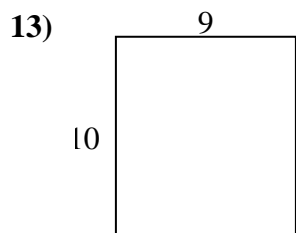
12. _____



13. _____

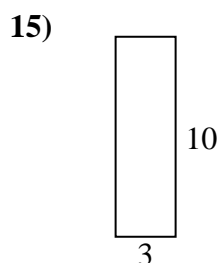
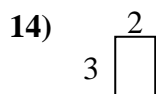
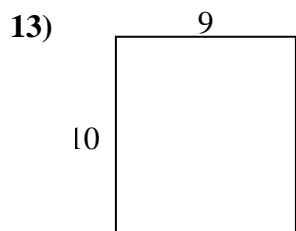
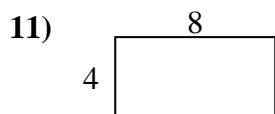
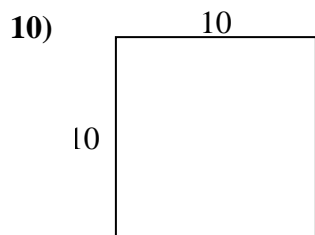

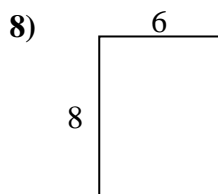
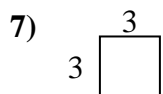
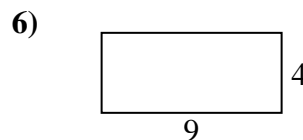
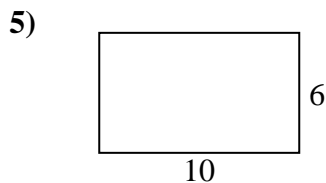
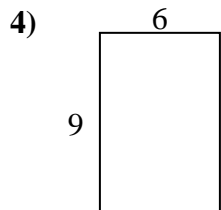
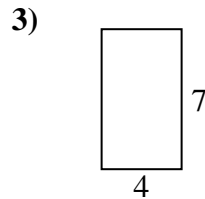
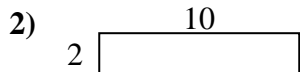
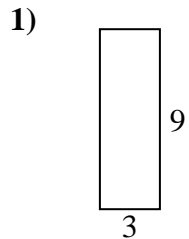
14. _____

15. _____





Encuentra el perímetro de cada figura. Cada figura está en pulgadas. No a escala.



Respuestas

- 1. 24 cm 27 cm²
- 2. 24 cm 20 cm²
- 3. 22 cm 28 cm²
- 4. 30 cm 54 cm²
- 5. 32 cm 60 cm²
- 6. 26 cm 36 cm²
- 7. 12 cm 9 cm²
- 8. 28 cm 48 cm²
- 9. 22 cm 18 cm²
- 10. 40 cm 100 cm²
- 11. 24 cm 32 cm²
- 12. 16 cm 15 cm²
- 13. 38 cm 90 cm²
- 14. 10 cm 6 cm²
- 15. 26 cm 30 cm²