
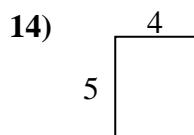
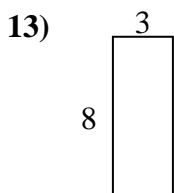
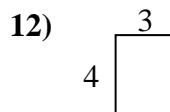
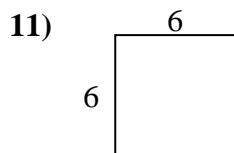
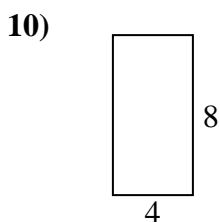
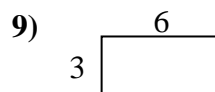
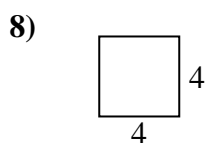
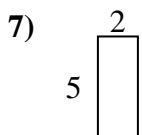
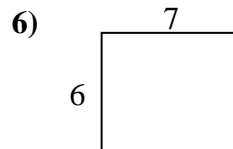
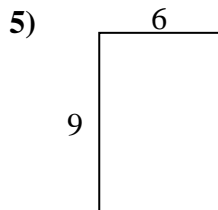
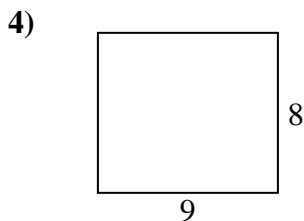
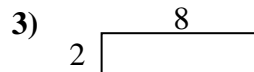
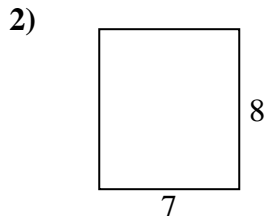
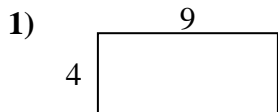




Encuentra el perímetro de cada figura. Cada figura está en pulgadas. No a escala.


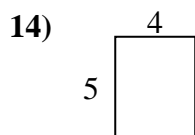
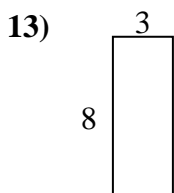
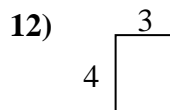
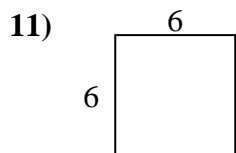
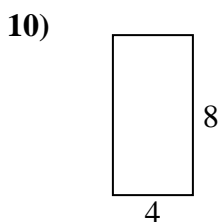
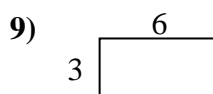
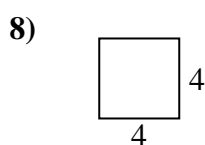
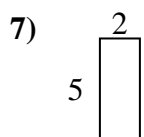
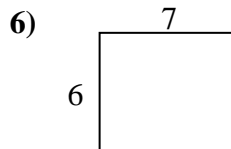
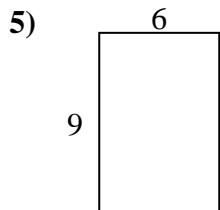
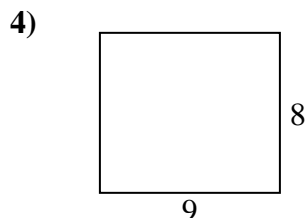
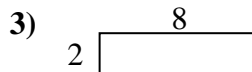
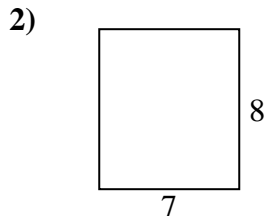
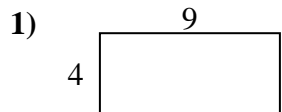
Respuestas



- 1. _____
- 2. _____
- 3. _____
- 4. _____
- 5. _____
- 6. _____
- 7. _____
- 8. _____
- 9. _____
- 10. _____
- 11. _____
- 12. _____
- 13. _____
- 14. _____
- 15. _____



Encuentra el perímetro de cada figura. Cada figura está en pulgadas. No a escala.



Respuestas

1. 26 cm 36 cm²
2. 30 cm 56 cm²
3. 20 cm 16 cm²
4. 34 cm 72 cm²
5. 30 cm 54 cm²
6. 26 cm 42 cm²
7. 14 cm 10 cm²
8. 16 cm 16 cm²
9. 18 cm 18 cm²
10. 24 cm 32 cm²
11. 24 cm 36 cm²
12. 14 cm 12 cm²
13. 22 cm 24 cm²
14. 18 cm 20 cm²
15. 24 cm 20 cm²