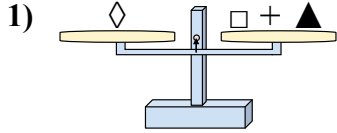
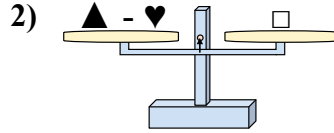




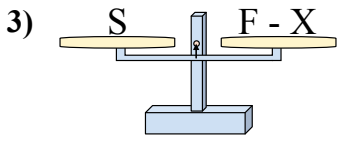
Las escalas mostradas están balanceadas. Determine que enunciado de número es correcto.



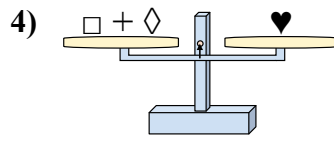
- A.  $\square = \blacktriangle + \diamond$
- B.  $\square = \diamond + \blacktriangle$
- C.  $\square = \diamond - \blacktriangle$
- D.  $\square = \blacktriangle - \diamond$



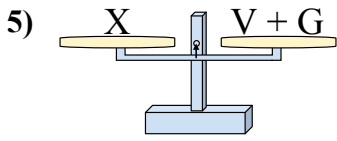
- A.  $\blacktriangle = \heartsuit - \square$
- B.  $\blacktriangle = \square - \heartsuit$
- C.  $\blacktriangle = \square + \heartsuit$
- D.  $\blacktriangle = \heartsuit + \square$



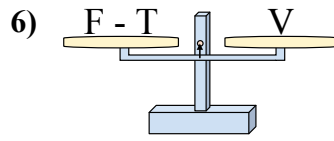
- A.  $F = S + S$
- B.  $F = S + X$
- C.  $F = S - X$
- D.  $F = X - S$



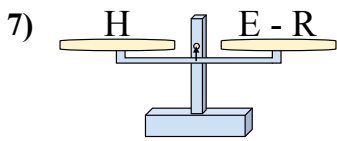
- A.  $\square = \heartsuit - \diamond$
- B.  $\square = \heartsuit + \diamond$
- C.  $\square = \diamond + \heartsuit$
- D.  $\square = \diamond - \heartsuit$



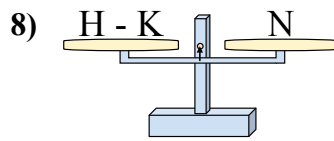
- A.  $V = X + G$
- B.  $V = G - X$
- C.  $V = G + X$
- D.  $V = X - G$



- A.  $F = T + V$
- B.  $F = V + V$
- C.  $F = V - T$
- D.  $F = T - V$



- A.  $E = H + H$
- B.  $E = R + H$
- C.  $E = R - H$
- D.  $E = H - R$



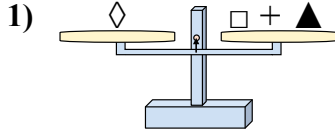
- A.  $H = N + N$
- B.  $H = N + K$
- C.  $H = K - N$
- D.  $H = N - K$

Respuestas

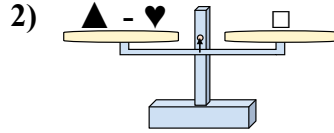
1. \_\_\_\_\_
2. \_\_\_\_\_
3. \_\_\_\_\_
4. \_\_\_\_\_
5. \_\_\_\_\_
6. \_\_\_\_\_
7. \_\_\_\_\_
8. \_\_\_\_\_



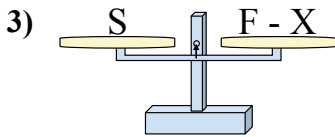
Las escalas mostradas estan balanceadas. Determine que enunciado de numero es correcto.



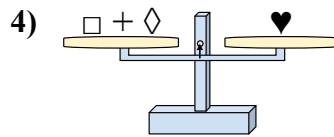
- A.  $\square = \blacktriangle + \diamond$
- B.  $\square = \diamond + \blacktriangle$
- C.  $\square = \diamond - \blacktriangle$
- D.  $\square = \blacktriangle - \diamond$



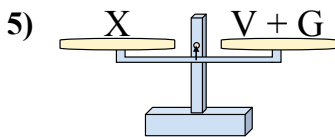
- A.  $\blacktriangle = \heartsuit - \square$
- B.  $\blacktriangle = \square - \heartsuit$
- C.  $\blacktriangle = \square + \square$
- D.  $\blacktriangle = \heartsuit + \square$



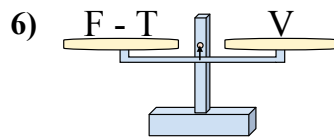
- A.  $F = S + S$
- B.  $F = S + X$
- C.  $F = S - X$
- D.  $F = X - S$



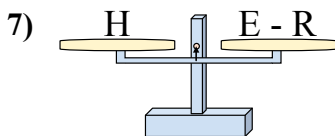
- A.  $\square = \heartsuit - \diamond$
- B.  $\square = \heartsuit + \diamond$
- C.  $\square = \diamond + \heartsuit$
- D.  $\square = \diamond - \heartsuit$



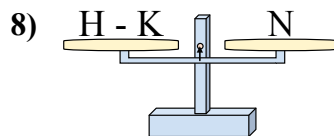
- A.  $V = X + G$
- B.  $V = G - X$
- C.  $V = G + X$
- D.  $V = X - G$



- A.  $F = T + V$
- B.  $F = V + V$
- C.  $F = V - T$
- D.  $F = T - V$



- A.  $E = H + H$
- B.  $E = R + H$
- C.  $E = R - H$
- D.  $E = H - R$



- A.  $H = N + N$
- B.  $H = N + K$
- C.  $H = K - N$
- D.  $H = N - K$

Respuestas

- 1.     **C**
- 2.     **D**
- 3.     **B**
- 4.     **A**
- 5.     **D**
- 6.     **A**
- 7.     **B**
- 8.     **B**