

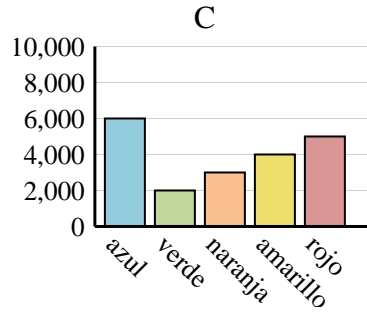
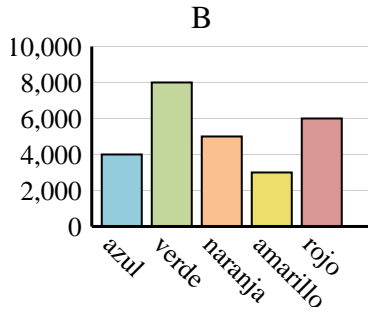
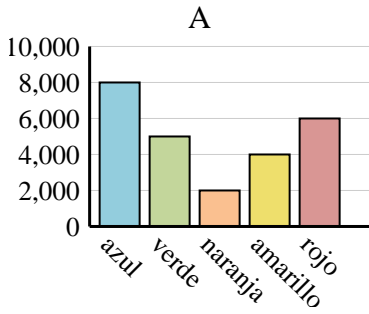


Determina cuál gráfica (A,B o C) representa mejor la información en la tabla.

Respuestas

1)

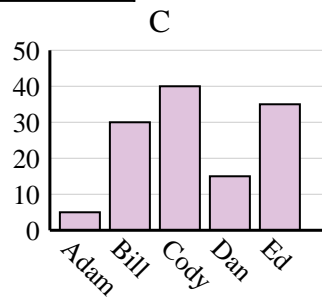
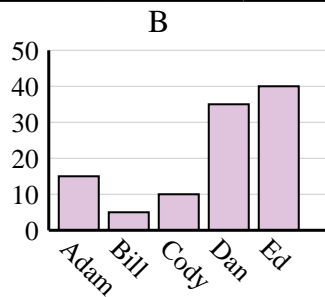
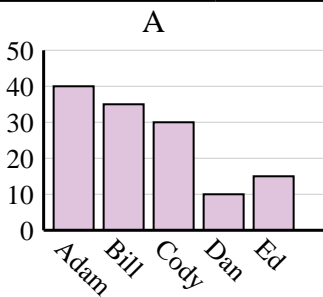
Color favorito	azul	verde	naranja	amarillo	rojo
Personas	4,000	8,000	5,000	3,000	6,000



1. _____
2. _____
3. _____
4. _____

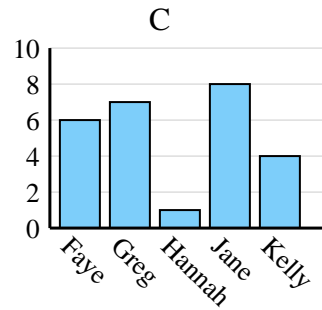
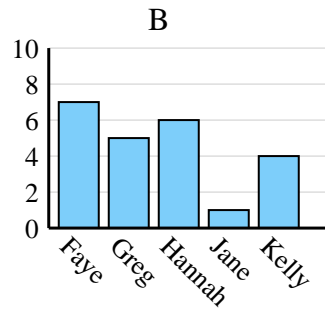
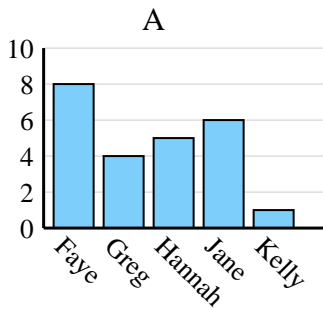
2)

Nombre	Adam	Bill	Cody	Dan	Ed
Puntos	5	30	40	15	35



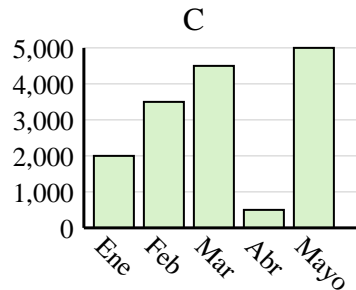
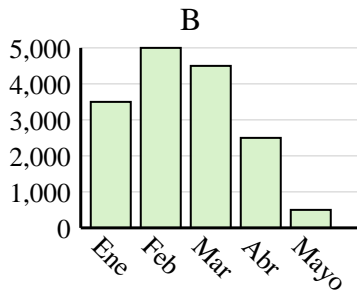
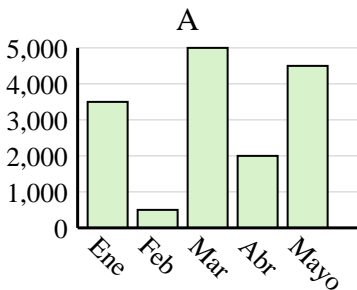
3)

Nombre	Faye	Greg	Hannah	Jane	Kelly
Estados en que ha vivido	7	5	6	1	4



4)

Ventas	Ene	Feb	Mar	Abr	Mayo
Mes	3,500	500	5,000	2,000	4,500

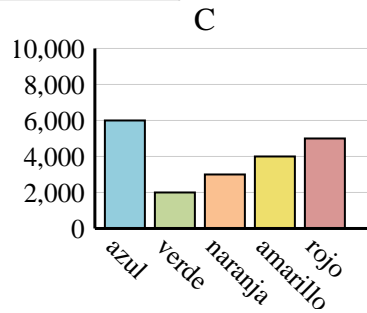
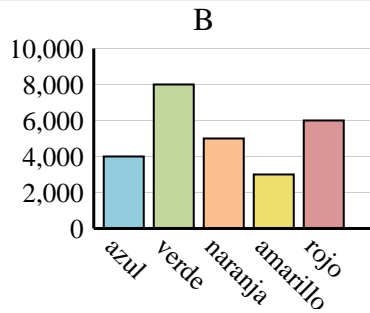
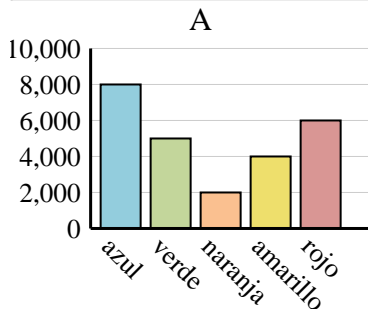




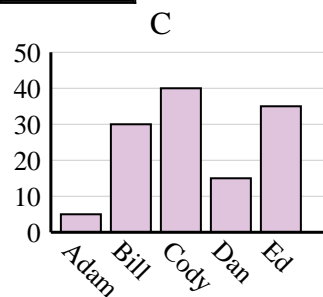
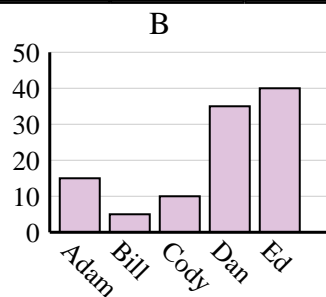
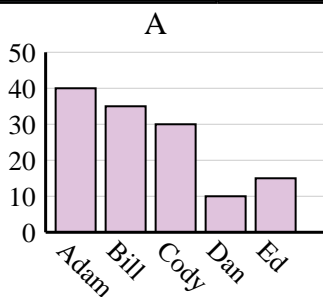
Determina cuál gráfica (A,B o C) representa mejor la información en la tabla.

Respuestas

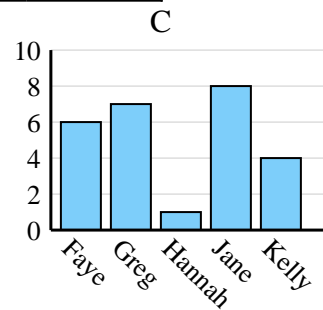
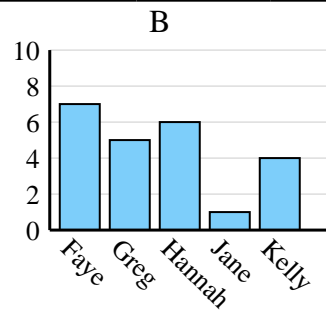
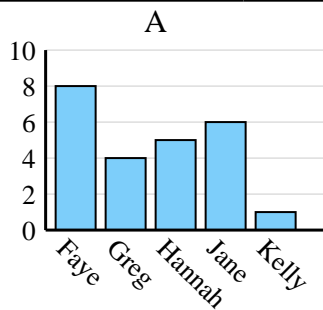
1)	Color favorito	azul	verde	naranja	amarillo	rojo
	Personas	4,000	8,000	5,000	3,000	6,000

1. **B**2. **C**3. **B**4. **A**

2)	Nombre	Adam	Bill	Cody	Dan	Ed
	Puntos	5	30	40	15	35



3)	Nombre	Faye	Greg	Hannah	Jane	Kelly
	Estados en que ha vivido	7	5	6	1	4



4)	Ventas	Ene	Feb	Mar	Abr	Mayo
	Mes	3,500	500	5,000	2,000	4,500

