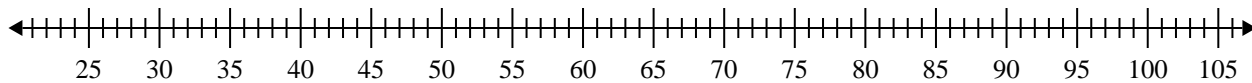


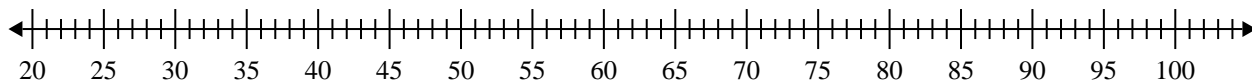


Crea un diagrama de caja del conjunto de números.

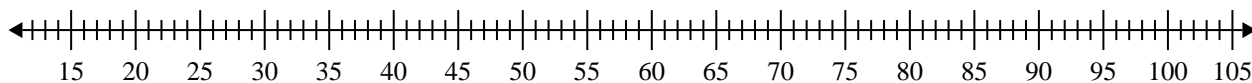
- 1) 63, 52, 29, 90, 92, 28, 90, 85, 60



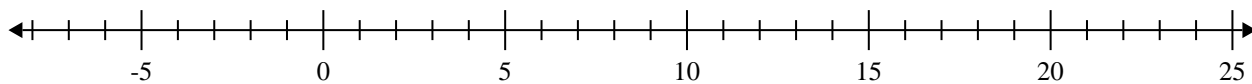
- 2) 25, 28, 63, 61, 50, 56, 82, 90, 59, 42, 76, 69, 32, 49



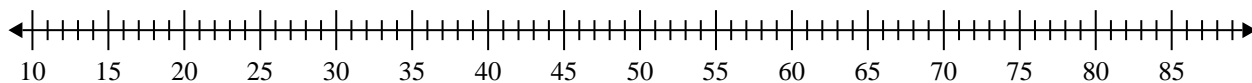
- 3) 29, 54, 66, 35, 31, 39, 22, 62, 97



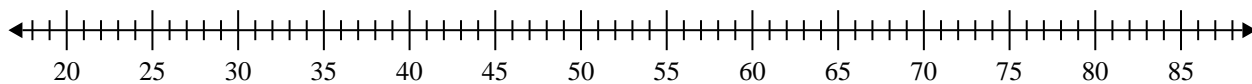
- 4) 8, 10, 6, 16, 5, 5, 15, 12, 17



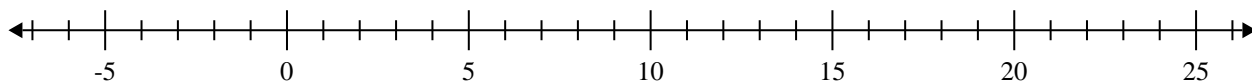
- 5) 32, 24, 46, 74, 61, 78, 54, 75, 43, 61



- 6) 41, 34, 43, 55, 32, 56, 65, 74, 78, 27



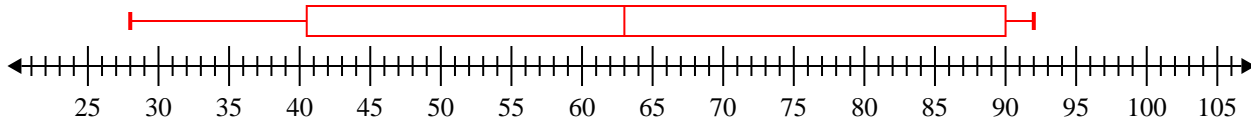
- 7) 16, 18, 13, 15, 19, 12, 15, 18, 5



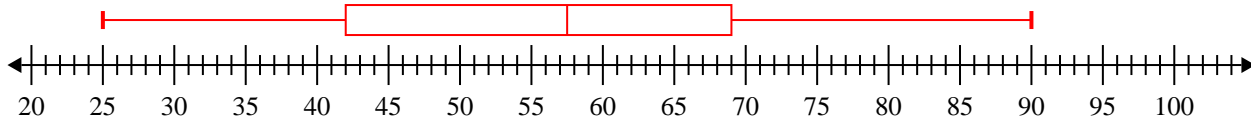


Crea un diagrama de caja del conjunto de números.

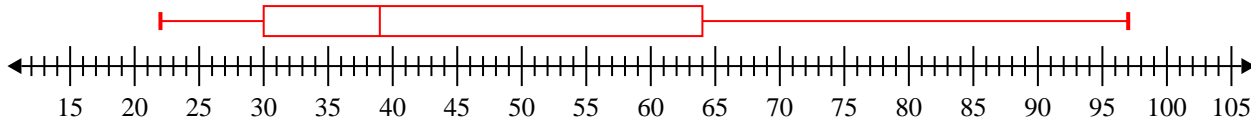
1) 63, 52, 29, 90, 92, 28, 90, 85, 60 **Min=28 Max=92 q1=40.5 Q2=63 q3=90**



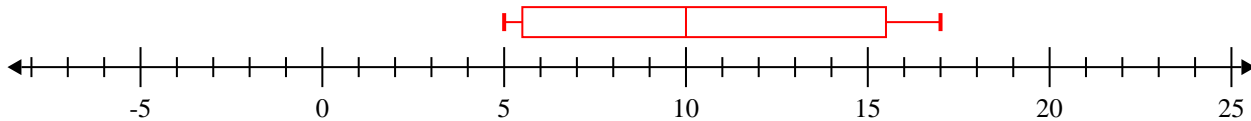
2) 25, 28, 63, 61, 50, 56, 82, 90, 59, 42, 76, 69, 32, 49 **Min=25 Max=90 q1=42 Q2=57.5 q3=69**



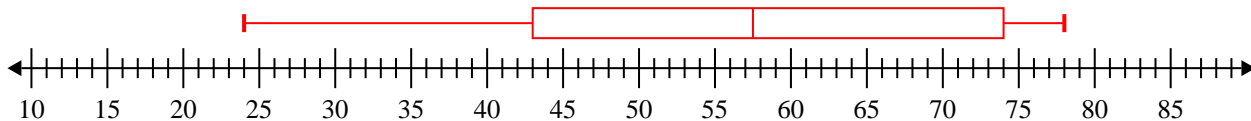
3) 29, 54, 66, 35, 31, 39, 22, 62, 97 **Min=22 Max=97 q1=30 Q2=39 q3=64**



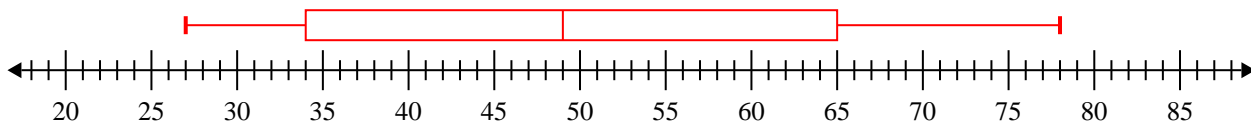
4) 8, 10, 6, 16, 5, 5, 15, 12, 17 **Min=5 Max=17 q1=5.5 Q2=10 q3=15.5**



5) 32, 24, 46, 74, 61, 78, 54, 75, 43, 61 **Min=24 Max=78 q1=43 Q2=57.5 q3=74**



6) 41, 34, 43, 55, 32, 56, 65, 74, 78, 27 **Min=27 Max=78 q1=34 Q2=49 q3=65**



7) 16, 18, 13, 15, 19, 12, 15, 18, 5 **Min=5 Max=19 q1=12.5 Q2=15 q3=18**

