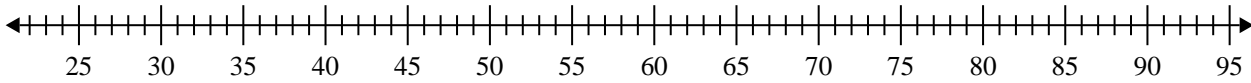


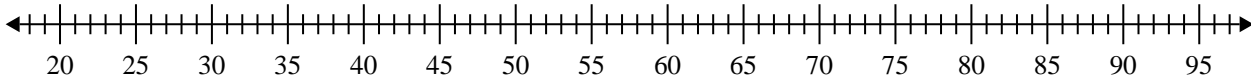


**Crea un diagrama de caja del conjunto de números.**

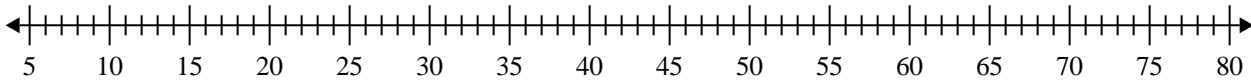
1) 36, 53, 81, 57, 37, 31, 74



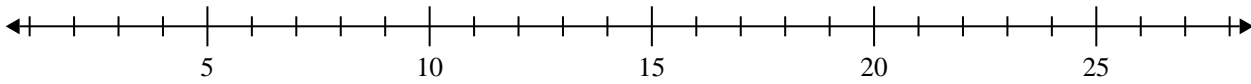
2) 36, 24, 56, 86, 34, 52, 55, 92, 66, 83



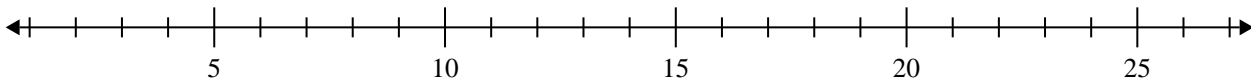
3) 20, 69, 23, 60, 29, 58, 50



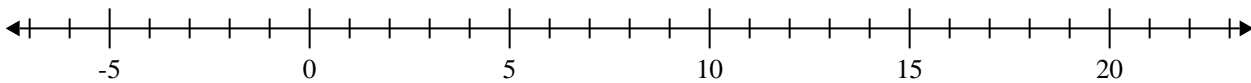
4) 10, 20, 13, 19, 14, 10



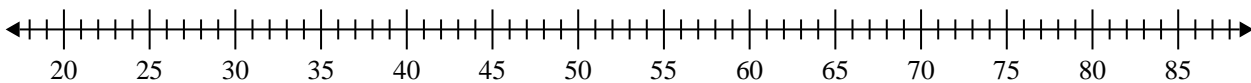
5) 16, 13, 14, 17, 8, 11, 16, 13



6) 6, 6, 9, 18, 17, 17, 11



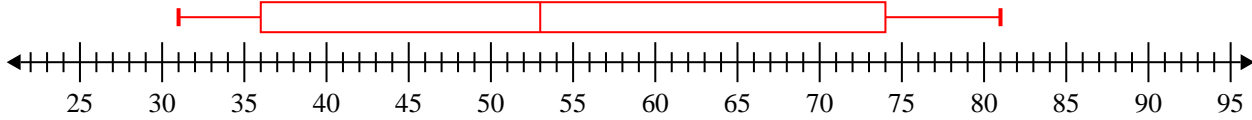
7) 26, 79, 49, 24, 64, 56, 28, 25, 41, 73



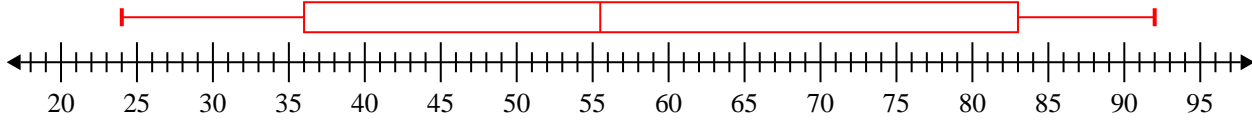


Crea un diagrama de caja del conjunto de números.

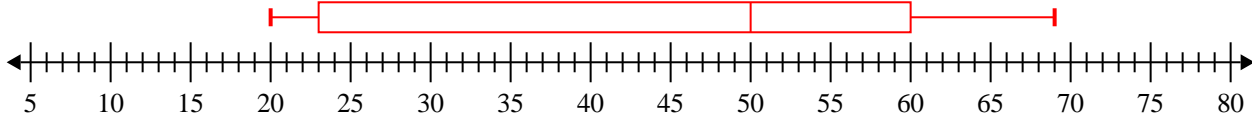
1) 36, 53, 81, 57, 37, 31, 74 **Min=31 Max=81 q1=36 Q2=53 q3=74**



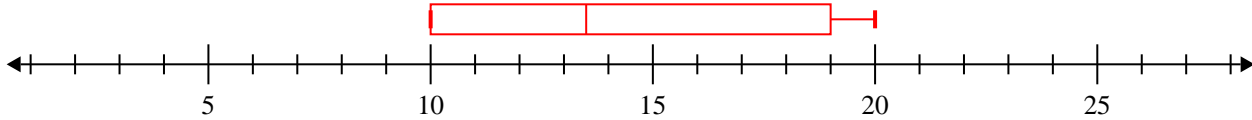
2) 36, 24, 56, 86, 34, 52, 55, 92, 66, 83 **Min=24 Max=92 q1=36 Q2=55.5 q3=83**



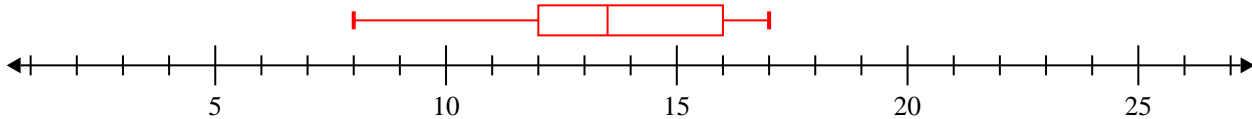
3) 20, 69, 23, 60, 29, 58, 50 **Min=20 Max=69 q1=23 Q2=50 q3=60**



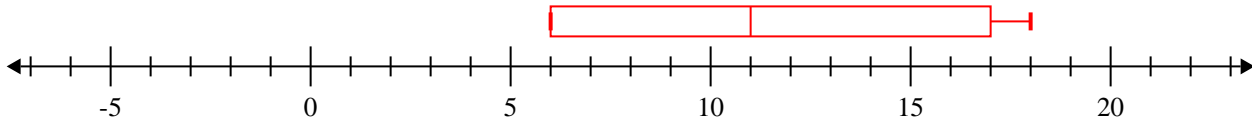
4) 10, 20, 13, 19, 14, 10 **Min=10 Max=20 q1=10 Q2=13.5 q3=19**



5) 16, 13, 14, 17, 8, 11, 16, 13 **Min=8 Max=17 q1=12 Q2=13.5 q3=16**



6) 6, 6, 9, 18, 17, 17, 11 **Min=6 Max=18 q1=6 Q2=11 q3=17**



7) 26, 79, 49, 24, 64, 56, 28, 25, 41, 73 **Min=24 Max=79 q1=26 Q2=45 q3=64**

