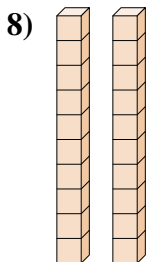
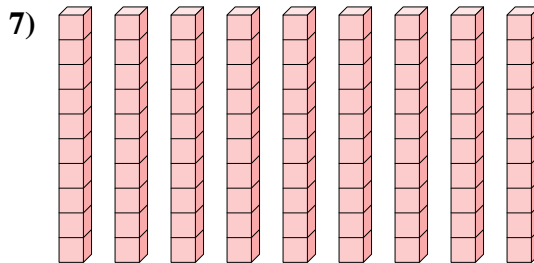
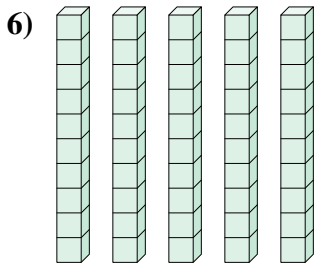
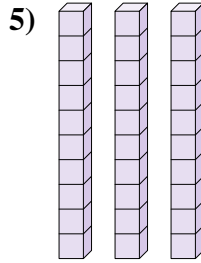
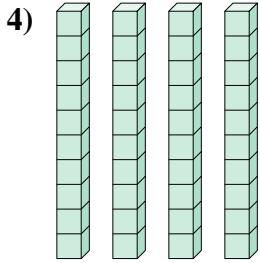
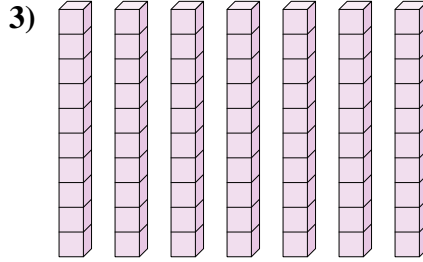

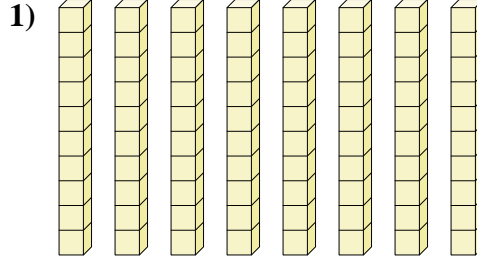
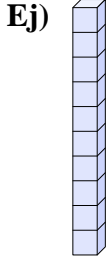




Determina la cantidad de grupos de diez. Luego encuentra el número total de bloques más pequeños.



Respuestas

Ej. 1 10

1. _____

2. _____

3. _____

4. _____

5. _____

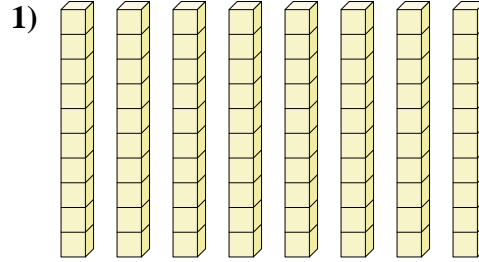
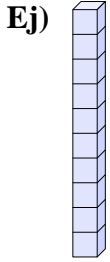
6. _____

7. _____

8. _____



Determina la cantidad de grupos de diez. Luego encuentra el número total de bloques más pequeños.



Respuestas

Ej. 1 10

1. 8 80

2. 6 60

3. 7 70

4. 4 40

5. 3 30

6. 5 50

7. 9 90

8. 2 20

