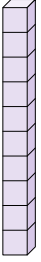


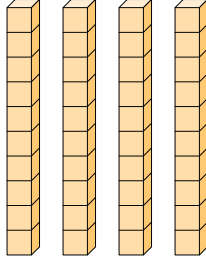


Determina la cantidad de grupos de diez. Luego encuentra el número total de bloques más pequeños.

Ej)



1)



Respuestas

Ej. 1 10

1. _____

2. _____

3. _____

4. _____

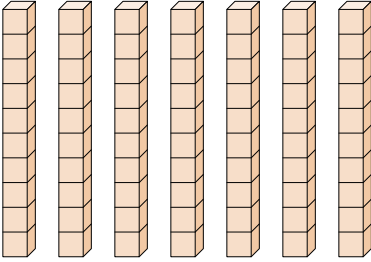
5. _____

6. _____


7. _____

8. _____

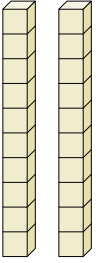
2)



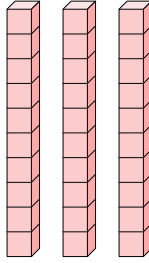
3)



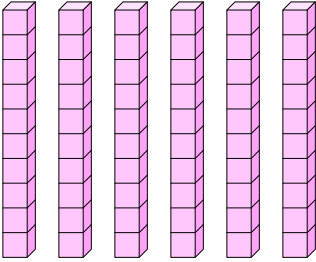
4)




5)



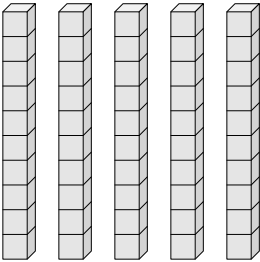
6)



7)

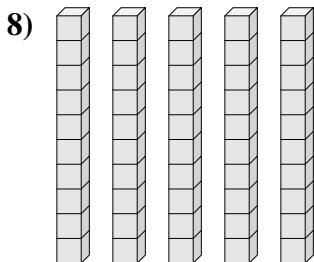
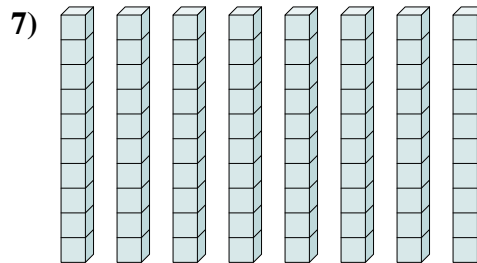
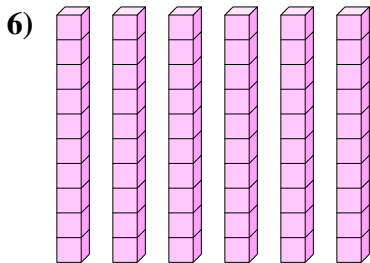
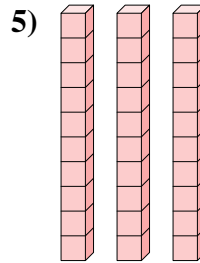
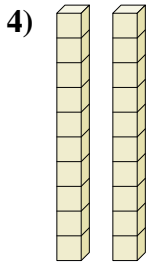
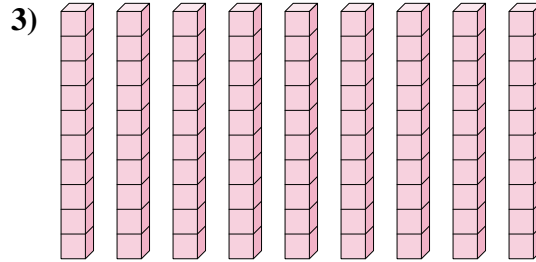
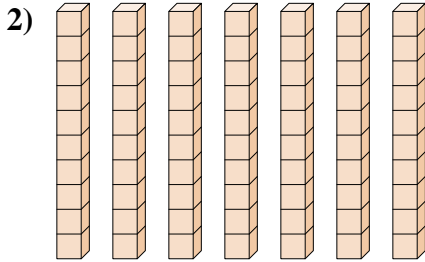
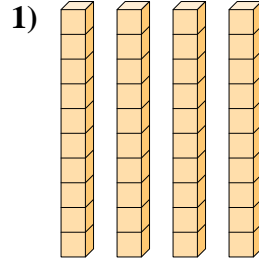
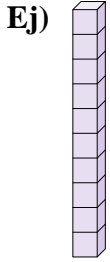


8)





Determina la cantidad de grupos de diez. Luego encuentra el número total de bloques más pequeños.



Respuestas

Ej. 1 10

1. 4 40

2. 7 70

3. 9 90

4. 2 20

5. 3 30

6. 6 60

7. 8 80

8. 5 50