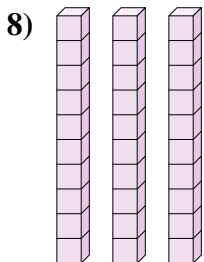
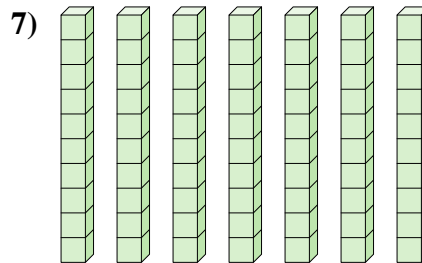
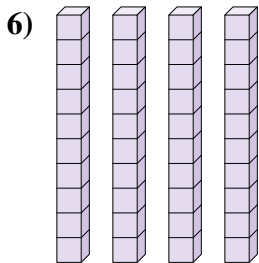
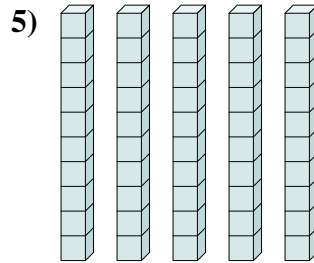
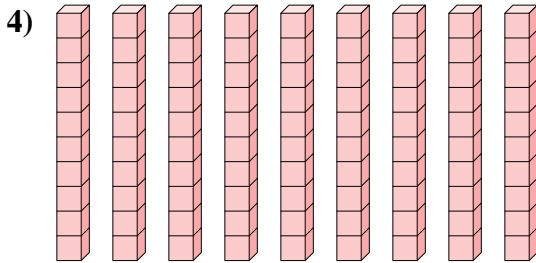
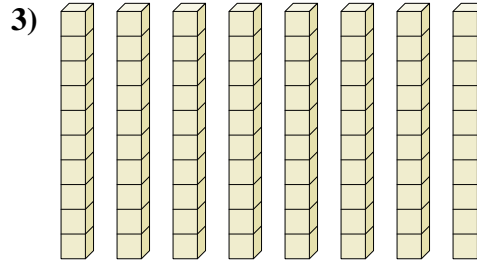
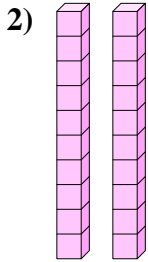
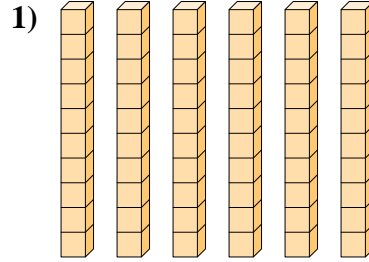
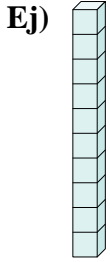




Determina la cantidad de grupos de diez. Luego encuentra el número total de bloques más pequeños.



Respuestas

Ej. 1 10

1. _____

2. _____

3. _____

4. _____

5. _____

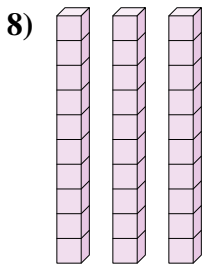
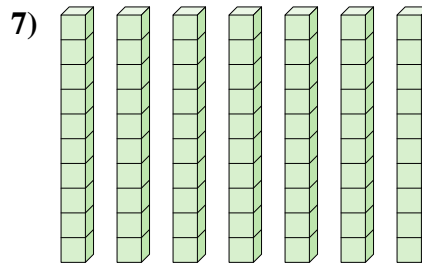
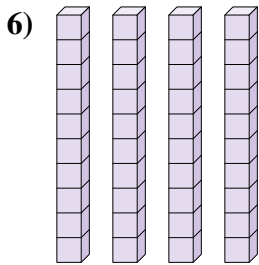
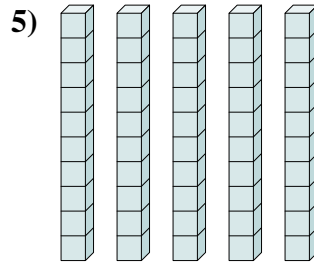
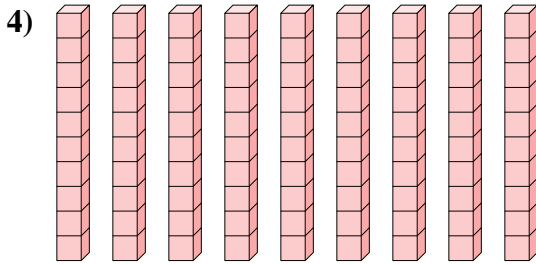
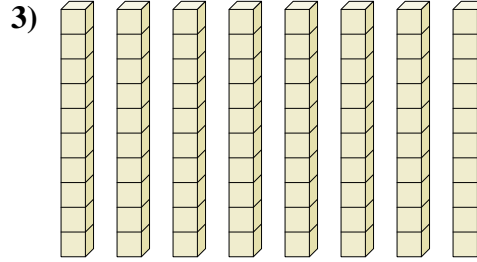
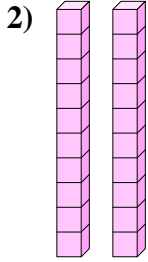
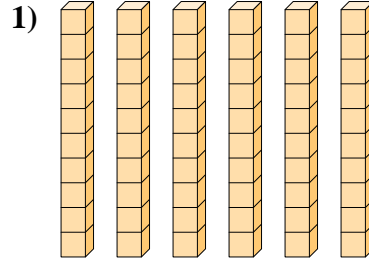
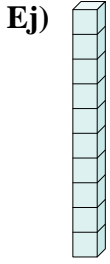
6. _____

7. _____

8. _____



Determina la cantidad de grupos de diez. Luego encuentra el número total de bloques más pequeños.



Respuestas

Ej.	<u>1</u>	<u>10</u>
1.	<u>6</u>	<u>60</u>
2.	<u>2</u>	<u>20</u>
3.	<u>8</u>	<u>80</u>
4.	<u>9</u>	<u>90</u>
5.	<u>5</u>	<u>50</u>
6.	<u>4</u>	<u>40</u>
7.	<u>7</u>	<u>70</u>
8.	<u>3</u>	<u>30</u>