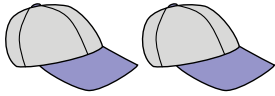




Cuenta la cantidad de cada de los diferentes objetivos.

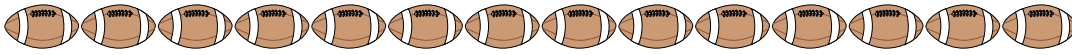
1)




2)



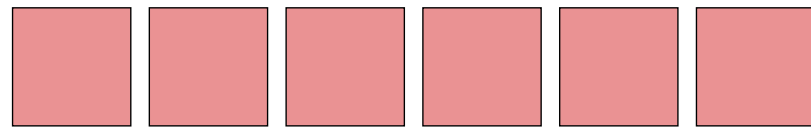
3)



4)



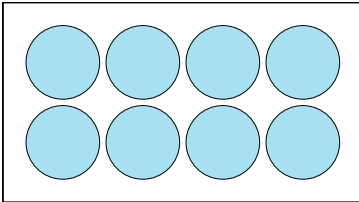
5)




6)



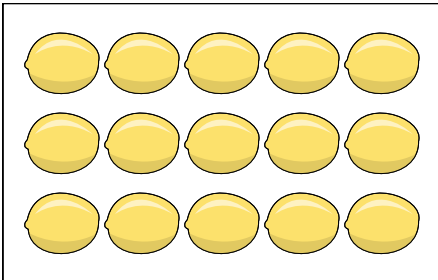
7)




8)



9)



10)



**Respuestas**

1. \_\_\_\_\_

2. \_\_\_\_\_

3. \_\_\_\_\_

4. \_\_\_\_\_

5. \_\_\_\_\_

6. \_\_\_\_\_

7. \_\_\_\_\_

8. \_\_\_\_\_

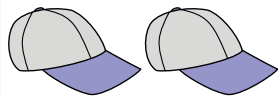
9. \_\_\_\_\_

10. \_\_\_\_\_




Cuenta la cantidad de cada de los diferentes objetivos.

1)



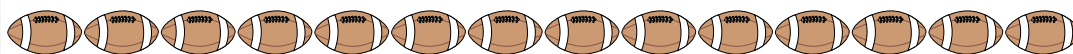
1. 2

2)



2. 5

3)



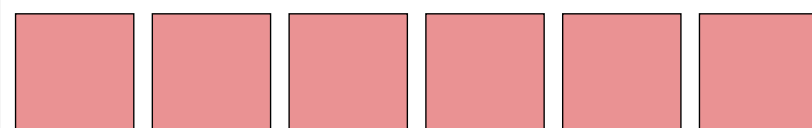
3. 14

4)



4. 13

5)



5. 6

6)



6. 17

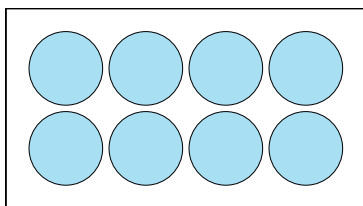
7. 8

8. 6


9. 15

10. 10

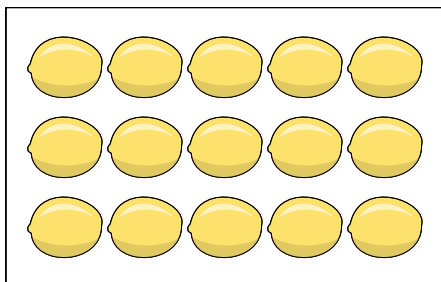
7)



8)



9)



10)

