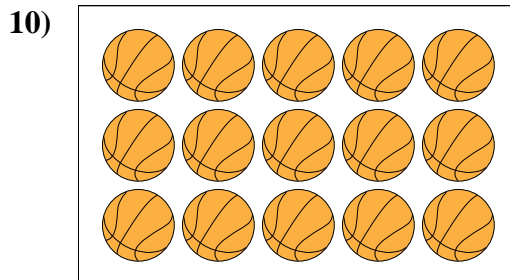

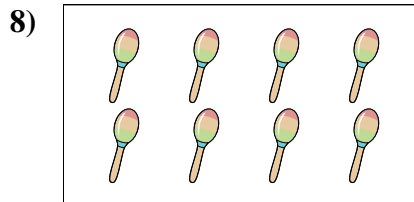

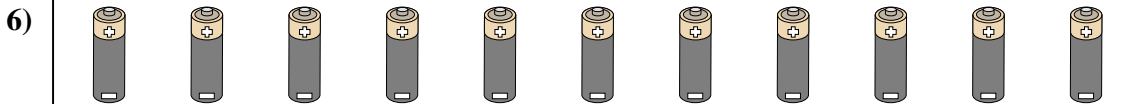

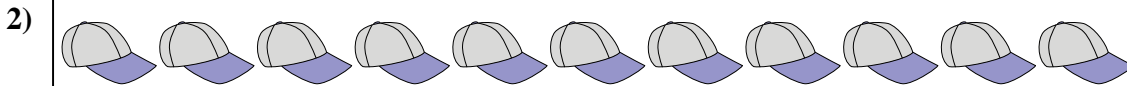
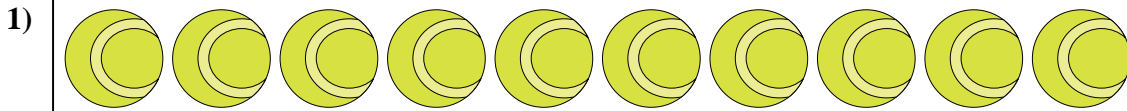




Cuenta la cantidad de cada de los diferentes objetivos.



Respuestas

- 1. \_\_\_\_\_
- 2. \_\_\_\_\_
- 3. \_\_\_\_\_
- 4. \_\_\_\_\_
- 5. \_\_\_\_\_
- 6. \_\_\_\_\_
- 7. \_\_\_\_\_
- 8. \_\_\_\_\_
- 9. \_\_\_\_\_
- 10. \_\_\_\_\_



Cuenta la cantidad de cada de los diferentes objetivos.

1)

2)

3)

4)

5)

6)

**Respuestas**

- 1. 10
- 2. 11
- 3. 19
- 4. 14
- 5. 18
- 6. 11
- 7. 8
- 8. 8
- 9. 15
- 10. 15

7)

8)

9)

10)