





Usa el modelo visual para resolver cada problema.


1)  $0.7 \times 0.6 =$




2)  $0.2 \times 0.1 =$




3)  $0.3 \times 0.6 =$




4)  $0.2 \times 0.8 =$




5)  $0.8 \times 0.4 =$




6)  $0.2 \times 0.3 =$




7)  $0.3 \times 0.8 =$




8)  $0.7 \times 0.8 =$




9)  $0.9 \times 0.4 =$




10)  $0.2 \times 0.6 =$




11)  $0.1 \times 0.7 =$



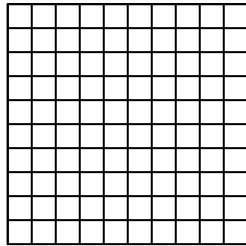
12)  $0.3 \times 0.3 =$




13)  $0.8 \times 0.4 =$



14)  $0.3 \times 0.8 =$



15)  $0.4 \times 0.9 =$



**Respuestas**

1. \_\_\_\_\_

2. \_\_\_\_\_

3. \_\_\_\_\_

4. \_\_\_\_\_

5. \_\_\_\_\_

6. \_\_\_\_\_

7. \_\_\_\_\_

8. \_\_\_\_\_

9. \_\_\_\_\_

10. \_\_\_\_\_

11. \_\_\_\_\_

12. \_\_\_\_\_

13. \_\_\_\_\_

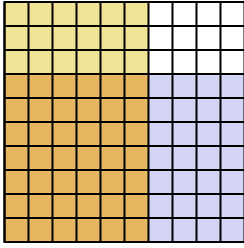
14. \_\_\_\_\_

15. \_\_\_\_\_

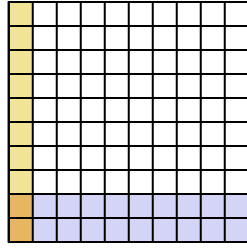


Usa el modelo visual para resolver cada problema.

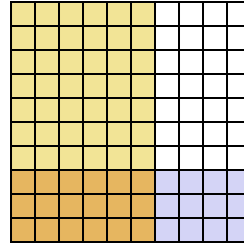
1)  $0.7 \times 0.6 =$



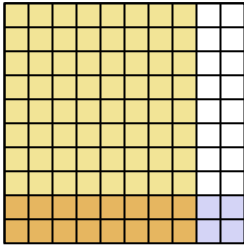
2)  $0.2 \times 0.1 =$



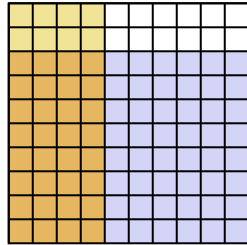
3)  $0.3 \times 0.6 =$



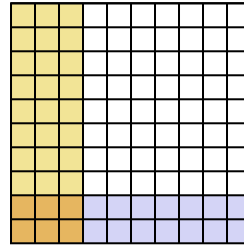
4)  $0.2 \times 0.8 =$



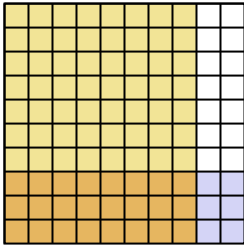
5)  $0.8 \times 0.4 =$



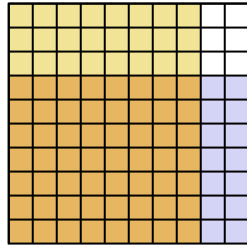
6)  $0.2 \times 0.3 =$



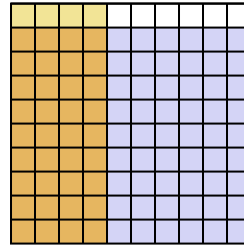
7)  $0.3 \times 0.8 =$



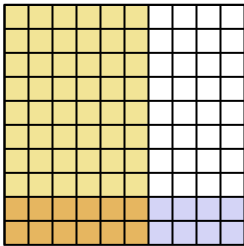
8)  $0.7 \times 0.8 =$



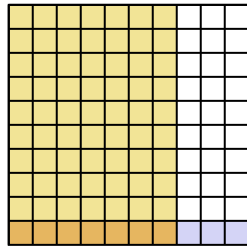
9)  $0.9 \times 0.4 =$



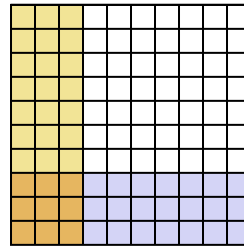
10)  $0.2 \times 0.6 =$



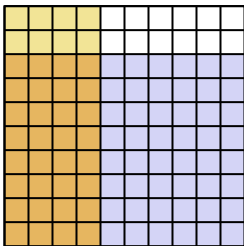
11)  $0.1 \times 0.7 =$



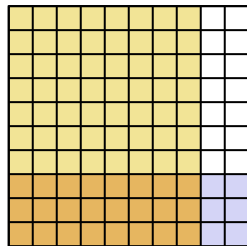
12)  $0.3 \times 0.3 =$



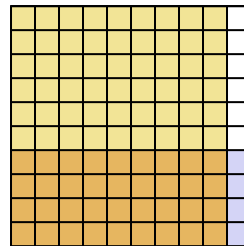
13)  $0.8 \times 0.4 =$



14)  $0.3 \times 0.8 =$



15)  $0.4 \times 0.9 =$



**Respuestas**

1.  $\frac{42}{100} = 0.42$

2.  $\frac{2}{100} = 0.02$

3.  $\frac{18}{100} = 0.18$

4.  $\frac{16}{100} = 0.16$

5.  $\frac{32}{100} = 0.32$

6.  $\frac{6}{100} = 0.06$

7.  $\frac{24}{100} = 0.24$

8.  $\frac{56}{100} = 0.56$

9.  $\frac{36}{100} = 0.36$

10.  $\frac{12}{100} = 0.12$

11.  $\frac{7}{100} = 0.07$

12.  $\frac{9}{100} = 0.09$

13.  $\frac{32}{100} = 0.32$

14.  $\frac{24}{100} = 0.24$

15.  $\frac{36}{100} = 0.36$