





Usa el modelo visual para resolver cada problema.


1) $0.8 \times 0.8 =$




2) $0.6 \times 0.2 =$




3) $0.6 \times 0.6 =$




4) $0.1 \times 0.9 =$




5) $0.8 \times 0.7 =$




6) $0.8 \times 0.9 =$




7) $0.4 \times 0.9 =$




8) $0.8 \times 0.5 =$



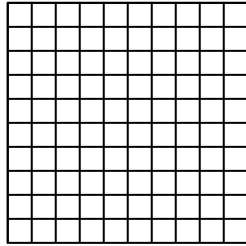
9) $0.7 \times 0.8 =$




10) $0.3 \times 0.8 =$




11) $0.9 \times 0.9 =$



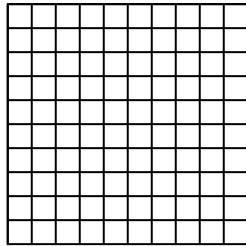
12) $0.7 \times 0.5 =$




13) $0.5 \times 0.8 =$



14) $0.6 \times 0.6 =$



15) $0.2 \times 0.3 =$



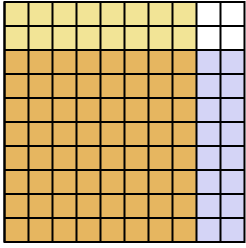
Respuestas

1. _____
2. _____
3. _____
4. _____
5. _____
6. _____
7. _____
8. _____
9. _____
10. _____
11. _____
12. _____
13. _____
14. _____
15. _____

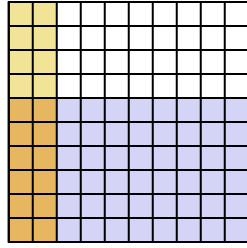


Usa el modelo visual para resolver cada problema.

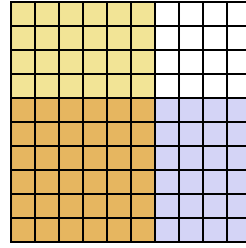
1) $0.8 \times 0.8 =$



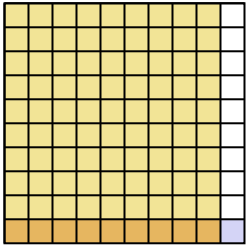
2) $0.6 \times 0.2 =$



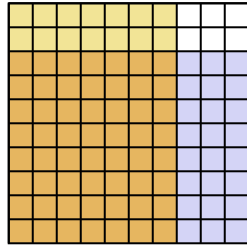
3) $0.6 \times 0.6 =$



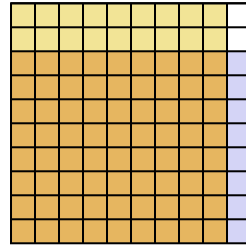
4) $0.1 \times 0.9 =$



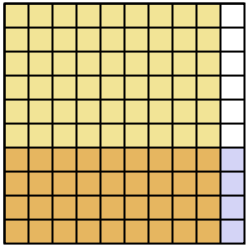
5) $0.8 \times 0.7 =$



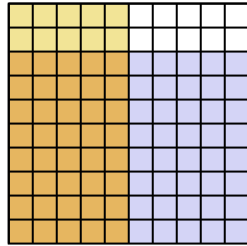
6) $0.8 \times 0.9 =$



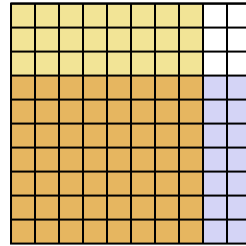
7) $0.4 \times 0.9 =$



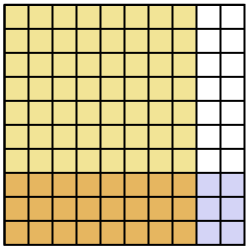
8) $0.8 \times 0.5 =$



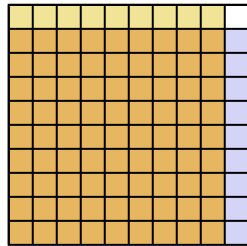
9) $0.7 \times 0.8 =$



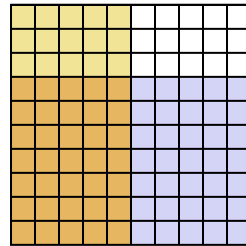
10) $0.3 \times 0.8 =$



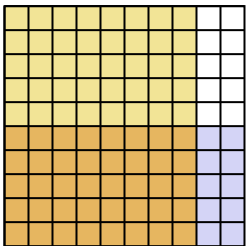
11) $0.9 \times 0.9 =$



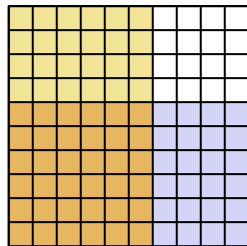
12) $0.7 \times 0.5 =$



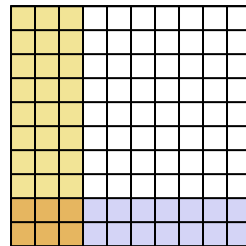
13) $0.5 \times 0.8 =$



14) $0.6 \times 0.6 =$



15) $0.2 \times 0.3 =$



Respuestas

1. $\frac{64}{100} = 0.64$

2. $\frac{12}{100} = 0.12$

3. $\frac{36}{100} = 0.36$

4. $\frac{9}{100} = 0.09$

5. $\frac{56}{100} = 0.56$

6. $\frac{72}{100} = 0.72$

7. $\frac{36}{100} = 0.36$

8. $\frac{40}{100} = 0.4$

9. $\frac{56}{100} = 0.56$

10. $\frac{24}{100} = 0.24$

11. $\frac{81}{100} = 0.81$

12. $\frac{35}{100} = 0.35$

13. $\frac{40}{100} = 0.4$

14. $\frac{36}{100} = 0.36$

15. $\frac{6}{100} = 0.06$