




Usa el modelo visual para resolver cada problema.


1) $0.5 \times 0.6 =$




2) $0.6 \times 0.7 =$




3) $0.5 \times 0.2 =$




4) $0.4 \times 0.6 =$




5) $0.3 \times 0.5 =$




6) $0.1 \times 0.1 =$




7) $0.1 \times 0.6 =$




8) $0.5 \times 0.7 =$



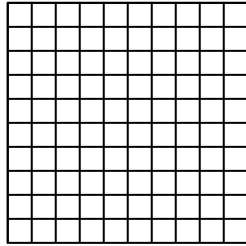
9) $0.1 \times 0.7 =$




10) $0.8 \times 0.5 =$




11) $0.4 \times 0.6 =$



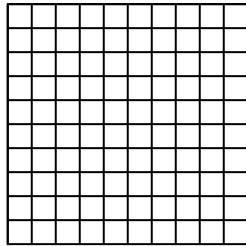
12) $0.7 \times 0.3 =$




13) $0.6 \times 0.7 =$



14) $0.5 \times 0.9 =$



15) $0.5 \times 0.9 =$



Respuestas

1. _____

2. _____

3. _____

4. _____

5. _____

6. _____

7. _____

8. _____

9. _____

10. _____

11. _____

12. _____

13. _____

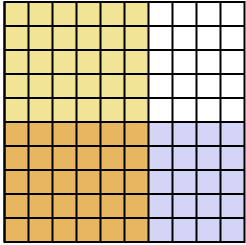
14. _____

15. _____

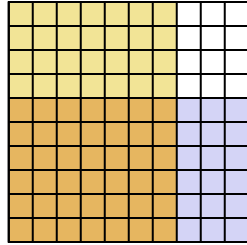


Usa el modelo visual para resolver cada problema.

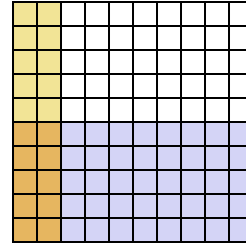
1) $0.5 \times 0.6 =$



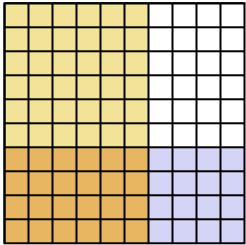
2) $0.6 \times 0.7 =$



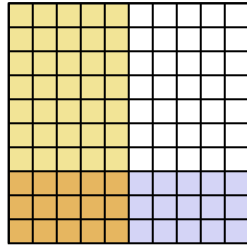
3) $0.5 \times 0.2 =$



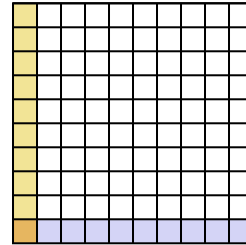
4) $0.4 \times 0.6 =$



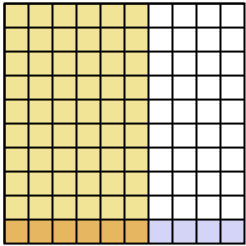
5) $0.3 \times 0.5 =$



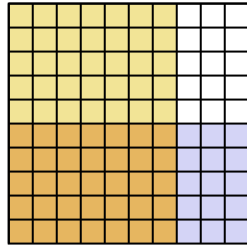
6) $0.1 \times 0.1 =$



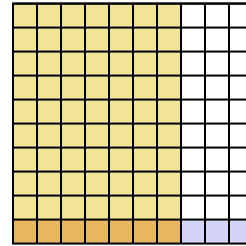
7) $0.1 \times 0.6 =$



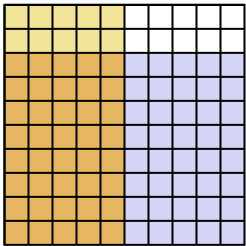
8) $0.5 \times 0.7 =$



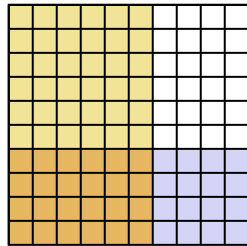
9) $0.1 \times 0.7 =$



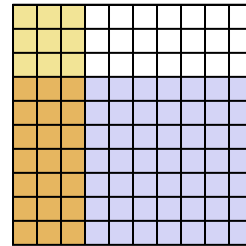
10) $0.8 \times 0.5 =$



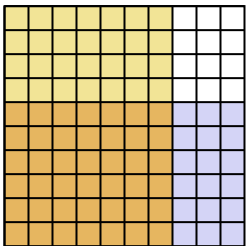
11) $0.4 \times 0.6 =$



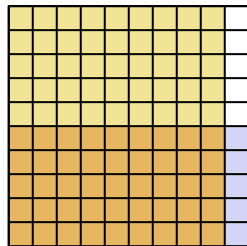
12) $0.7 \times 0.3 =$



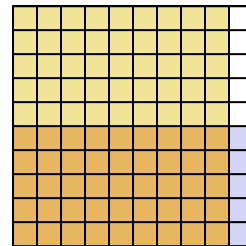
13) $0.6 \times 0.7 =$



14) $0.5 \times 0.9 =$



15) $0.5 \times 0.9 =$



Respuestas

1. $\frac{30}{100} = 0.3$

2. $\frac{42}{100} = 0.42$

3. $\frac{10}{100} = 0.1$

4. $\frac{24}{100} = 0.24$

5. $\frac{15}{100} = 0.15$

6. $\frac{1}{100} = 0.01$

7. $\frac{6}{100} = 0.06$

8. $\frac{35}{100} = 0.35$

9. $\frac{7}{100} = 0.07$

10. $\frac{40}{100} = 0.4$

11. $\frac{24}{100} = 0.24$

12. $\frac{21}{100} = 0.21$

13. $\frac{42}{100} = 0.42$

14. $\frac{45}{100} = 0.45$

15. $\frac{45}{100} = 0.45$