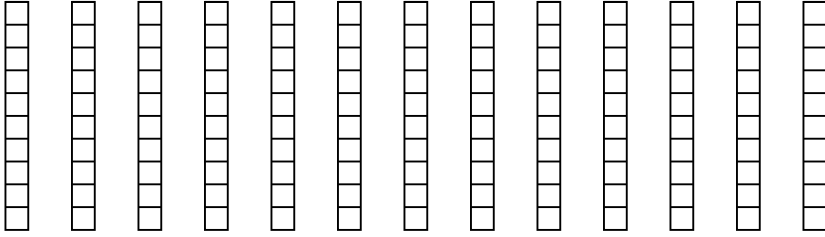


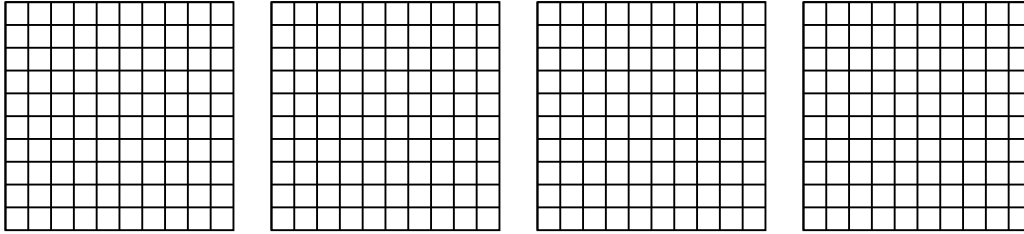


Usa el modelo visual para resolver cada problema.


1)  $13 \times 0.7 =$



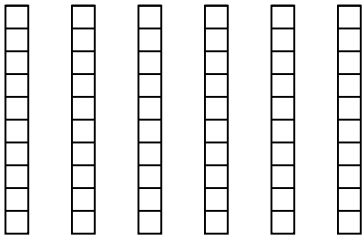
2)  $4 \times 0.40 =$



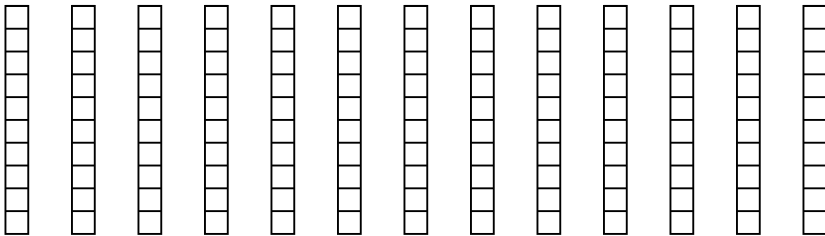
3)  $3 \times 0.68 =$




4)  $6 \times 0.1 =$



5)  $13 \times 0.2 =$



6)  $3 \times 0.18 =$



**Respuestas**

1. \_\_\_\_\_

2. \_\_\_\_\_

3. \_\_\_\_\_

4. \_\_\_\_\_

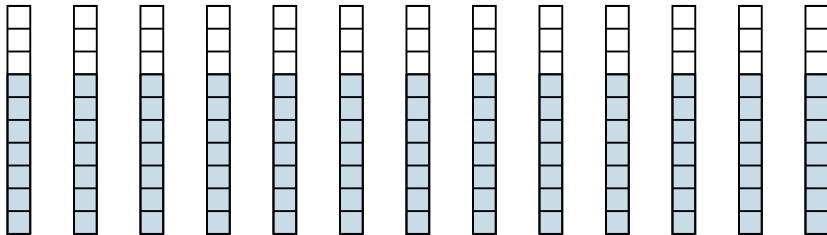
5. \_\_\_\_\_

6. \_\_\_\_\_

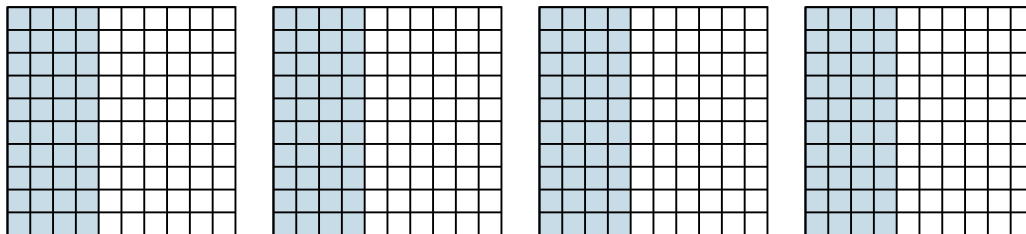


Usa el modelo visual para resolver cada problema.

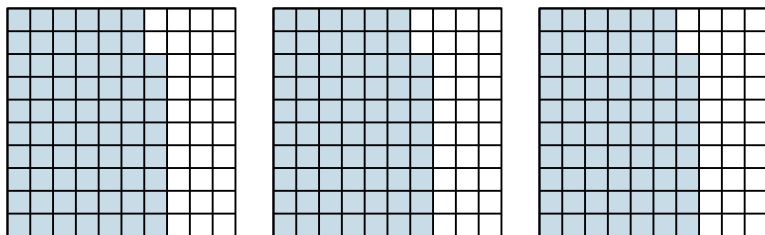
1)  $13 \times 0.7 =$



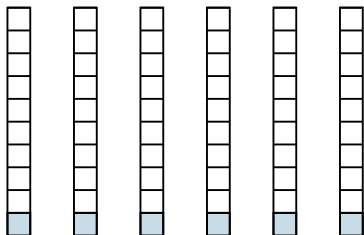
2)  $4 \times 0.40 =$



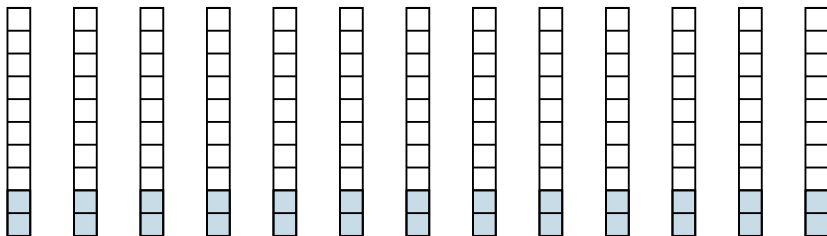
3)  $3 \times 0.68 =$




4)  $6 \times 0.1 =$



5)  $13 \times 0.2 =$



6)  $3 \times 0.18 =$



**Respuestas**

1.  $\frac{91}{10} = 9.1$

2.  $\frac{160}{100} = 1.6$

3.  $\frac{204}{100} = 2.04$

4.  $\frac{6}{10} = 0.6$

5.  $\frac{26}{10} = 2.6$

6.  $\frac{54}{100} = 0.54$