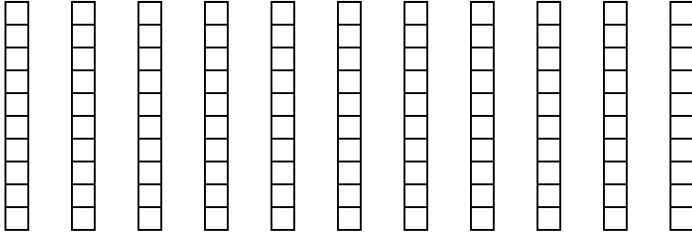


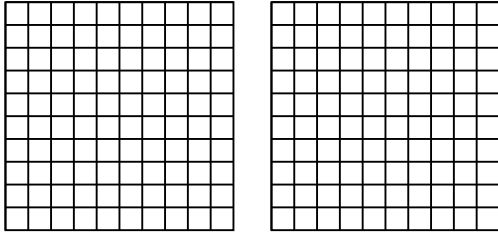


Usa el modelo visual para resolver cada problema.

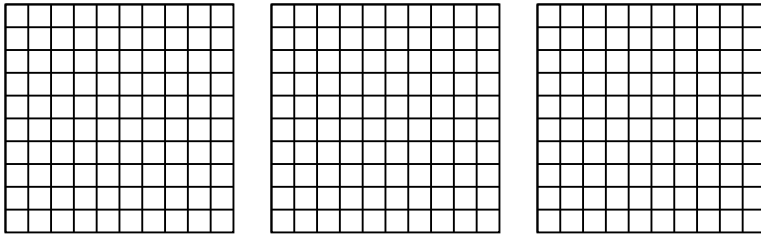
1) $11 \times 0.8 =$



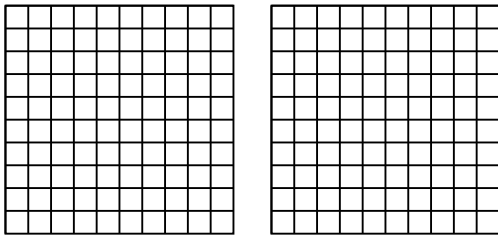
2) $2 \times 0.87 =$



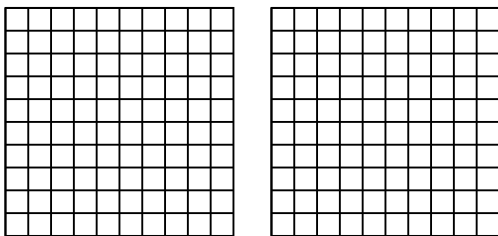
3) $3 \times 0.36 =$



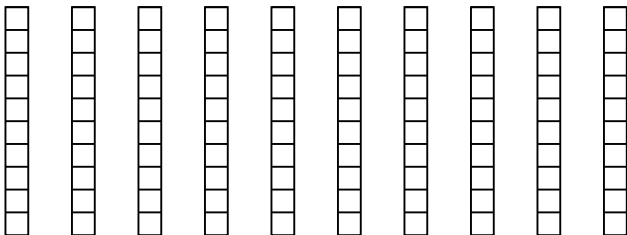
4) $2 \times 0.34 =$



5) $2 \times 0.21 =$



6) $10 \times 0.2 =$



Respuestas

1. _____

2. _____

3. _____

4. _____

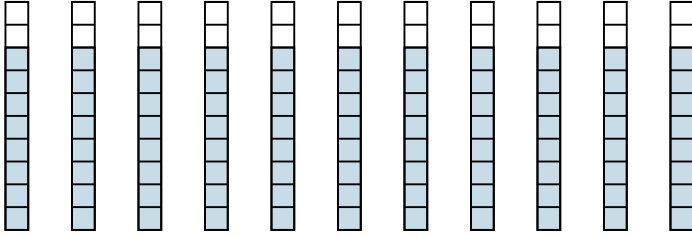
5. _____

6. _____

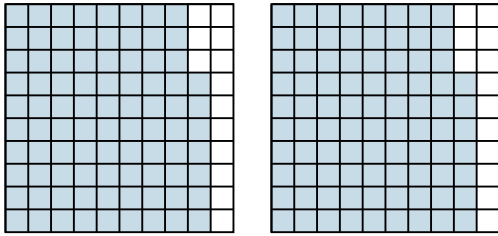


Usa el modelo visual para resolver cada problema.

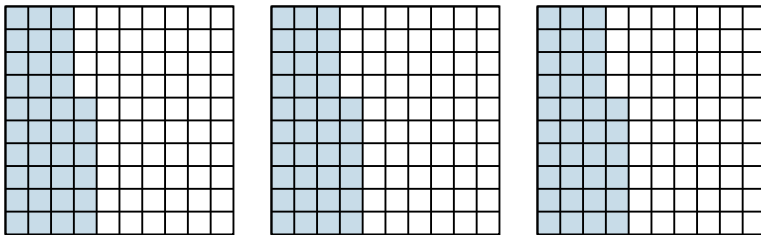
1) $11 \times 0.8 =$



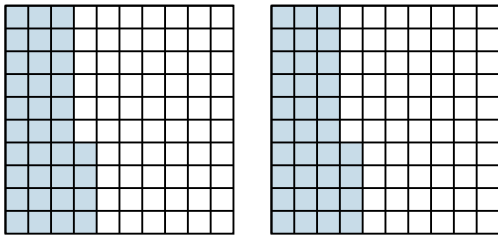
2) $2 \times 0.87 =$



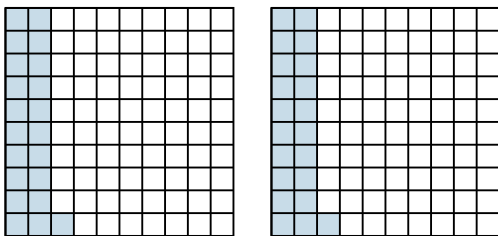
3) $3 \times 0.36 =$



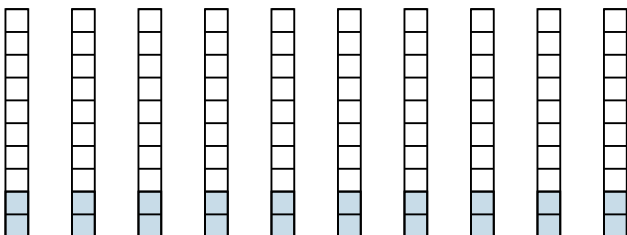
4) $2 \times 0.34 =$



5) $2 \times 0.21 =$



6) $10 \times 0.2 =$



Respuestas

1. $\frac{88}{10} = 8.8$

2. $\frac{174}{100} = 1.74$

3. $\frac{108}{100} = 1.08$

4. $\frac{68}{100} = 0.68$

5. $\frac{42}{100} = 0.42$

6. $\frac{20}{10} = 2$