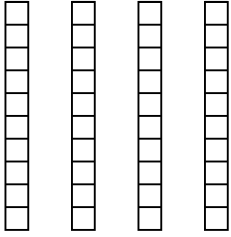


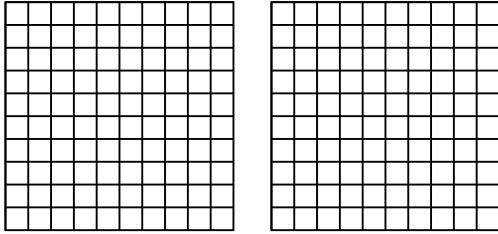


Usa el modelo visual para resolver cada problema.

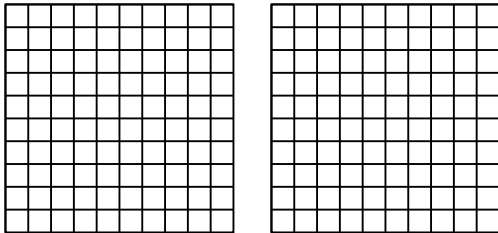
1) $4 \times 0.9 =$



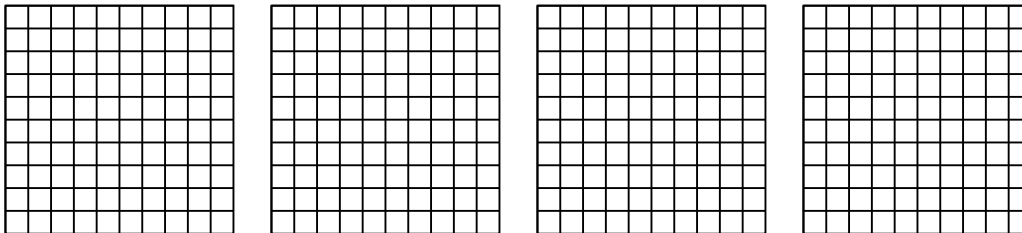
2) $2 \times 0.26 =$



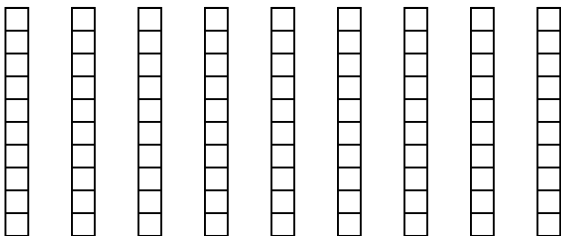
3) $2 \times 0.49 =$



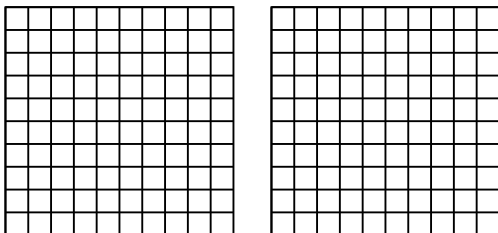
4) $4 \times 0.21 =$



5) $9 \times 0.8 =$



6) $2 \times 0.30 =$



Respuestas

1. _____

2. _____

3. _____

4. _____

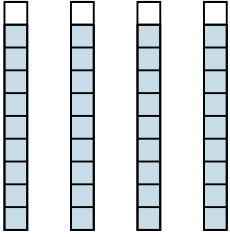
5. _____

6. _____

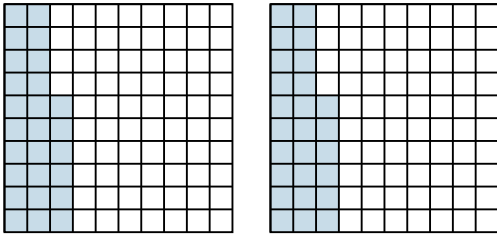


Usa el modelo visual para resolver cada problema.

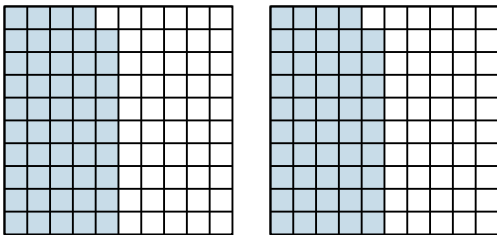
1) $4 \times 0.9 =$



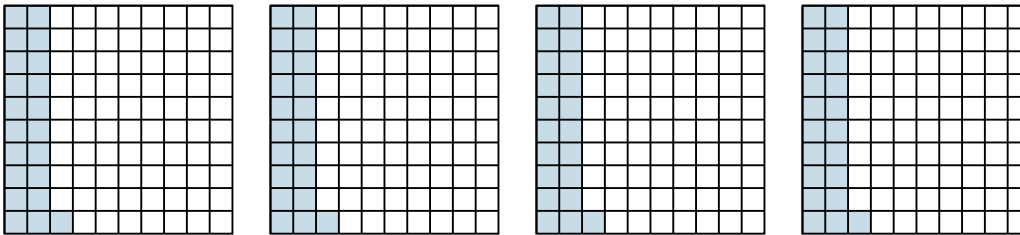
2) $2 \times 0.26 =$



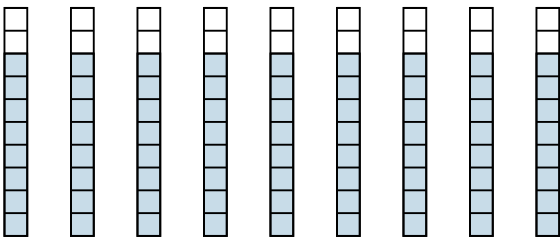
3) $2 \times 0.49 =$



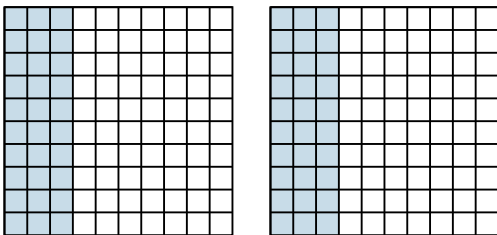
4) $4 \times 0.21 =$



5) $9 \times 0.8 =$



6) $2 \times 0.30 =$



Respuestas

1. $\frac{36}{10} = 3.6$

2. $\frac{52}{100} = 0.52$

3. $\frac{98}{100} = 0.98$

4. $\frac{84}{100} = 0.84$

5. $\frac{72}{10} = 7.2$

6. $\frac{60}{100} = 0.6$