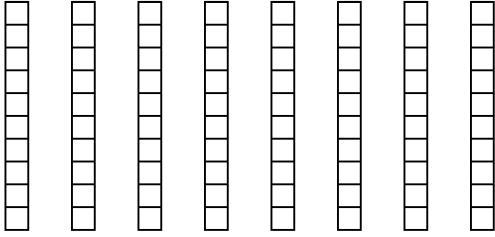


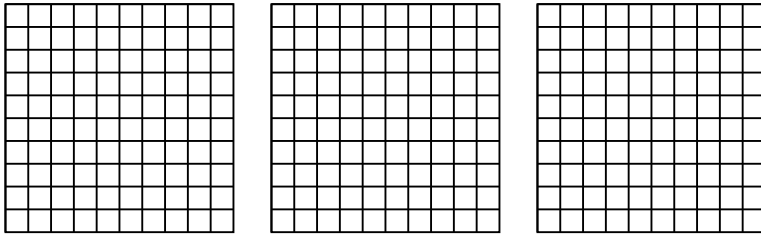


Usa el modelo visual para resolver cada problema.

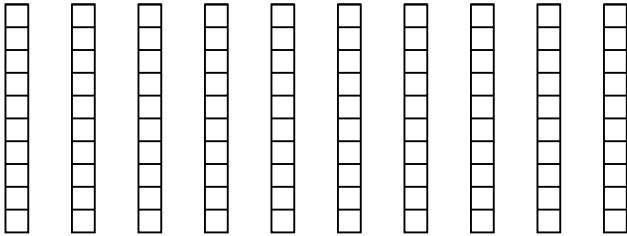
1) $8 \times 0.8 =$



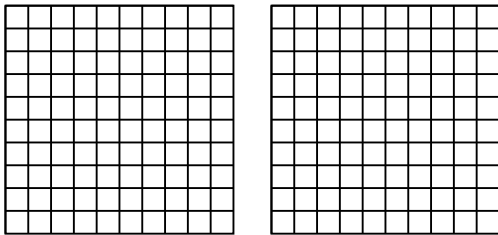
2) $3 \times 0.11 =$



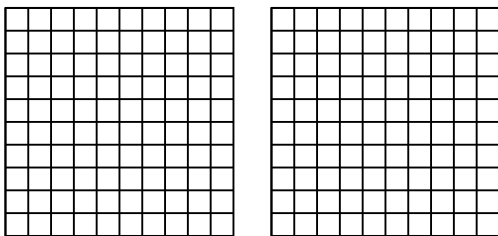
3) $10 \times 0.1 =$



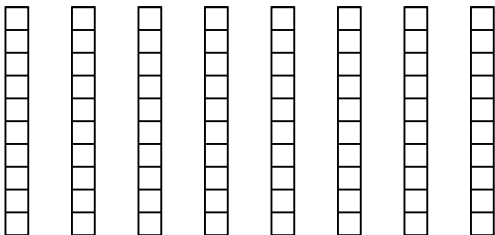
4) $2 \times 0.15 =$



5) $2 \times 0.22 =$



6) $8 \times 0.1 =$



Respuestas

1. _____

2. _____

3. _____

4. _____

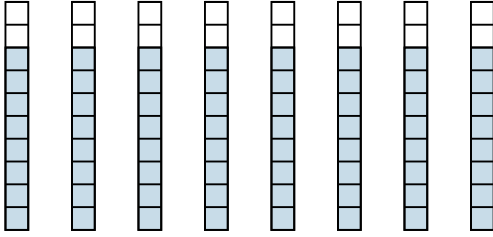
5. _____

6. _____

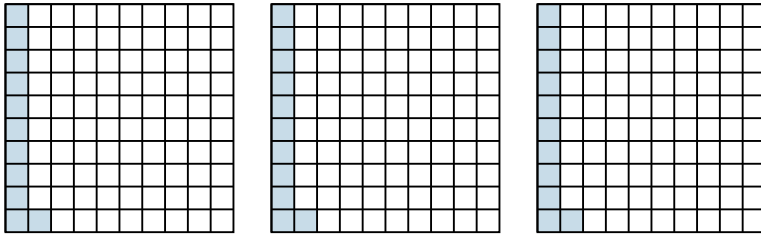


Usa el modelo visual para resolver cada problema.

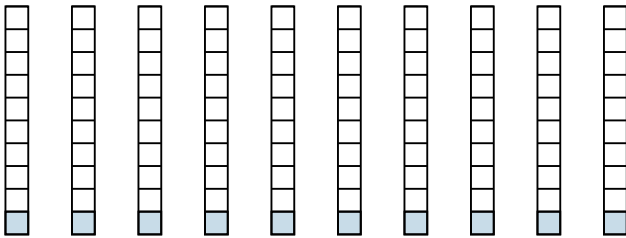
1) $8 \times 0.8 =$



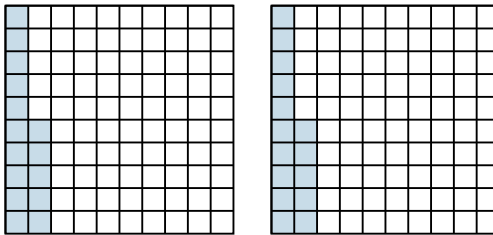
2) $3 \times 0.11 =$



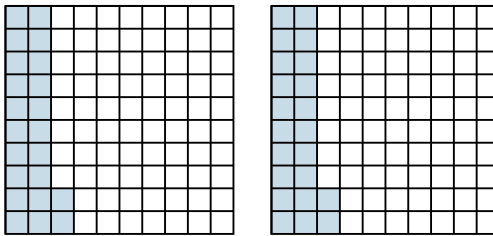
3) $10 \times 0.1 =$



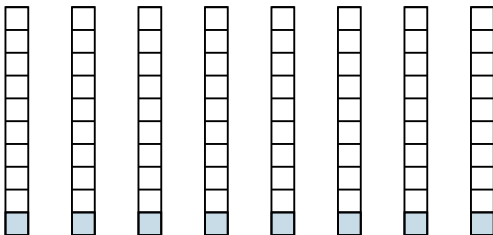
4) $2 \times 0.15 =$



5) $2 \times 0.22 =$



6) $8 \times 0.1 =$



Respuestas

1. $\frac{64}{10} = 6.4$

2. $\frac{33}{100} = 0.33$

3. $\frac{10}{10} = 1$

4. $\frac{30}{100} = 0.3$

5. $\frac{44}{100} = 0.44$

6. $\frac{8}{10} = 0.8$