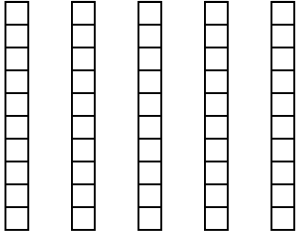


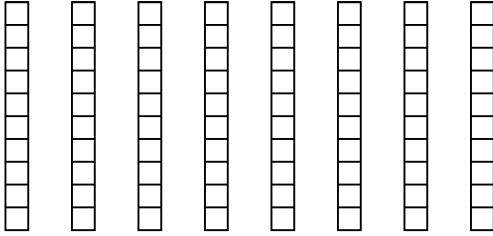


Usa el modelo visual para resolver cada problema.

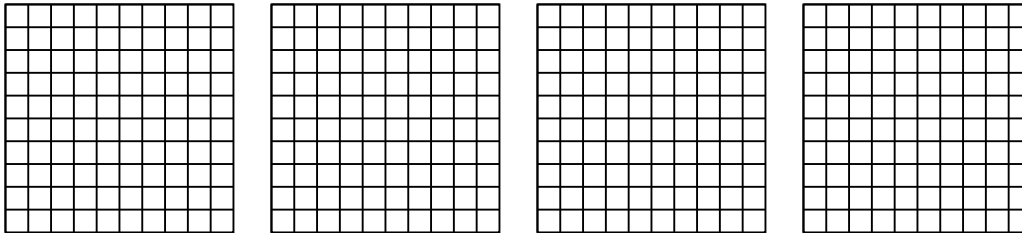
1) $5 \times 0.5 =$



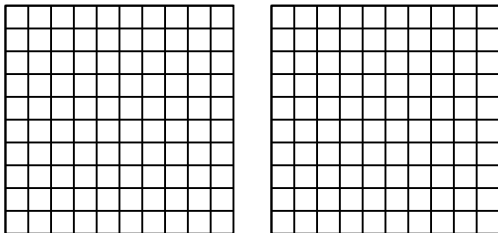
2) $8 \times 0.3 =$




3) $4 \times 0.32 =$



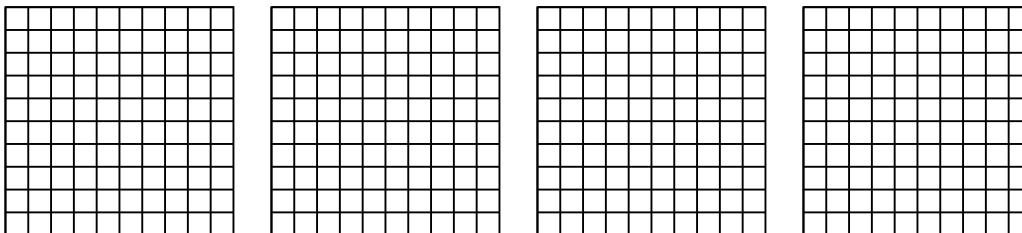
4) $2 \times 0.69 =$



5) $3 \times 0.97 =$



6) $4 \times 0.90 =$



Respuestas

1. _____

2. _____

3. _____

4. _____

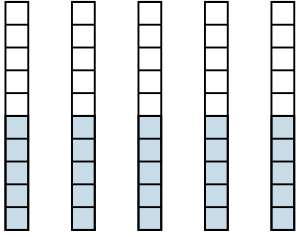
5. _____

6. _____

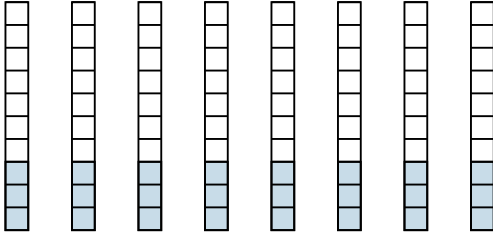


Usa el modelo visual para resolver cada problema.

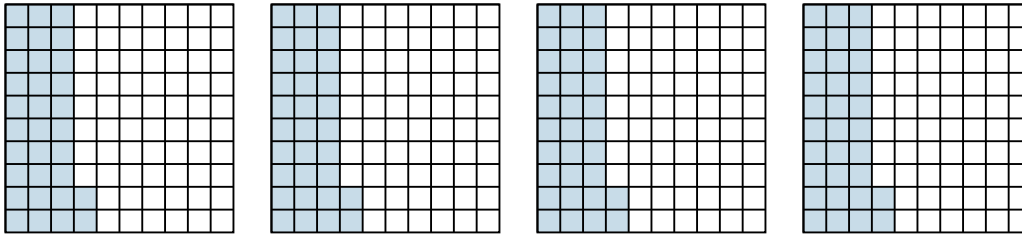
1) $5 \times 0.5 =$



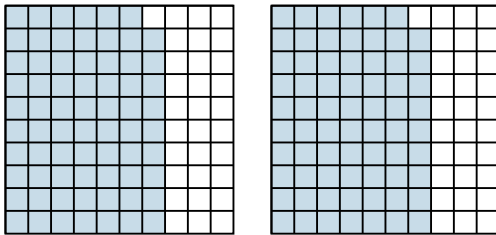
2) $8 \times 0.3 =$




3) $4 \times 0.32 =$



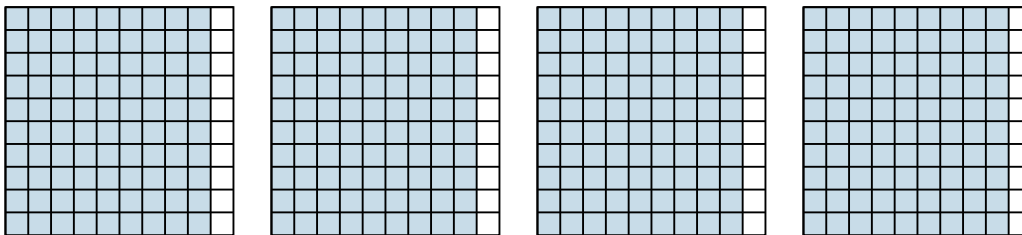
4) $2 \times 0.69 =$



5) $3 \times 0.97 =$



6) $4 \times 0.90 =$



Respuestas

1. $\frac{25}{10} = 2.5$

2. $\frac{24}{10} = 2.4$

3. $\frac{128}{100} = 1.28$

4. $\frac{138}{100} = 1.38$

5. $\frac{291}{100} = 2.91$

6. $\frac{360}{100} = 3.6$